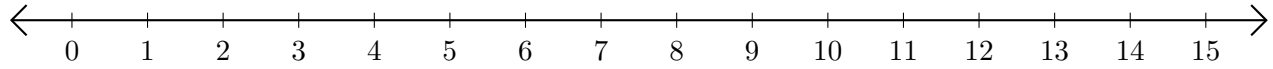


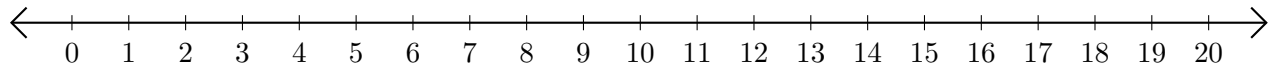
# Sumar en Rectas Numéricas (J)

Use las rectas numéricas para calcular cada suma.

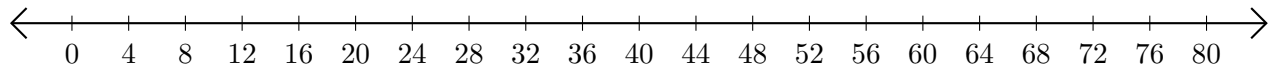
1.  $4 + 2 = \underline{\quad}$



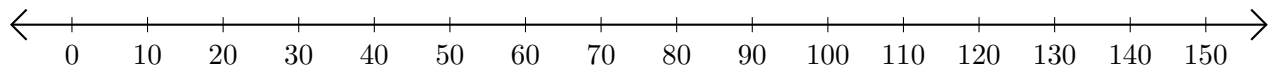
2.  $4 + 7 = \underline{\quad}$



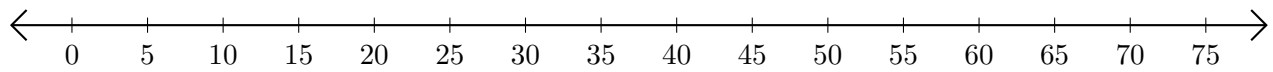
3.  $68 + 8 = \underline{\quad}$



4.  $140 + 10 = \underline{\quad}$



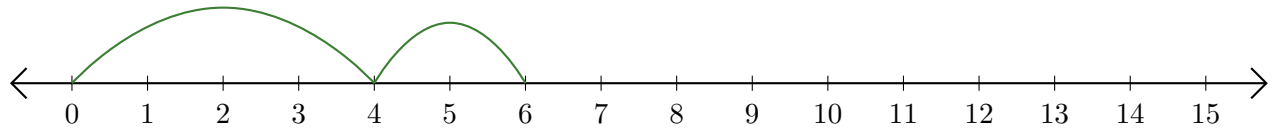
5.  $60 + 15 = \underline{\quad}$



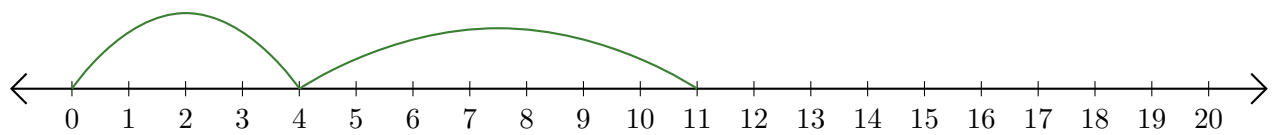
# Sumar en Rectas Numéricas (J) Respuestas

Use las rectas numéricas para calcular cada suma.

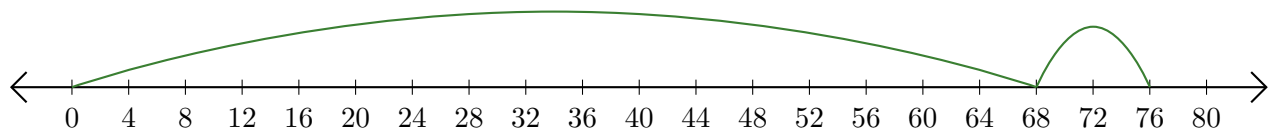
1.  $4 + 2 = \underline{6}$



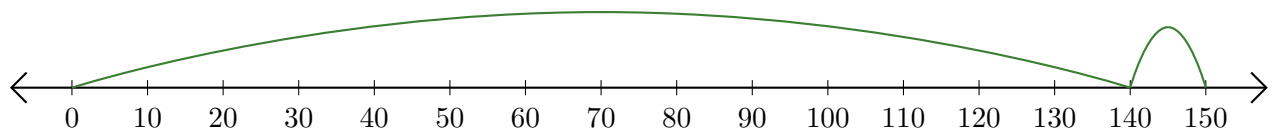
2.  $4 + 7 = \underline{11}$



3.  $68 + 8 = \underline{76}$



4.  $140 + 10 = \underline{150}$



5.  $60 + 15 = \underline{75}$

