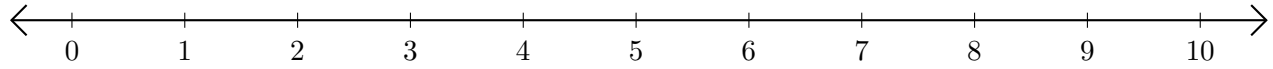


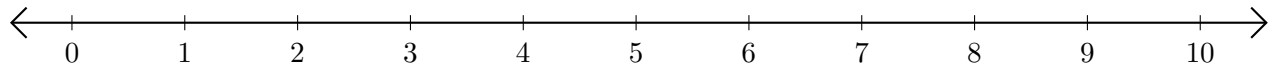
Sumar y Restar en Rectas Numéricas (A)

Use las rectas numéricas para calcular cada suma o diferencia.

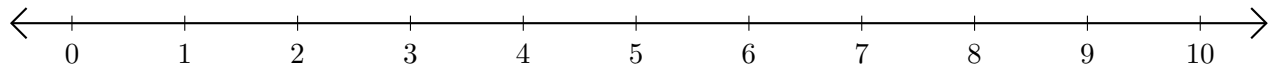
1. $6 + 2 = \underline{\quad}$



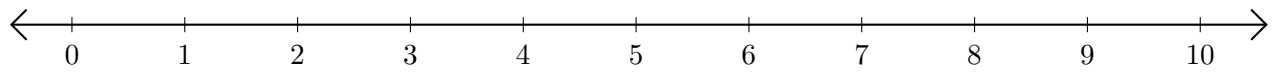
2. $10 - 9 = \underline{\quad}$



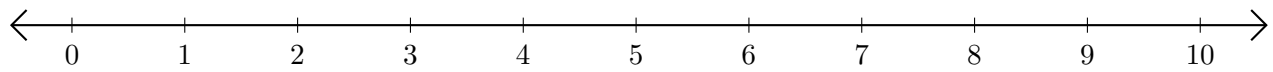
3. $3 + 4 = \underline{\quad}$



4. $6 - 5 = \underline{\quad}$



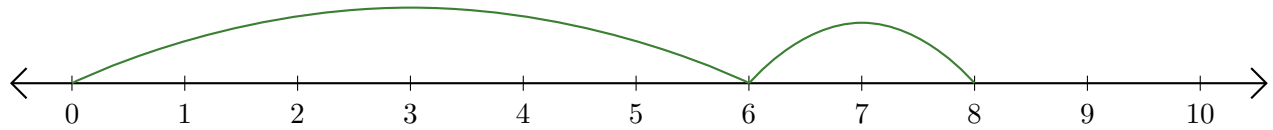
5. $7 - 2 = \underline{\quad}$



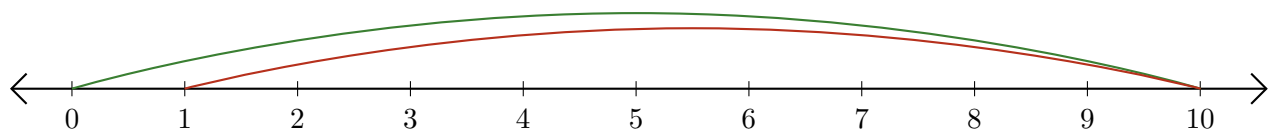
Sumar y Restar en Rectas Numéricas (A) Respuestas

Use las rectas numéricas para calcular cada suma o diferencia.

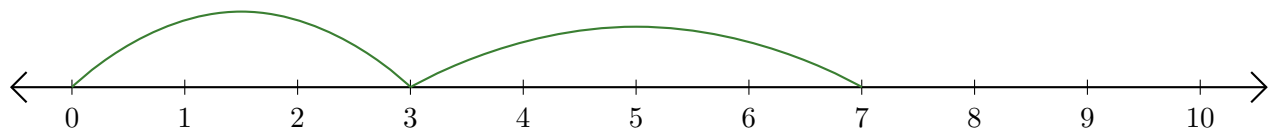
1. $6 + 2 = \underline{8}$



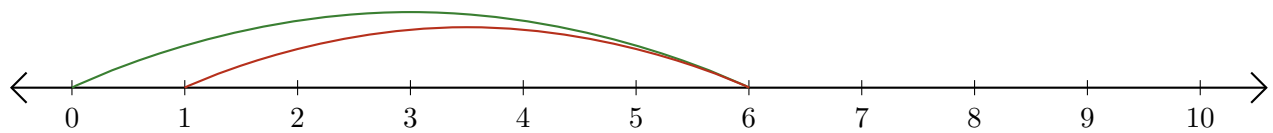
2. $10 - 9 = \underline{1}$



3. $3 + 4 = \underline{7}$



4. $6 - 5 = \underline{1}$



5. $7 - 2 = \underline{5}$

