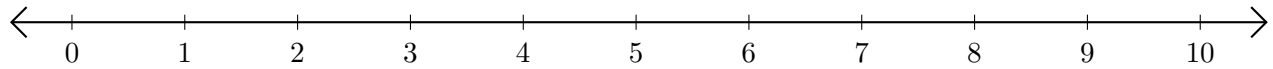


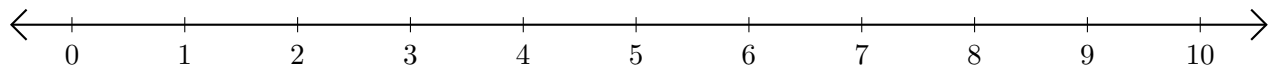
Sumar y Restar en Rectas Numéricas (B)

Use las rectas numéricas para calcular cada suma o diferencia.

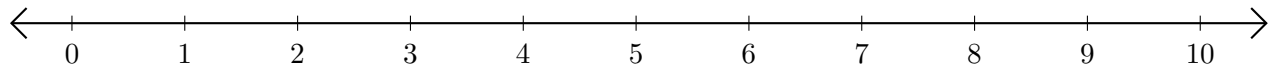
1. $9 + 1 = \underline{\quad}$



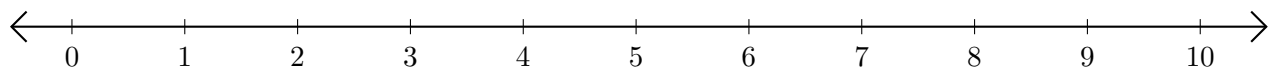
2. $10 - 8 = \underline{\quad}$



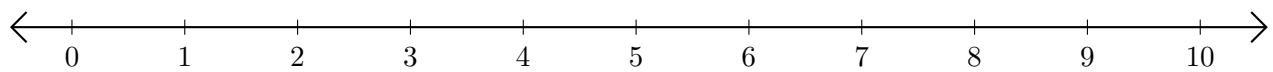
3. $7 + 1 = \underline{\quad}$



4. $9 - 1 = \underline{\quad}$



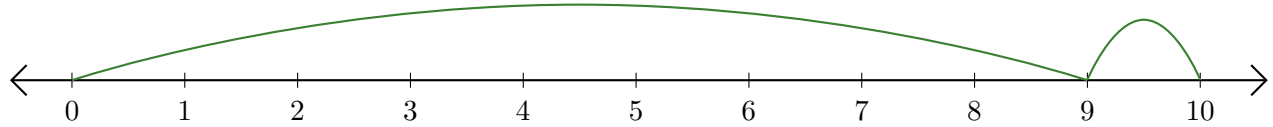
5. $10 - 2 = \underline{\quad}$



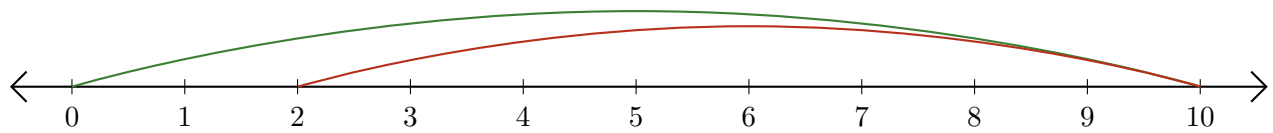
Sumar y Restar en Rectas Numéricas (B) Respuestas

Use las rectas numéricas para calcular cada suma o diferencia.

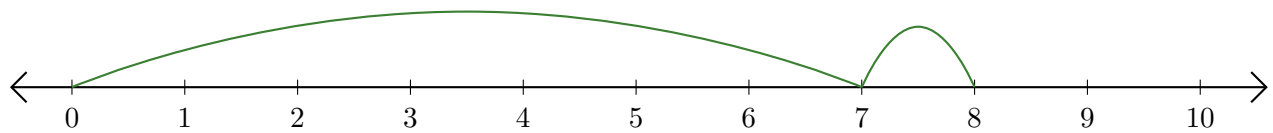
1. $9 + 1 = \underline{10}$



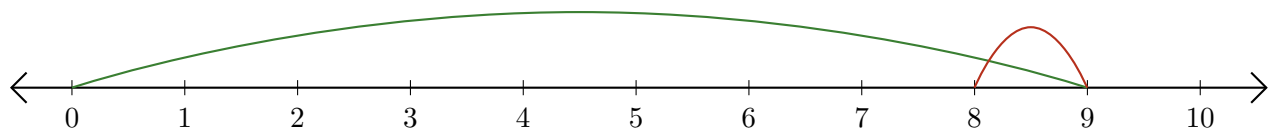
2. $10 - 8 = \underline{2}$



3. $7 + 1 = \underline{8}$



4. $9 - 1 = \underline{8}$



5. $10 - 2 = \underline{8}$

