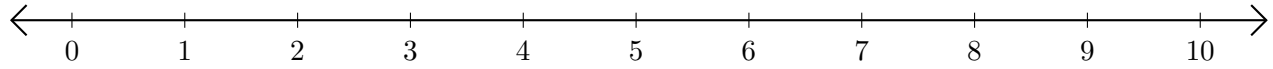


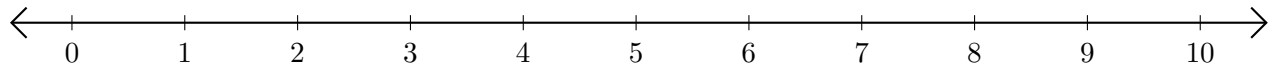
Sumar y Restar en Rectas Numéricas (D)

Use las rectas numéricas para calcular cada suma o diferencia.

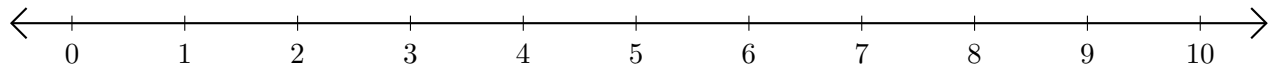
1. $6 + 2 = \underline{\quad}$



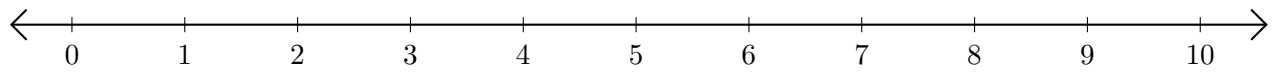
2. $10 - 4 = \underline{\quad}$



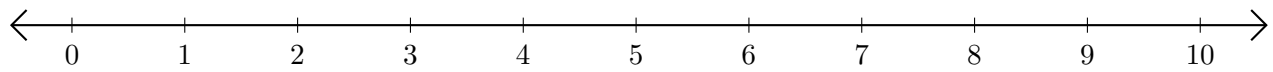
3. $9 + 1 = \underline{\quad}$



4. $8 - 5 = \underline{\quad}$



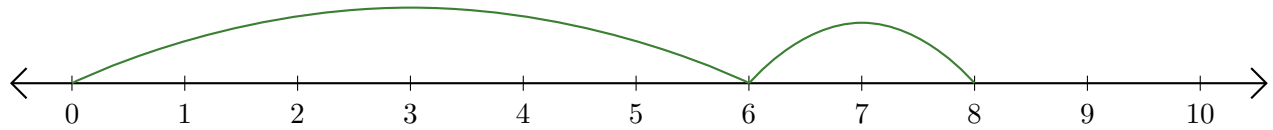
5. $8 - 3 = \underline{\quad}$



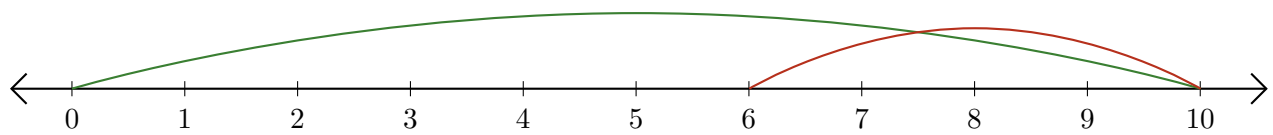
Sumar y Restar en Rectas Numéricas (D) Respuestas

Use las rectas numéricas para calcular cada suma o diferencia.

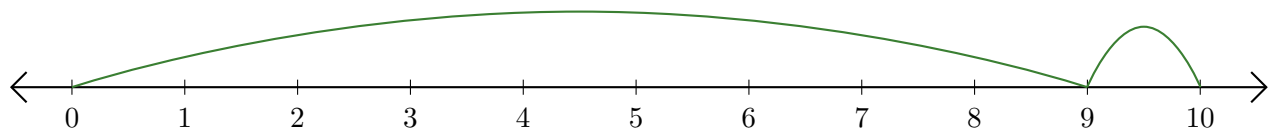
1. $6 + 2 = \underline{8}$



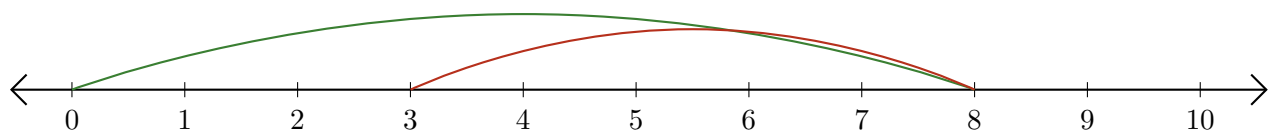
2. $10 - 4 = \underline{6}$



3. $9 + 1 = \underline{10}$



4. $8 - 5 = \underline{3}$



5. $8 - 3 = \underline{5}$

