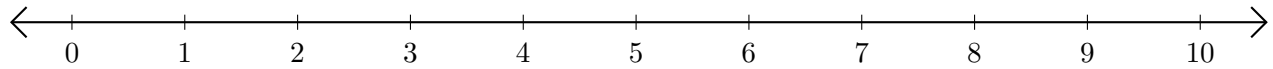


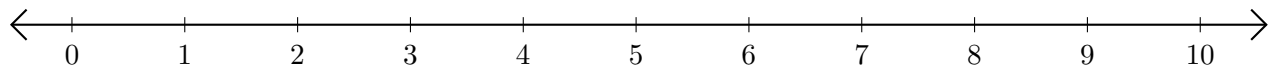
Sumar y Restar en Rectas Numéricas (I)

Use las rectas numéricas para calcular cada suma o diferencia.

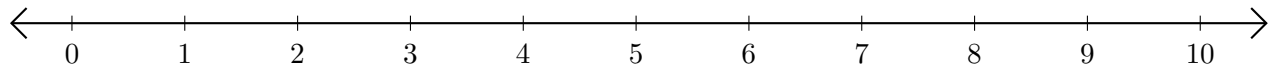
1. $5 + 5 = \underline{\quad}$



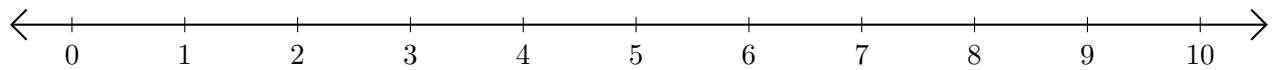
2. $10 - 6 = \underline{\quad}$



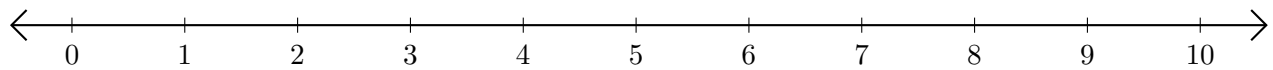
3. $4 + 4 = \underline{\quad}$



4. $10 - 9 = \underline{\quad}$



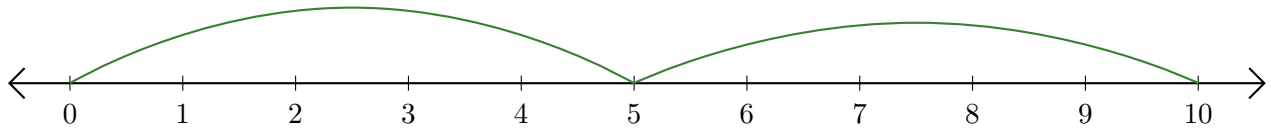
5. $2 + 6 = \underline{\quad}$



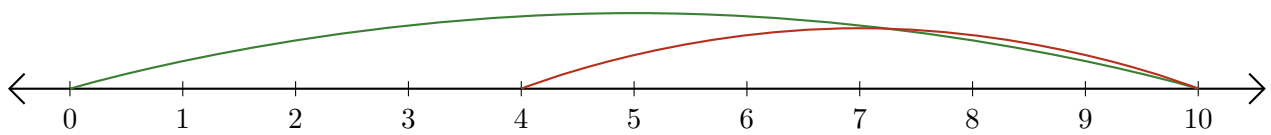
Sumar y Restar en Rectas Numéricas (I) Respuestas

Use las rectas numéricas para calcular cada suma o diferencia.

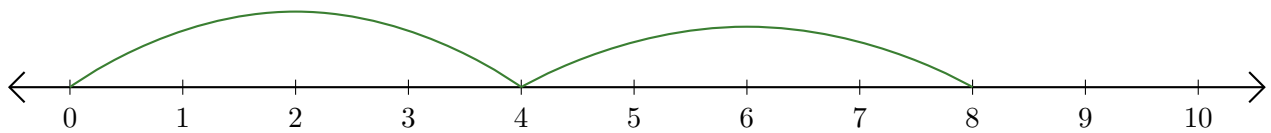
1. $5 + 5 = \underline{10}$



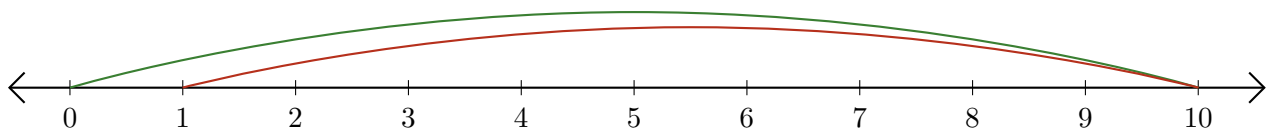
2. $10 - 6 = \underline{4}$



3. $4 + 4 = \underline{8}$



4. $10 - 9 = \underline{1}$



5. $2 + 6 = \underline{8}$

