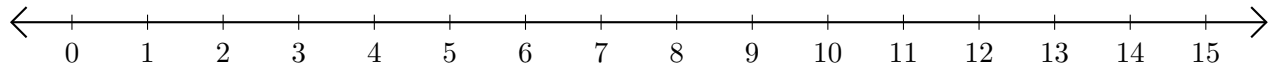


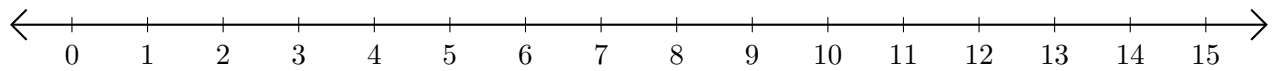
# Sumar y Restar en Rectas Numéricas (G)

Use las rectas numéricas para calcular cada suma o diferencia.

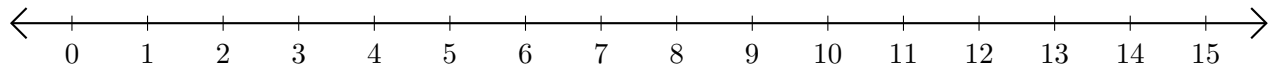
1.  $13 + 2 = \underline{\quad}$



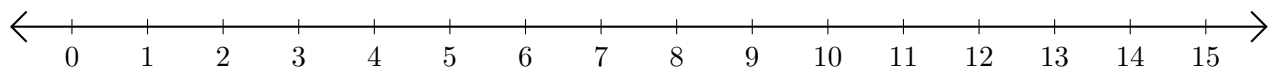
2.  $12 - 5 = \underline{\quad}$



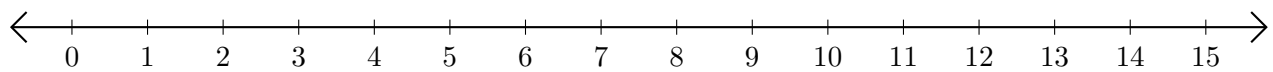
3.  $4 + 9 = \underline{\quad}$



4.  $2 - 1 = \underline{\quad}$



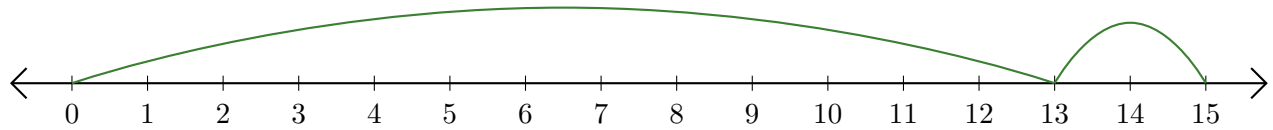
5.  $11 - 7 = \underline{\quad}$



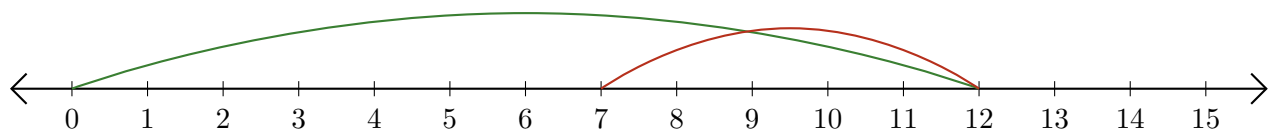
# Sumar y Restar en Rectas Numéricas (G) Respuestas

Use las rectas numéricas para calcular cada suma o diferencia.

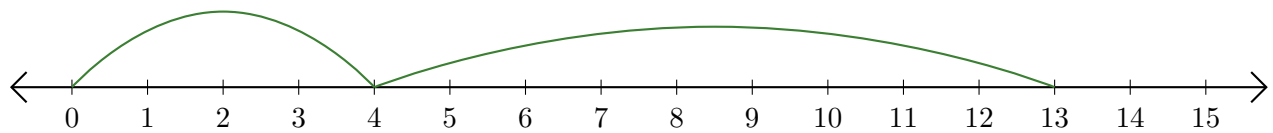
1.  $13 + 2 = \underline{15}$



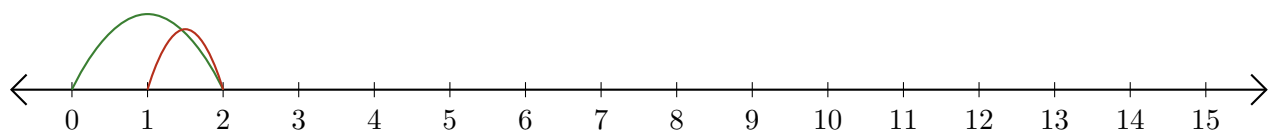
2.  $12 - 5 = \underline{7}$



3.  $4 + 9 = \underline{13}$



4.  $2 - 1 = \underline{1}$



5.  $11 - 7 = \underline{4}$

