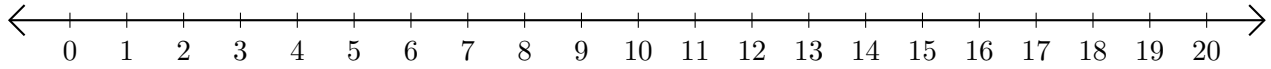


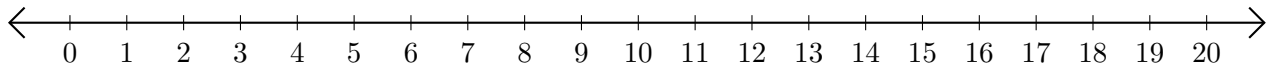
Sumar y Restar en Rectas Numéricas (C)

Use las rectas numéricas para calcular cada suma o diferencia.

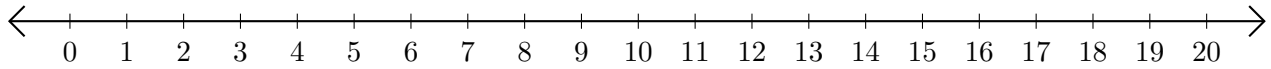
1. $3 + 17 = \underline{\quad}$



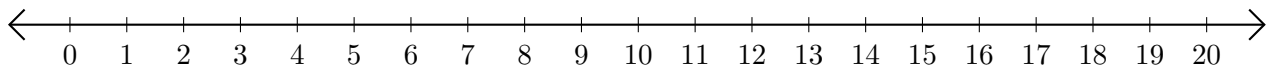
2. $20 - 17 = \underline{\quad}$



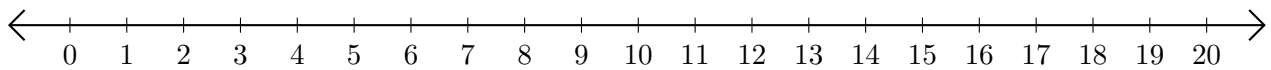
3. $6 + 1 = \underline{\quad}$



4. $15 - 1 = \underline{\quad}$



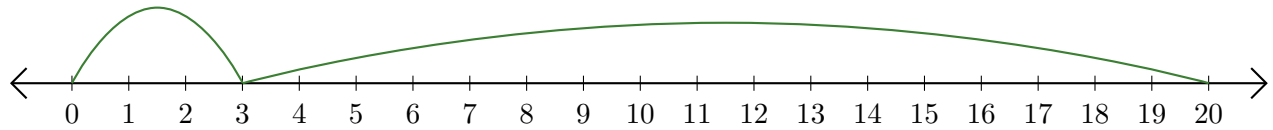
5. $5 + 10 = \underline{\quad}$



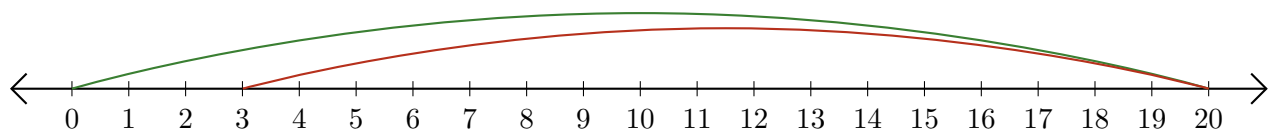
Sumar y Restar en Rectas Numéricas (C) Respuestas

Use las rectas numéricas para calcular cada suma o diferencia.

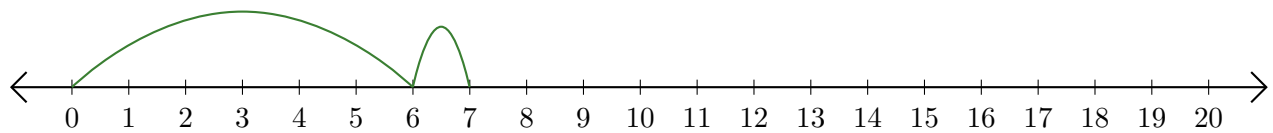
1. $3 + 17 = \underline{20}$



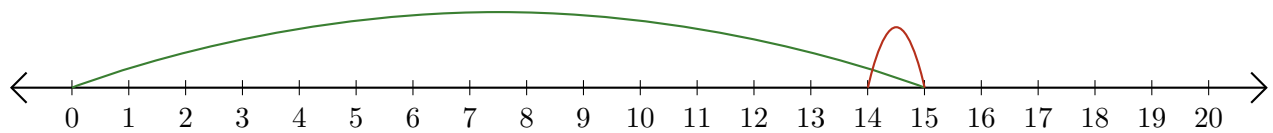
2. $20 - 17 = \underline{3}$



3. $6 + 1 = \underline{7}$



4. $15 - 1 = \underline{14}$



5. $5 + 10 = \underline{15}$

