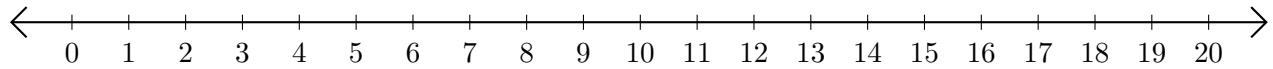


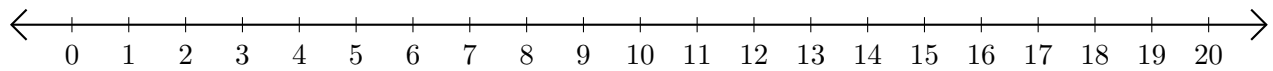
Sumar y Restar en Rectas Numéricas (D)

Use las rectas numéricas para calcular cada suma o diferencia.

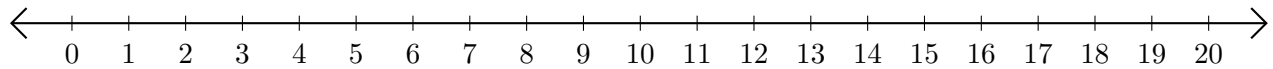
1. $1 + 5 = \underline{\quad}$



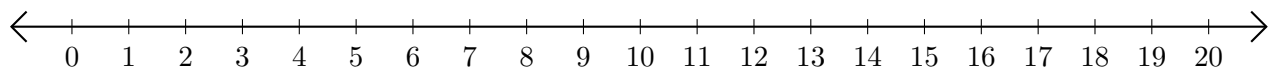
2. $18 - 8 = \underline{\quad}$



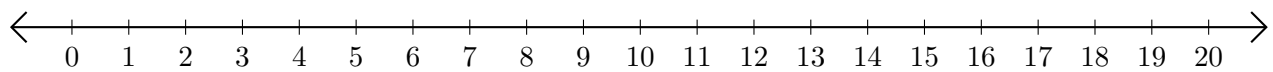
3. $15 + 3 = \underline{\quad}$



4. $20 - 17 = \underline{\quad}$



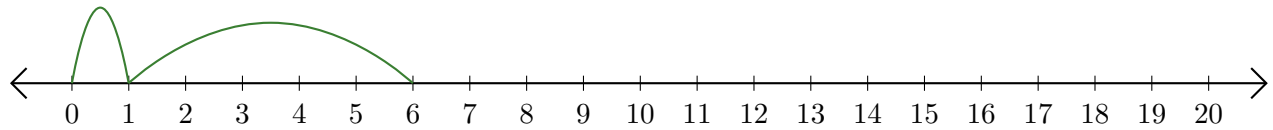
5. $9 + 4 = \underline{\quad}$



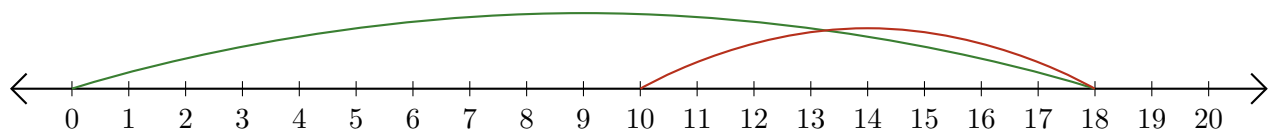
Sumar y Restar en Rectas Numéricas (D) Respuestas

Use las rectas numéricas para calcular cada suma o diferencia.

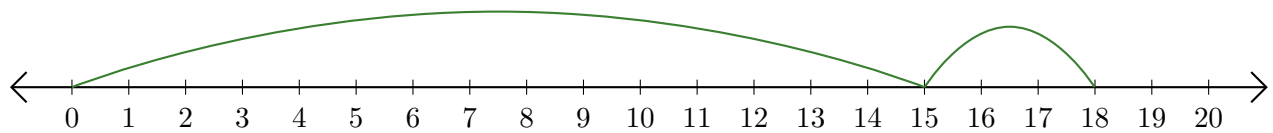
1. $1 + 5 = \underline{6}$



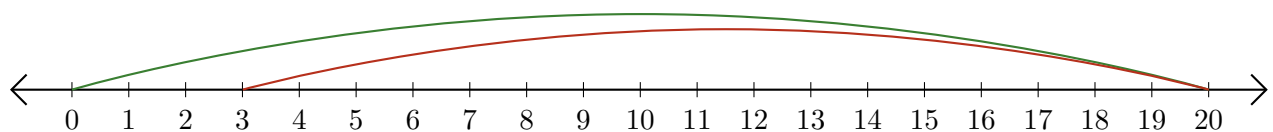
2. $18 - 8 = \underline{10}$



3. $15 + 3 = \underline{18}$



4. $20 - 17 = \underline{3}$



5. $9 + 4 = \underline{13}$

