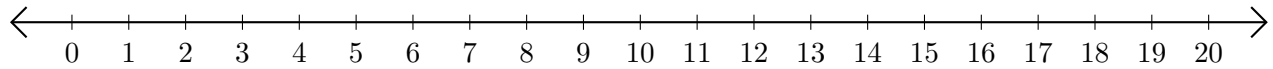


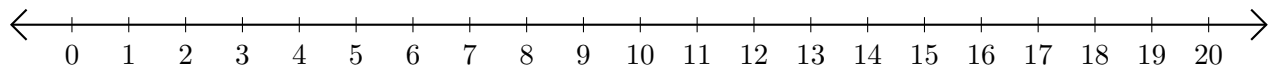
# Sumar y Restar en Rectas Numéricas (E)

Use las rectas numéricas para calcular cada suma o diferencia.

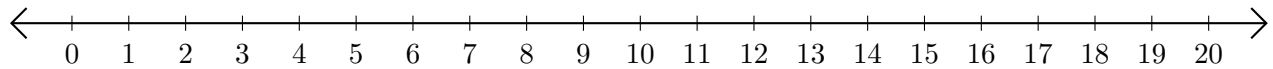
1.  $14 + 5 = \underline{\quad}$



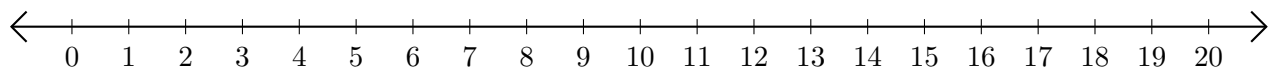
2.  $18 - 17 = \underline{\quad}$



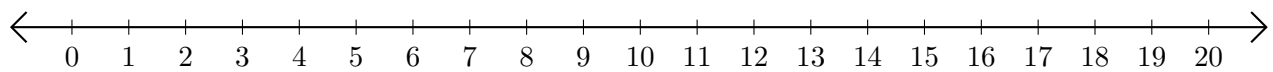
3.  $3 + 6 = \underline{\quad}$



4.  $17 - 6 = \underline{\quad}$



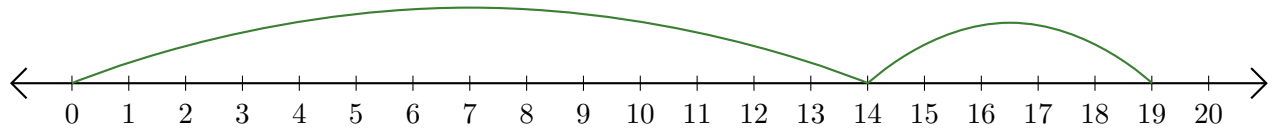
5.  $19 + 1 = \underline{\quad}$



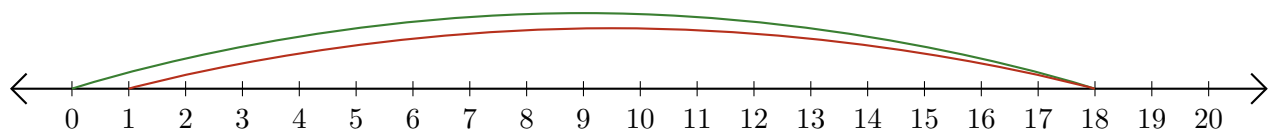
# Sumar y Restar en Rectas Numéricas (E) Respuestas

Use las rectas numéricas para calcular cada suma o diferencia.

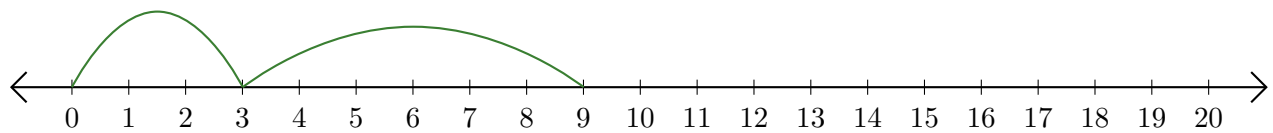
1.  $14 + 5 = \underline{19}$



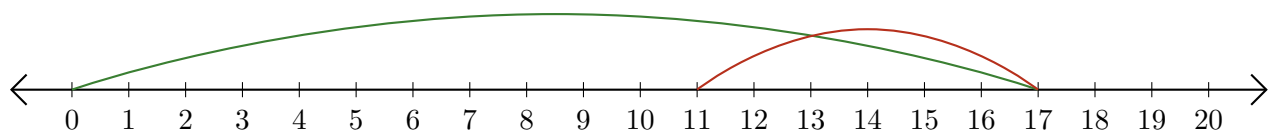
2.  $18 - 17 = \underline{1}$



3.  $3 + 6 = \underline{9}$



4.  $17 - 6 = \underline{11}$



5.  $19 + 1 = \underline{20}$

