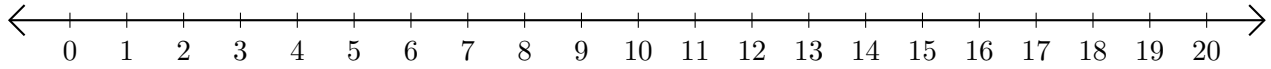


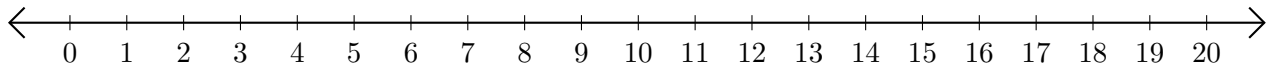
Sumar y Restar en Rectas Numéricas (F)

Use las rectas numéricas para calcular cada suma o diferencia.

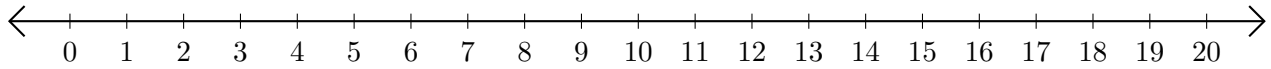
1. $19 + 1 = \underline{\quad}$



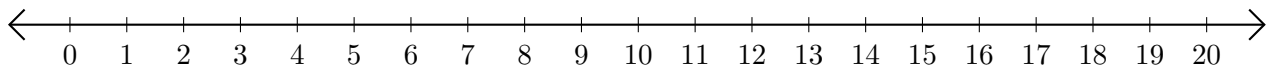
2. $10 - 6 = \underline{\quad}$



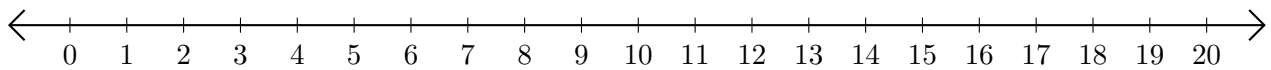
3. $3 + 1 = \underline{\quad}$



4. $15 - 13 = \underline{\quad}$



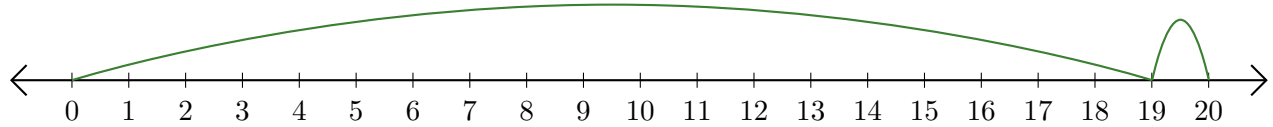
5. $5 + 15 = \underline{\quad}$



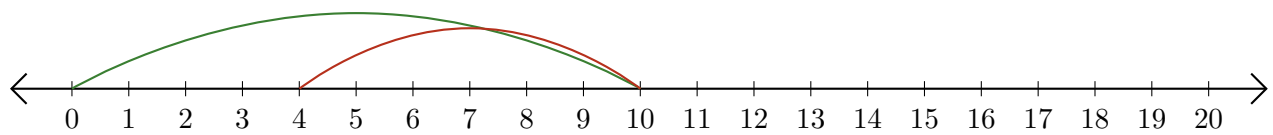
Sumar y Restar en Rectas Numéricas (F) Respuestas

Use las rectas numéricas para calcular cada suma o diferencia.

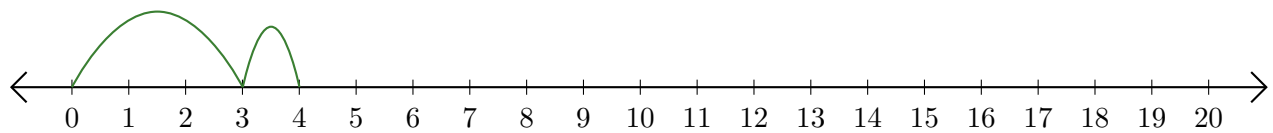
1. $19 + 1 = \underline{20}$



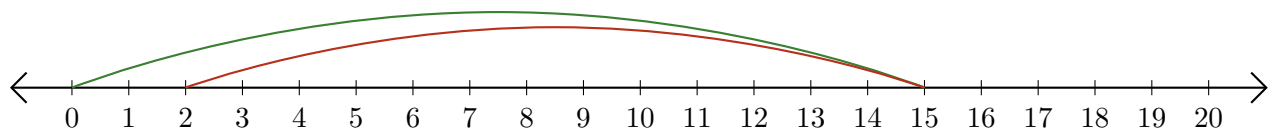
2. $10 - 6 = \underline{4}$



3. $3 + 1 = \underline{4}$



4. $15 - 13 = \underline{2}$



5. $5 + 15 = \underline{20}$

