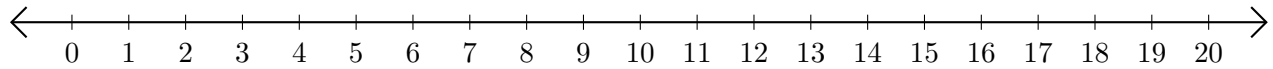


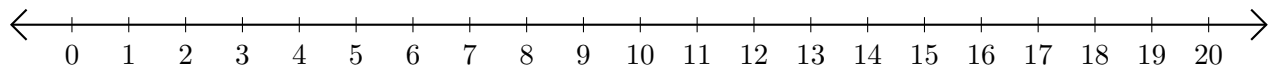
Sumar y Restar en Rectas Numéricas (G)

Use las rectas numéricas para calcular cada suma o diferencia.

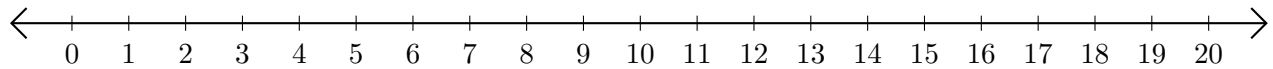
1. $5 + 14 = \underline{\quad}$



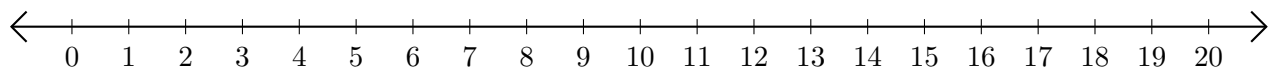
2. $18 - 15 = \underline{\quad}$



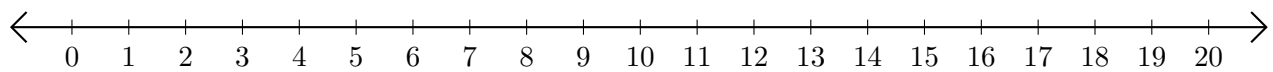
3. $4 + 5 = \underline{\quad}$



4. $11 - 1 = \underline{\quad}$



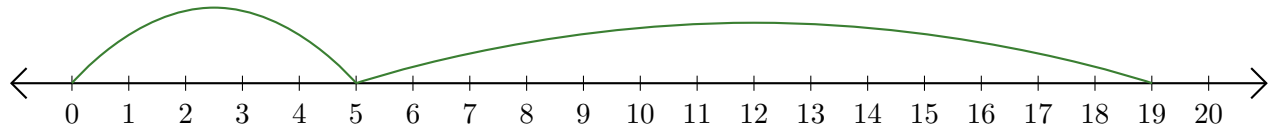
5. $7 + 7 = \underline{\quad}$



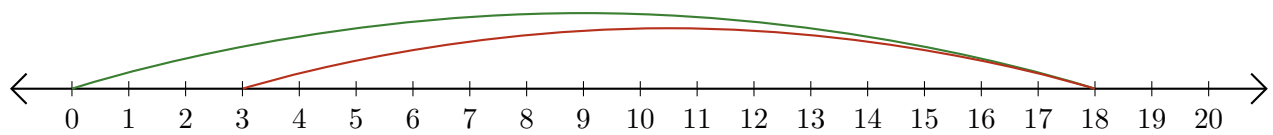
Sumar y Restar en Rectas Numéricas (G) Respuestas

Use las rectas numéricas para calcular cada suma o diferencia.

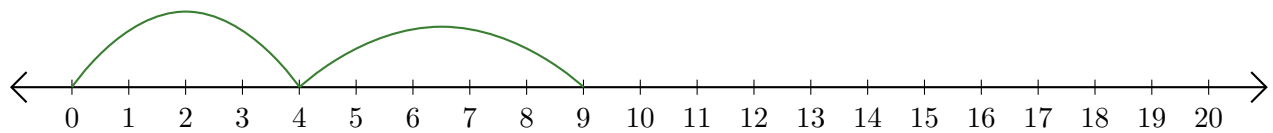
1. $5 + 14 = \underline{19}$



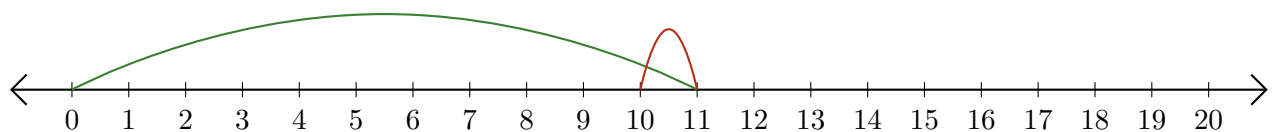
2. $18 - 15 = \underline{3}$



3. $4 + 5 = \underline{9}$



4. $11 - 1 = \underline{10}$



5. $7 + 7 = \underline{14}$

