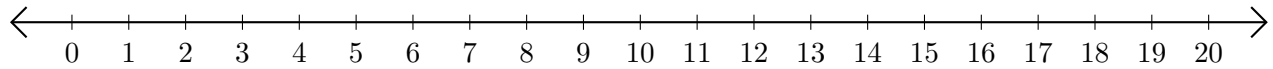


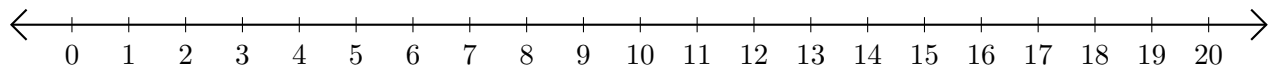
# Sumar y Restar en Rectas Numéricas (H)

Use las rectas numéricas para calcular cada suma o diferencia.

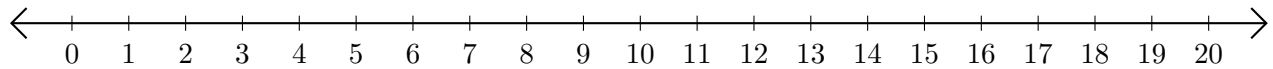
1.  $7 + 2 = \underline{\quad}$



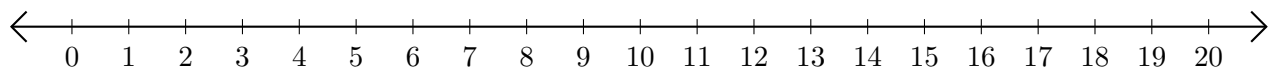
2.  $20 - 3 = \underline{\quad}$



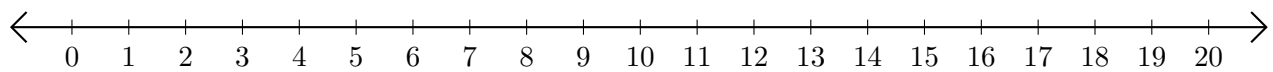
3.  $19 + 1 = \underline{\quad}$



4.  $14 - 4 = \underline{\quad}$



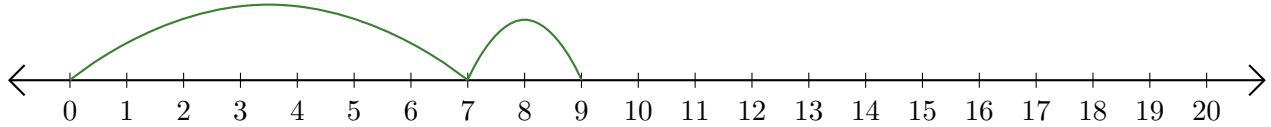
5.  $16 - 14 = \underline{\quad}$



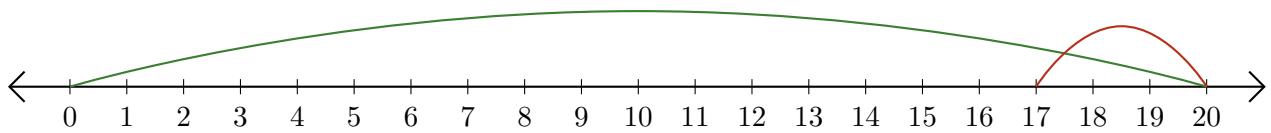
# Sumar y Restar en Rectas Numéricas (H) Respuestas

Use las rectas numéricas para calcular cada suma o diferencia.

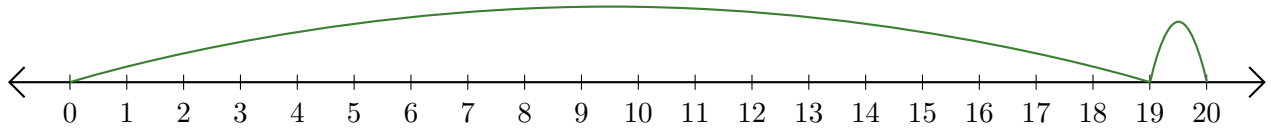
1.  $7 + 2 = \underline{9}$



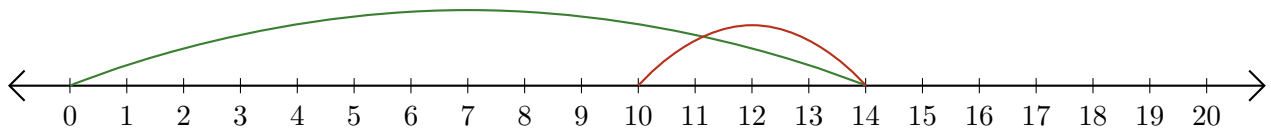
2.  $20 - 3 = \underline{17}$



3.  $19 + 1 = \underline{20}$



4.  $14 - 4 = \underline{10}$



5.  $16 - 14 = \underline{2}$

