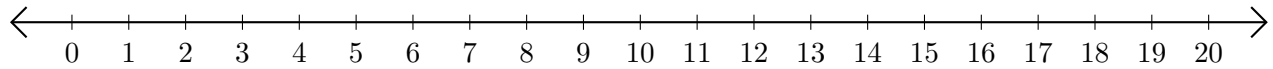


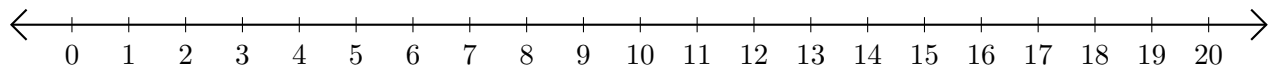
Sumar y Restar en Rectas Numéricas (I)

Use las rectas numéricas para calcular cada suma o diferencia.

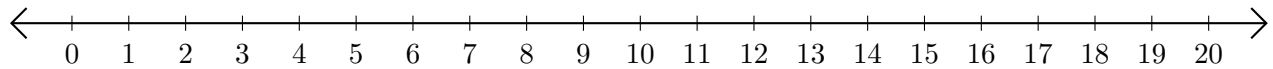
1. $15 + 4 = \underline{\quad}$



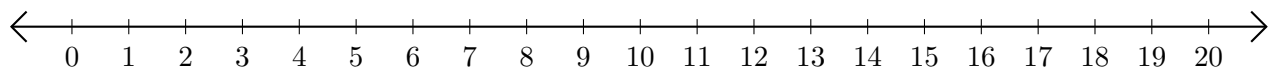
2. $16 - 8 = \underline{\quad}$



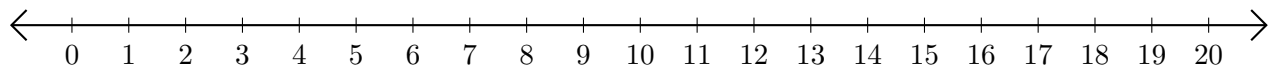
3. $16 + 1 = \underline{\quad}$



4. $17 - 5 = \underline{\quad}$



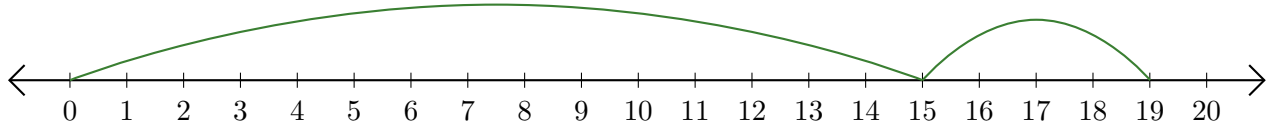
5. $20 - 14 = \underline{\quad}$



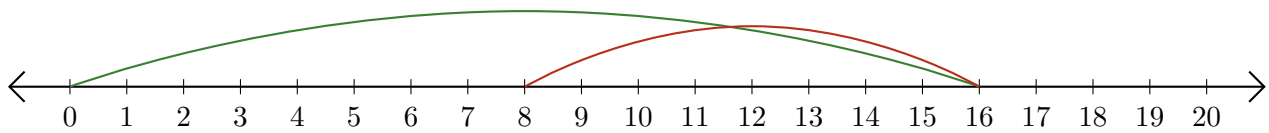
Sumar y Restar en Rectas Numéricas (I) Respuestas

Use las rectas numéricas para calcular cada suma o diferencia.

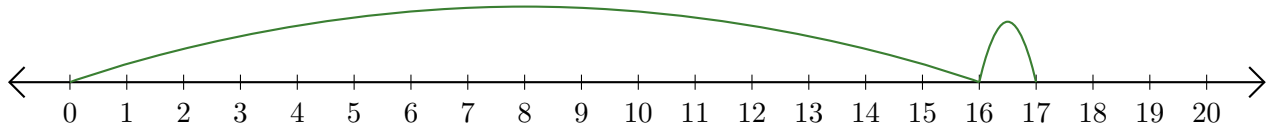
1. $15 + 4 = \underline{19}$



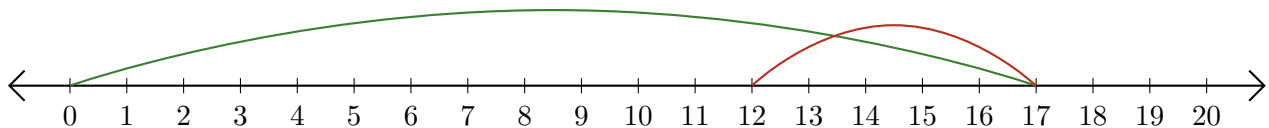
2. $16 - 8 = \underline{8}$



3. $16 + 1 = \underline{17}$



4. $17 - 5 = \underline{12}$



5. $20 - 14 = \underline{6}$

