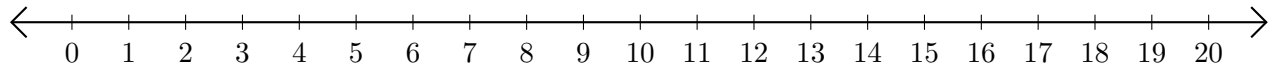


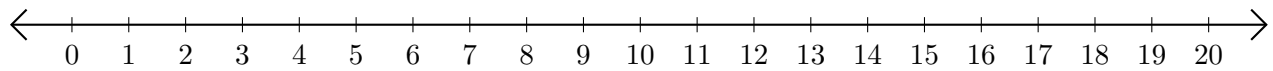
Sumar y Restar en Rectas Numéricas (J)

Use las rectas numéricas para calcular cada suma o diferencia.

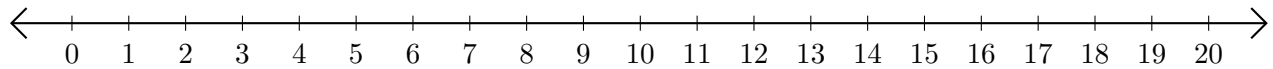
1. $15 + 5 = \underline{\quad}$



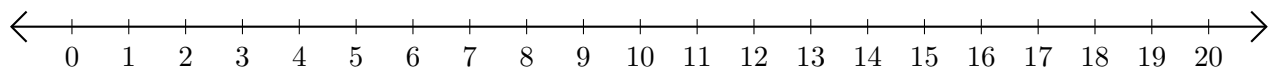
2. $19 - 7 = \underline{\quad}$



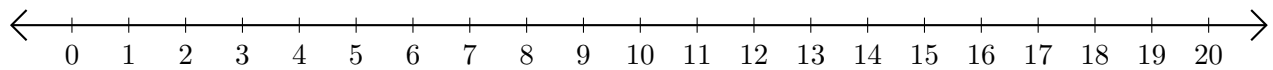
3. $5 + 12 = \underline{\quad}$



4. $20 - 19 = \underline{\quad}$



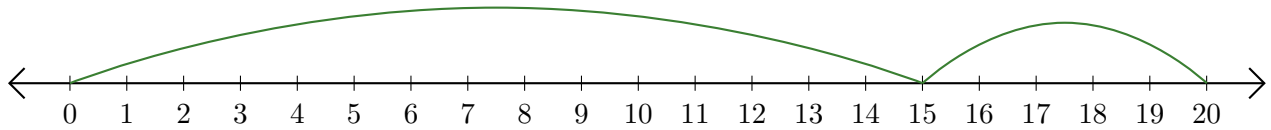
5. $9 + 8 = \underline{\quad}$



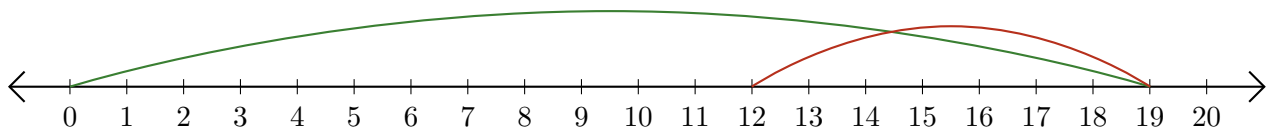
Sumar y Restar en Rectas Numéricas (J) Respuestas

Use las rectas numéricas para calcular cada suma o diferencia.

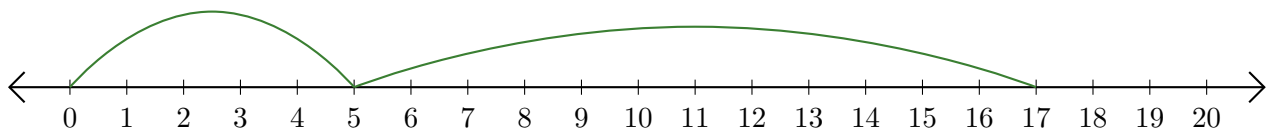
1. $15 + 5 = \underline{20}$



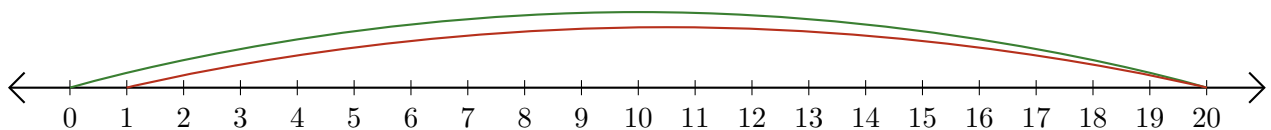
2. $19 - 7 = \underline{12}$



3. $5 + 12 = \underline{17}$



4. $20 - 19 = \underline{1}$



5. $9 + 8 = \underline{17}$

