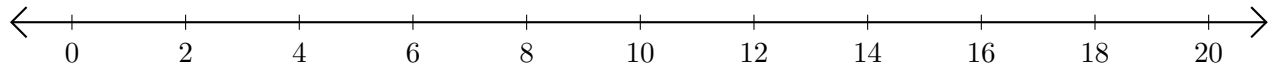


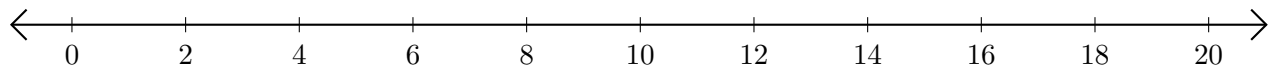
Sumar y Restar en Rectas Numéricas (C)

Use las rectas numéricas para calcular cada suma o diferencia.

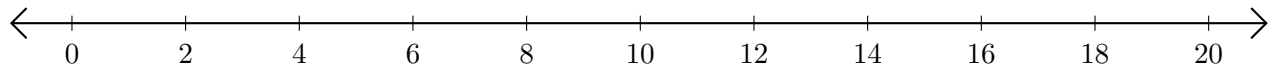
1. $14 + 6 = \underline{\quad}$



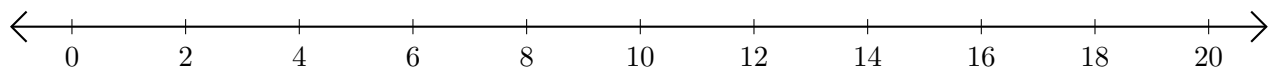
2. $20 - 18 = \underline{\quad}$



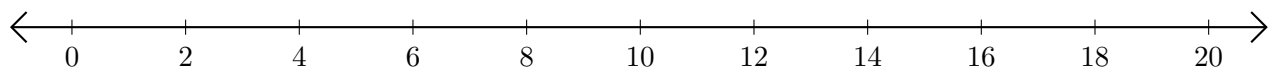
3. $12 + 8 = \underline{\quad}$



4. $16 - 8 = \underline{\quad}$



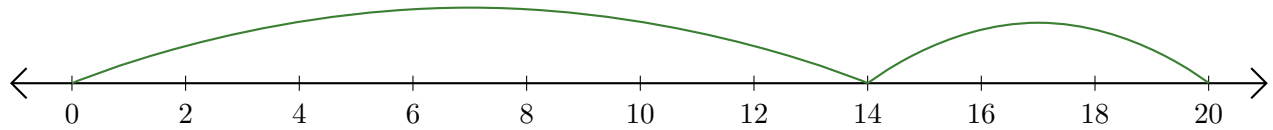
5. $20 - 16 = \underline{\quad}$



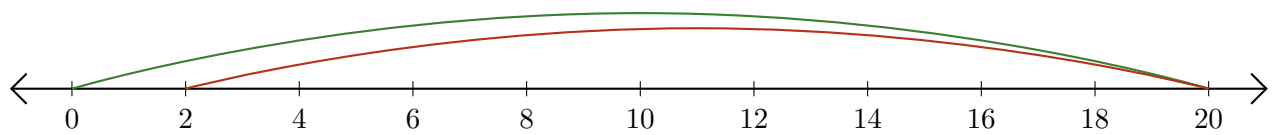
Sumar y Restar en Rectas Numéricas (C) Respuestas

Use las rectas numéricas para calcular cada suma o diferencia.

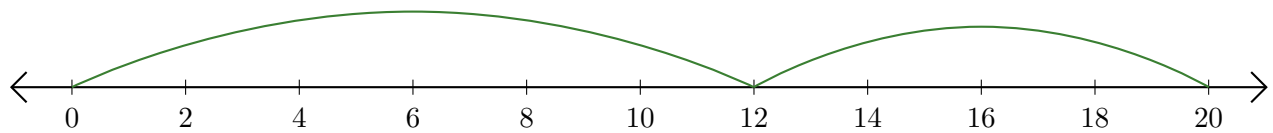
1. $14 + 6 = \underline{20}$



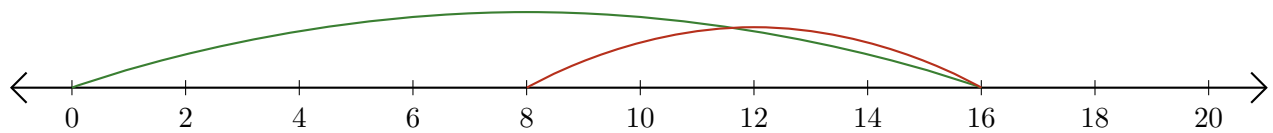
2. $20 - 18 = \underline{2}$



3. $12 + 8 = \underline{20}$



4. $16 - 8 = \underline{8}$



5. $20 - 16 = \underline{4}$

