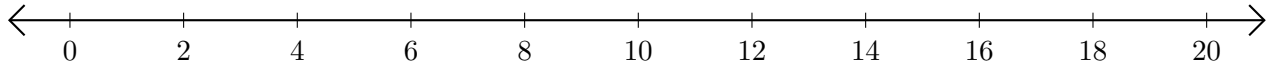


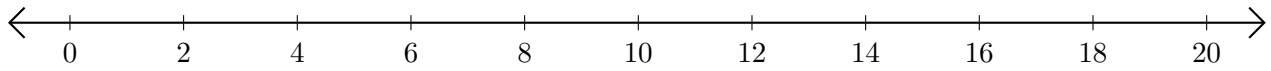
# Sumar y Restar en Rectas Numéricas (F)

Use las rectas numéricas para calcular cada suma o diferencia.

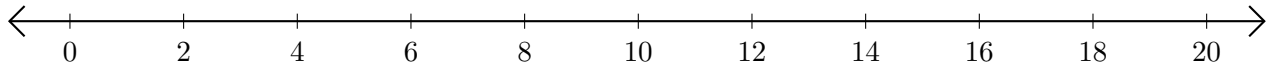
1.  $8 + 12 = \underline{\quad}$



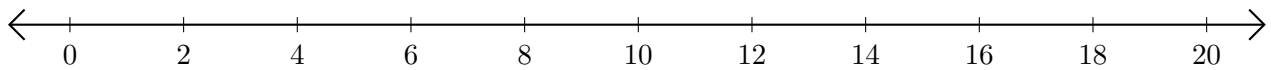
2.  $18 - 16 = \underline{\quad}$



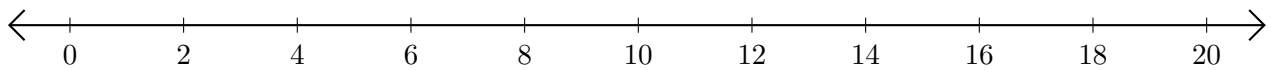
3.  $6 + 4 = \underline{\quad}$



4.  $20 - 14 = \underline{\quad}$



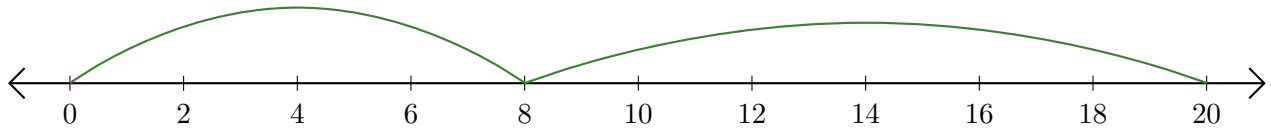
5.  $18 - 2 = \underline{\quad}$



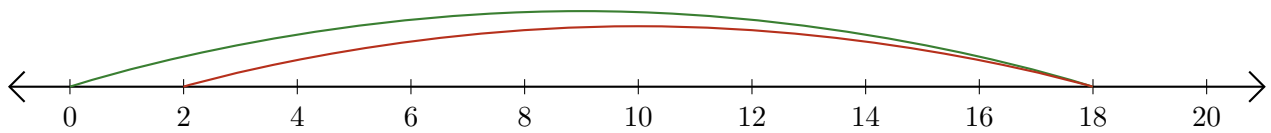
# Sumar y Restar en Rectas Numéricas (F) Respuestas

Use las rectas numéricas para calcular cada suma o diferencia.

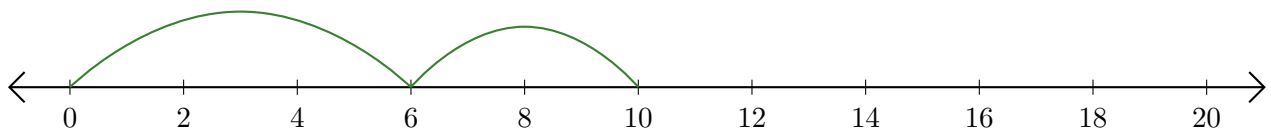
1.  $8 + 12 = \underline{20}$



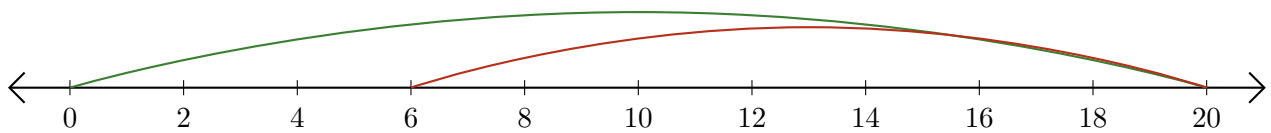
2.  $18 - 16 = \underline{2}$



3.  $6 + 4 = \underline{10}$



4.  $20 - 14 = \underline{6}$



5.  $18 - 2 = \underline{16}$

