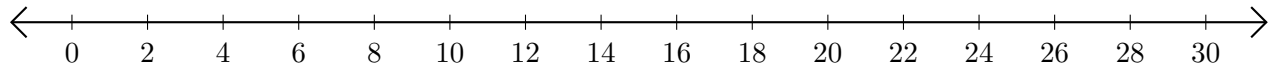


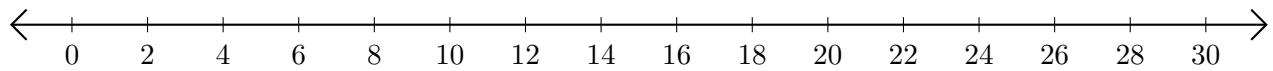
Sumar y Restar en Rectas Numéricas (B)

Use las rectas numéricas para calcular cada suma o diferencia.

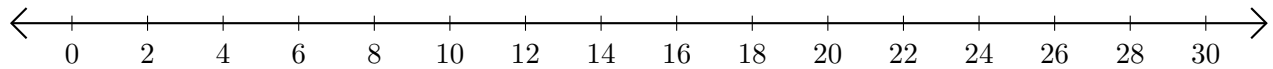
1. $12 + 6 = \underline{\quad}$



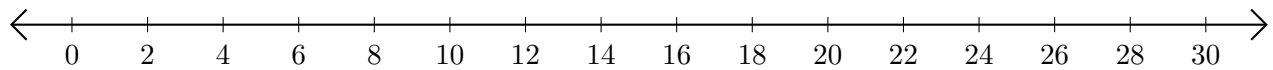
2. $26 - 22 = \underline{\quad}$



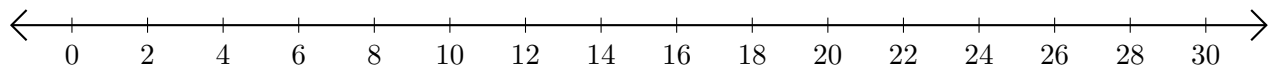
3. $10 + 12 = \underline{\quad}$



4. $28 - 26 = \underline{\quad}$



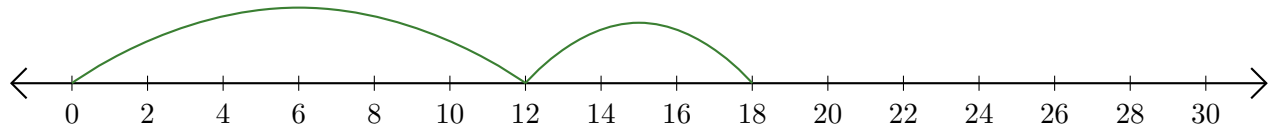
5. $20 - 6 = \underline{\quad}$



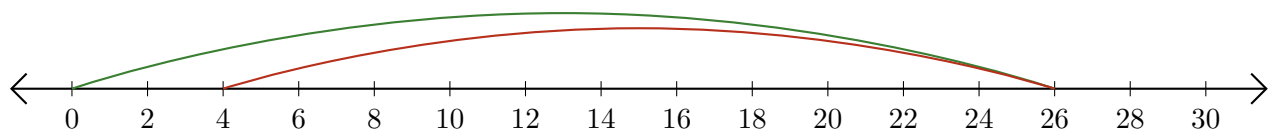
Sumar y Restar en Rectas Numéricas (B) Respuestas

Use las rectas numéricas para calcular cada suma o diferencia.

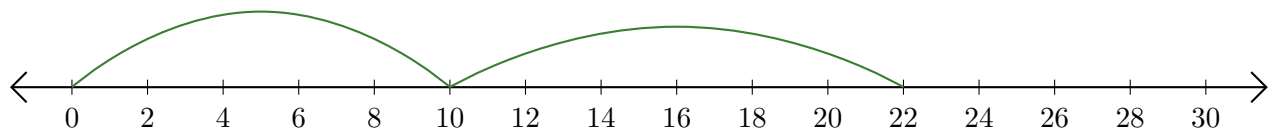
1. $12 + 6 = \underline{18}$



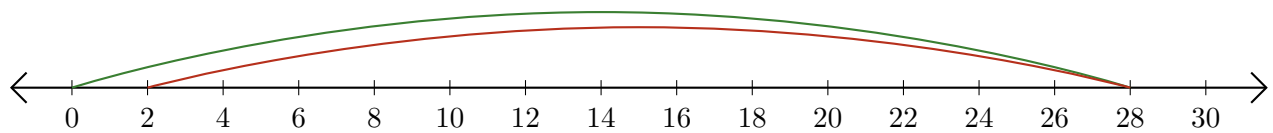
2. $26 - 22 = \underline{4}$



3. $10 + 12 = \underline{22}$



4. $28 - 26 = \underline{2}$



5. $20 - 6 = \underline{14}$

