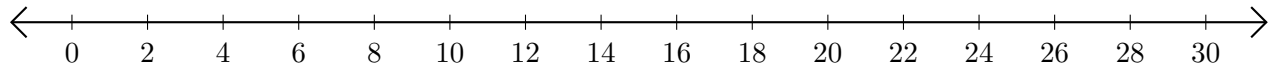


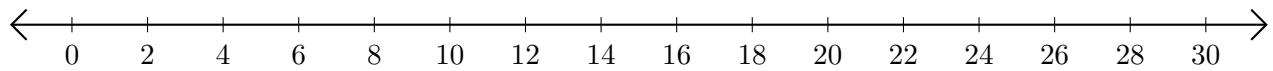
# Sumar y Restar en Rectas Numéricas (C)

Use las rectas numéricas para calcular cada suma o diferencia.

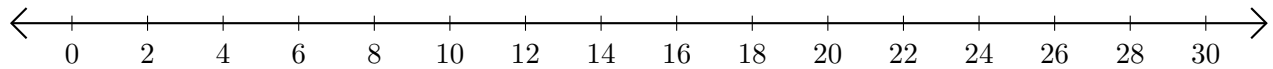
1.  $6 + 16 = \underline{\quad}$



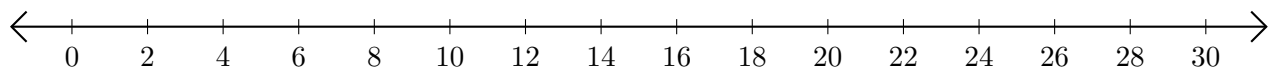
2.  $30 - 24 = \underline{\quad}$



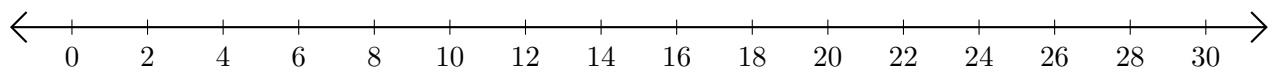
3.  $16 + 8 = \underline{\quad}$



4.  $28 - 14 = \underline{\quad}$



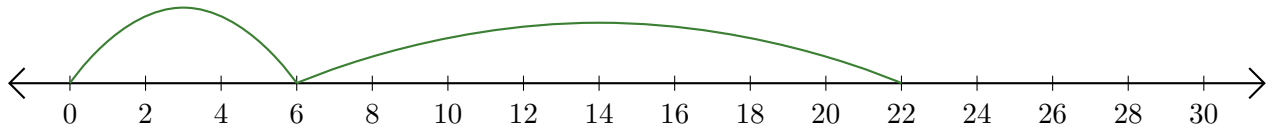
5.  $30 - 28 = \underline{\quad}$



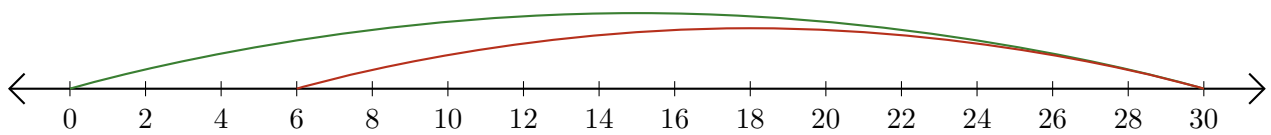
# Sumar y Restar en Rectas Numéricas (C) Respuestas

Use las rectas numéricas para calcular cada suma o diferencia.

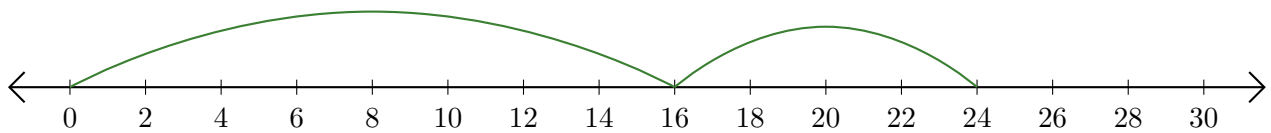
1.  $6 + 16 = \underline{22}$



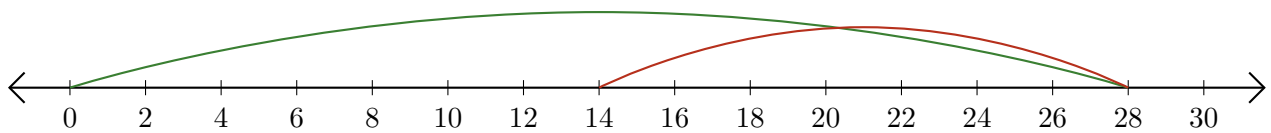
2.  $30 - 24 = \underline{6}$



3.  $16 + 8 = \underline{24}$



4.  $28 - 14 = \underline{14}$



5.  $30 - 28 = \underline{2}$

