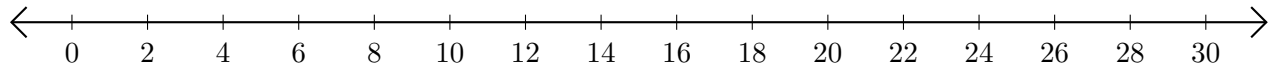


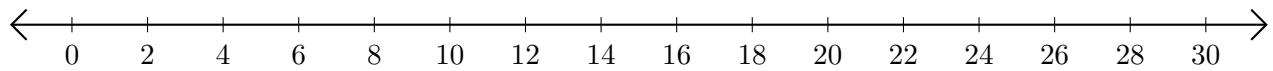
Sumar y Restar en Rectas Numéricas (D)

Use las rectas numéricas para calcular cada suma o diferencia.

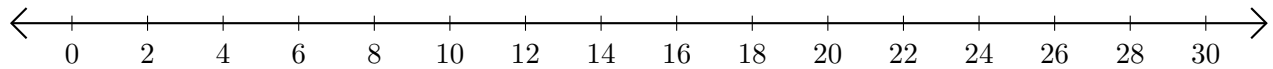
1. $18 + 8 = \underline{\quad}$



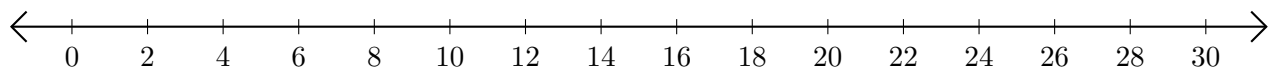
2. $28 - 22 = \underline{\quad}$



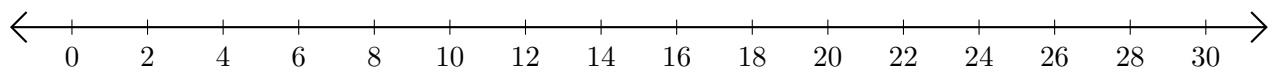
3. $24 + 2 = \underline{\quad}$



4. $30 - 28 = \underline{\quad}$



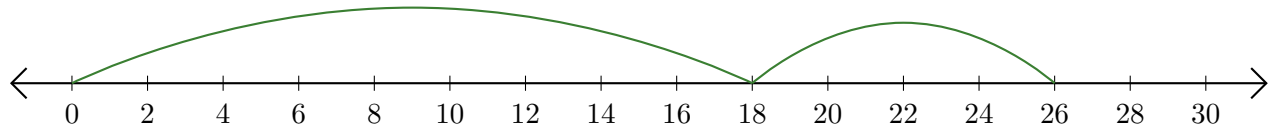
5. $4 + 6 = \underline{\quad}$



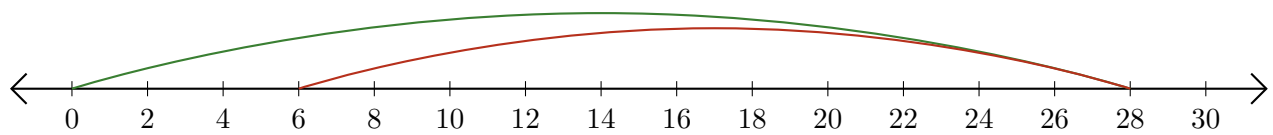
Sumar y Restar en Rectas Numéricas (D) Respuestas

Use las rectas numéricas para calcular cada suma o diferencia.

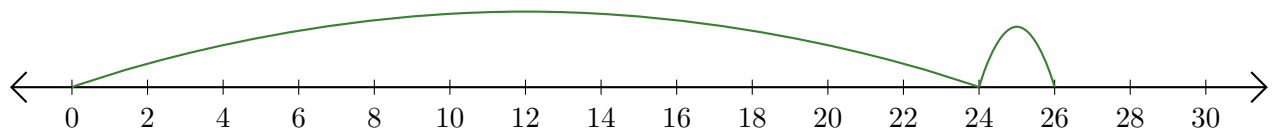
1. $18 + 8 = \underline{26}$



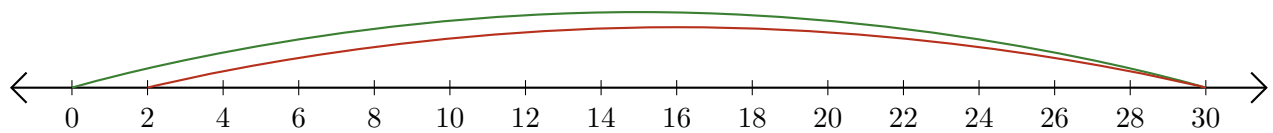
2. $28 - 22 = \underline{6}$



3. $24 + 2 = \underline{26}$



4. $30 - 28 = \underline{2}$



5. $4 + 6 = \underline{10}$

