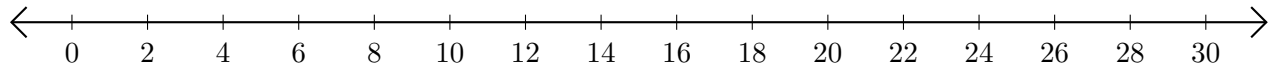


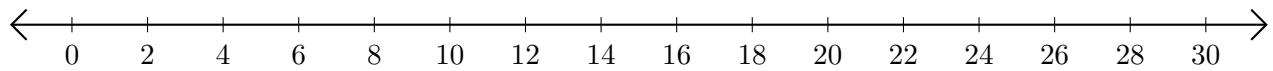
# Sumar y Restar en Rectas Numéricas (E)

Use las rectas numéricas para calcular cada suma o diferencia.

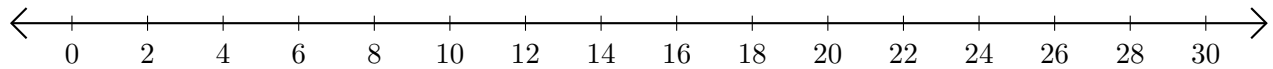
1.  $20 + 2 = \underline{\quad}$



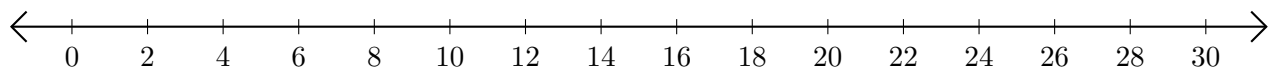
2.  $26 - 16 = \underline{\quad}$



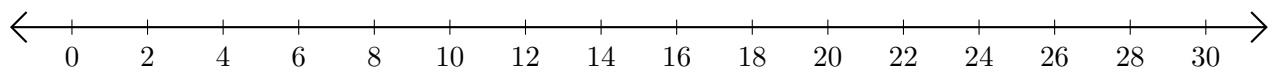
3.  $2 + 4 = \underline{\quad}$



4.  $18 - 10 = \underline{\quad}$



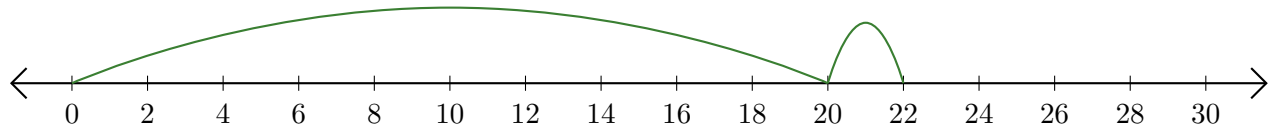
5.  $18 + 10 = \underline{\quad}$



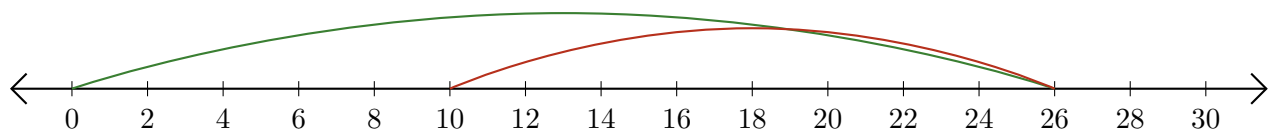
# Sumar y Restar en Rectas Numéricas (E) Respuestas

Use las rectas numéricas para calcular cada suma o diferencia.


1.  $20 + 2 = \underline{22}$



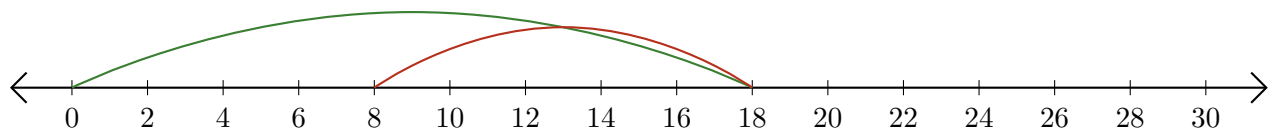
2.  $26 - 16 = \underline{10}$



3.  $2 + 4 = \underline{6}$



4.  $18 - 10 = \underline{8}$



5.  $18 + 10 = \underline{28}$

