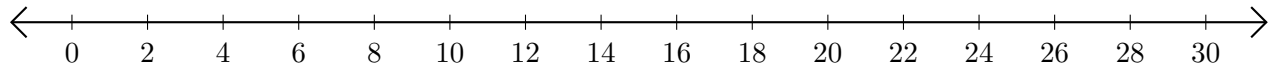


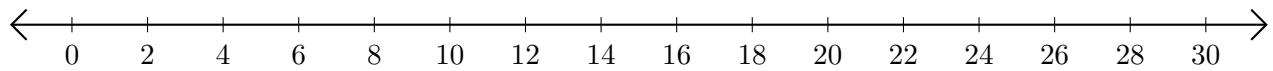
# Sumar y Restar en Rectas Numéricas (G)

Use las rectas numéricas para calcular cada suma o diferencia.

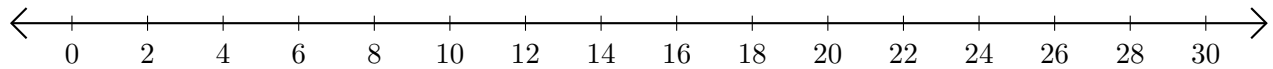
1.  $10 + 12 = \underline{\quad}$



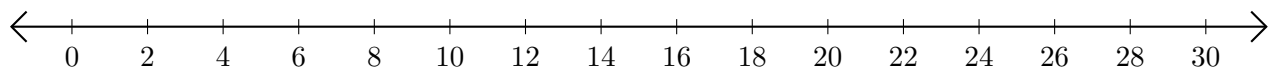
2.  $24 - 22 = \underline{\quad}$



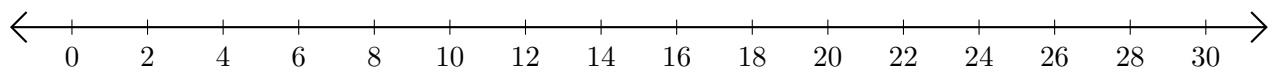
3.  $28 + 2 = \underline{\quad}$



4.  $20 - 18 = \underline{\quad}$



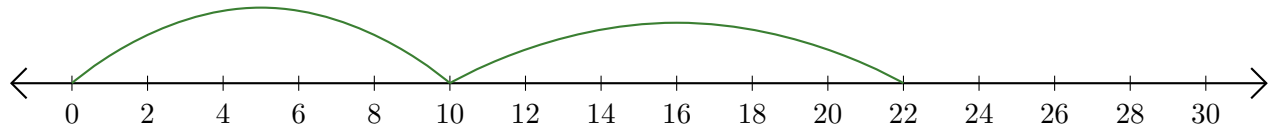
5.  $22 - 8 = \underline{\quad}$



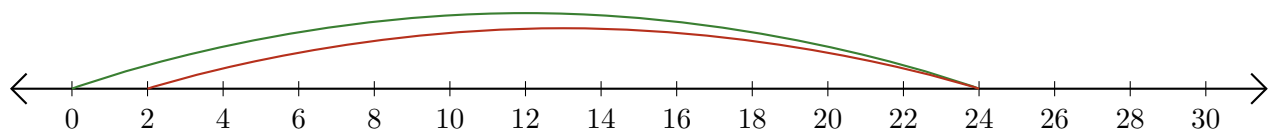
# Sumar y Restar en Rectas Numéricas (G) Respuestas

Use las rectas numéricas para calcular cada suma o diferencia.

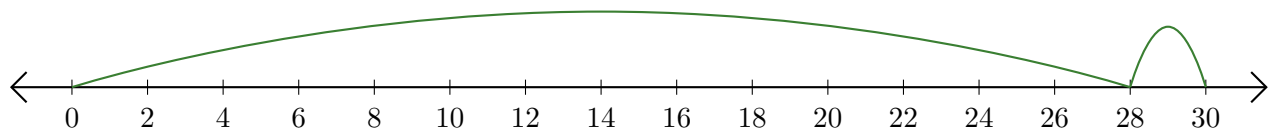
1.  $10 + 12 = \underline{22}$



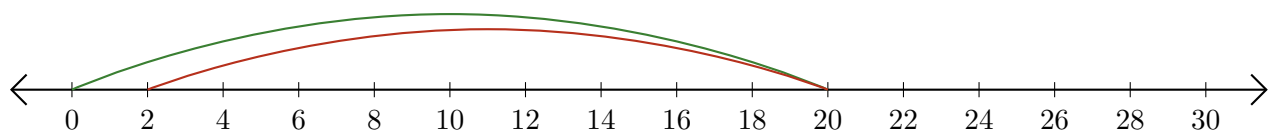
2.  $24 - 22 = \underline{2}$



3.  $28 + 2 = \underline{30}$



4.  $20 - 18 = \underline{2}$



5.  $22 - 8 = \underline{14}$

