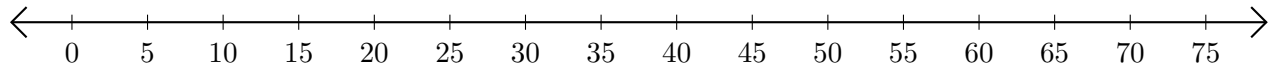


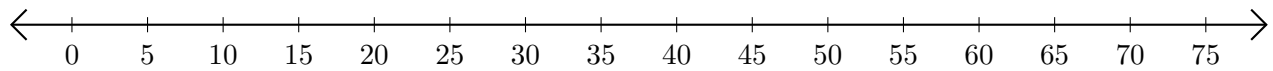
# Sumar y Restar en Rectas Numéricas (G)

Use las rectas numéricas para calcular cada suma o diferencia.

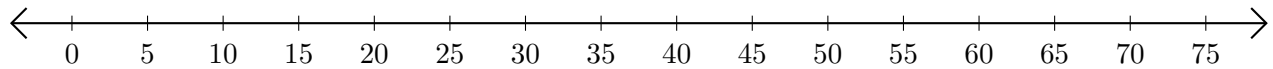
1.  $65 + 10 = \underline{\quad}$



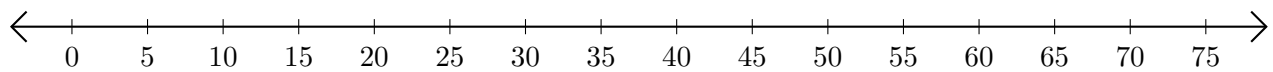
2.  $60 - 10 = \underline{\quad}$



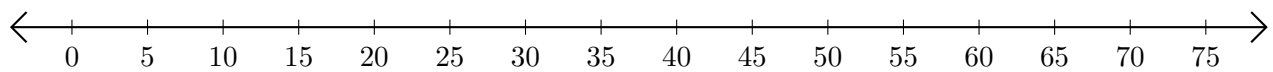
3.  $25 + 50 = \underline{\quad}$



4.  $75 - 5 = \underline{\quad}$



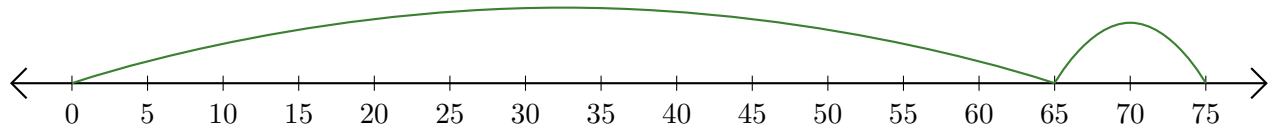
5.  $70 + 5 = \underline{\quad}$



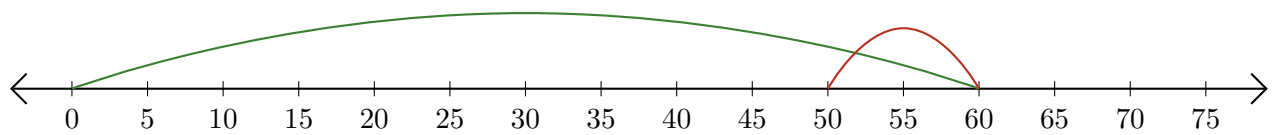
# Sumar y Restar en Rectas Numéricas (G) Respuestas

Use las rectas numéricas para calcular cada suma o diferencia.

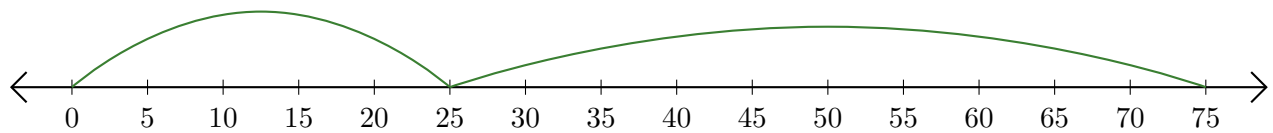
1.  $65 + 10 = \underline{75}$



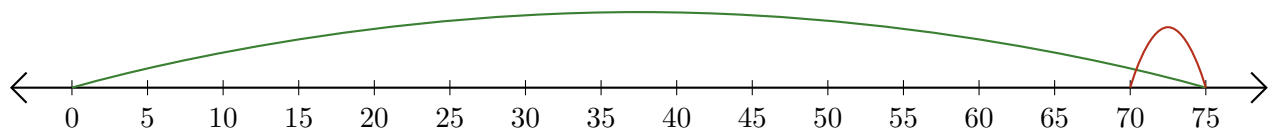
2.  $60 - 10 = \underline{50}$



3.  $25 + 50 = \underline{75}$



4.  $75 - 5 = \underline{70}$



5.  $70 + 5 = \underline{75}$

