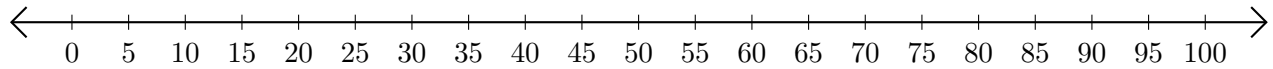


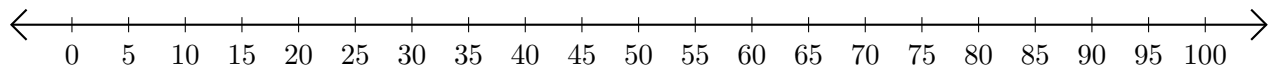
Sumar y Restar en Rectas Numéricas (A)

Use las rectas numéricas para calcular cada suma o diferencia.

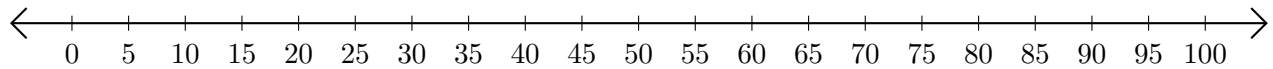
1. $75 + 10 = \underline{\quad}$



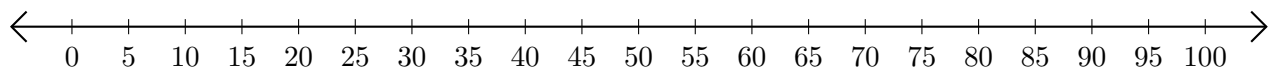
2. $45 - 25 = \underline{\quad}$



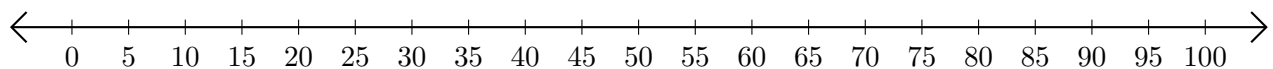
3. $45 + 40 = \underline{\quad}$



4. $70 - 65 = \underline{\quad}$



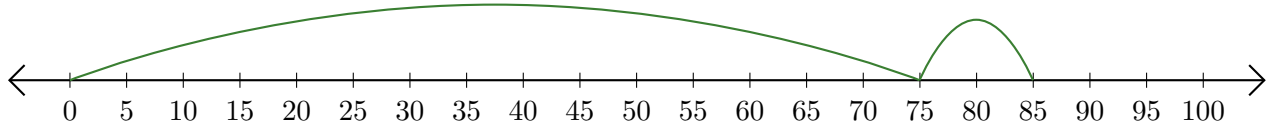
5. $85 + 15 = \underline{\quad}$



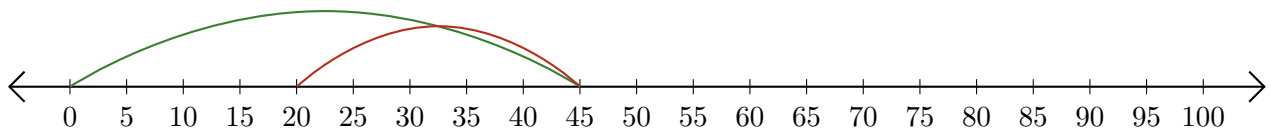
Sumar y Restar en Rectas Numéricas (A) Respuestas

Use las rectas numéricas para calcular cada suma o diferencia.

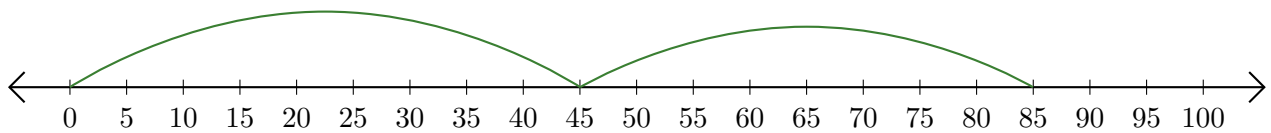
1. $75 + 10 = \underline{85}$



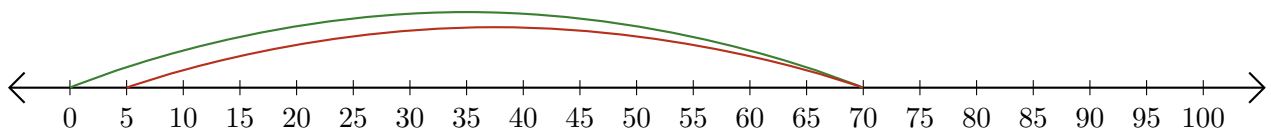
2. $45 - 25 = \underline{20}$



3. $45 + 40 = \underline{85}$



4. $70 - 65 = \underline{5}$



5. $85 + 15 = \underline{100}$

