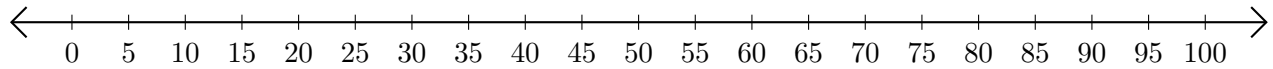


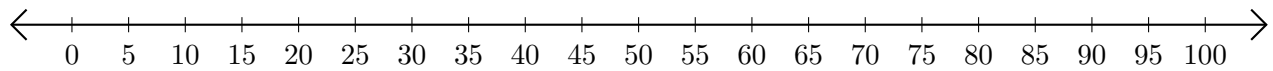
# Sumar y Restar en Rectas Numéricas (E)

Use las rectas numéricas para calcular cada suma o diferencia.

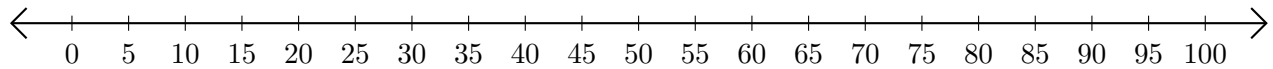
1.  $60 + 30 = \underline{\quad}$



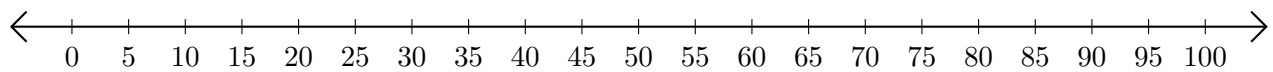
2.  $90 - 65 = \underline{\quad}$



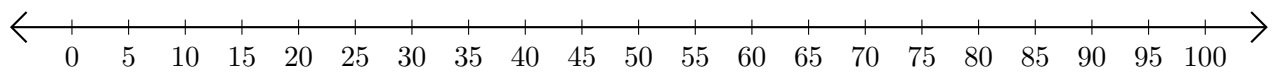
3.  $15 + 45 = \underline{\quad}$



4.  $75 - 45 = \underline{\quad}$



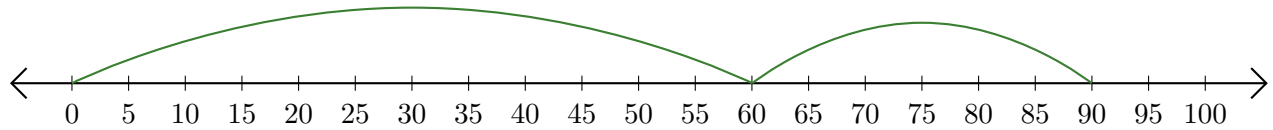
5.  $20 + 40 = \underline{\quad}$



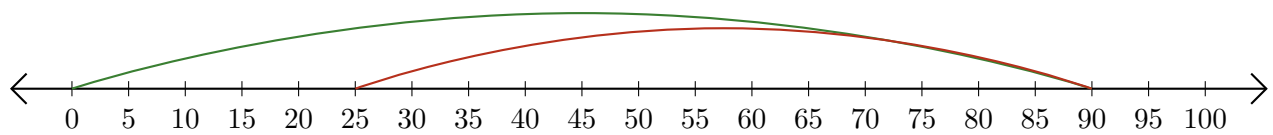
# Sumar y Restar en Rectas Numéricas (E) Respuestas

Use las rectas numéricas para calcular cada suma o diferencia.

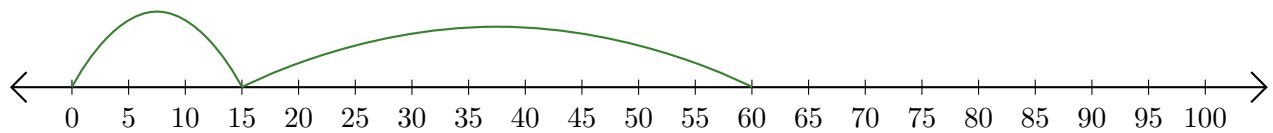
1.  $60 + 30 = \underline{90}$



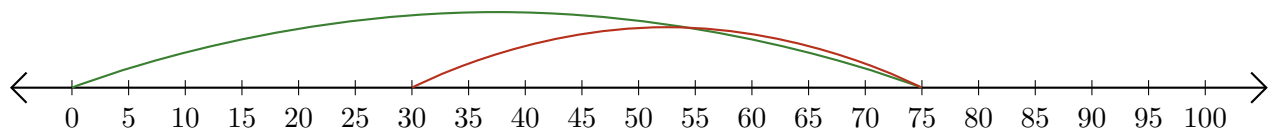
2.  $90 - 65 = \underline{25}$



3.  $15 + 45 = \underline{60}$



4.  $75 - 45 = \underline{30}$



5.  $20 + 40 = \underline{60}$

