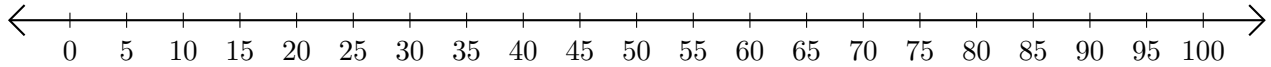


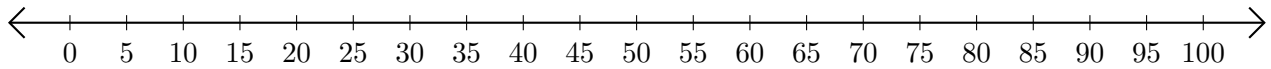
Sumar y Restar en Rectas Numéricas (I)

Use las rectas numéricas para calcular cada suma o diferencia.

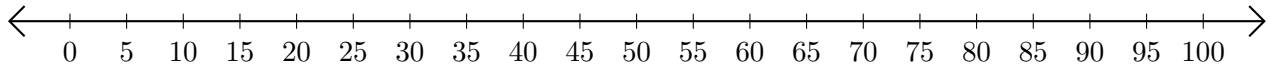
1. $15 + 15 = \underline{\quad}$



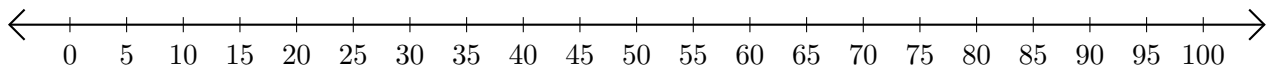
2. $90 - 50 = \underline{\quad}$



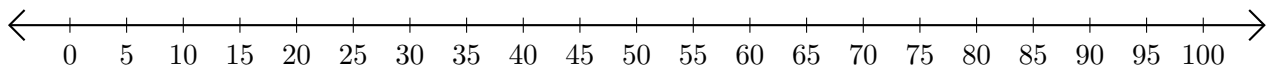
3. $40 + 55 = \underline{\quad}$



4. $60 - 5 = \underline{\quad}$



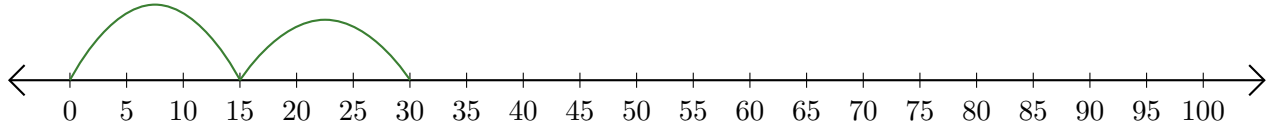
5. $95 - 80 = \underline{\quad}$



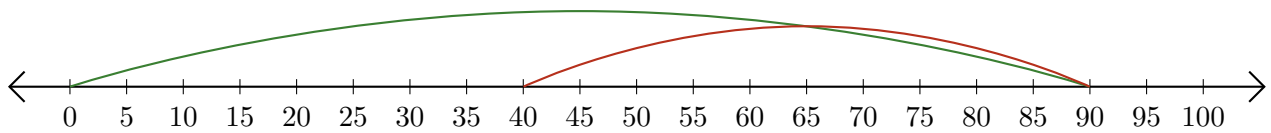
Sumar y Restar en Rectas Numéricas (I) Respuestas

Use las rectas numéricas para calcular cada suma o diferencia.

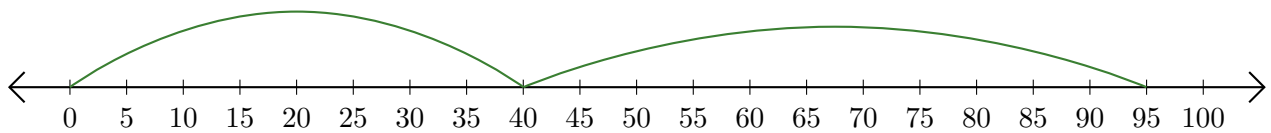
1. $15 + 15 = \underline{30}$



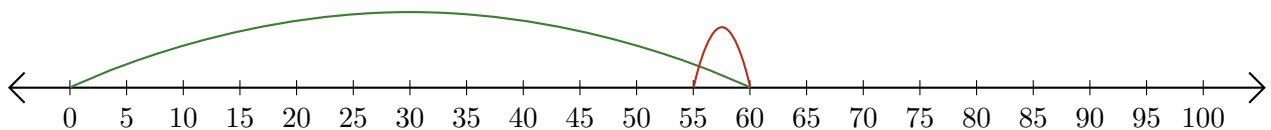
2. $90 - 50 = \underline{40}$



3. $40 + 55 = \underline{95}$



4. $60 - 5 = \underline{55}$



5. $95 - 80 = \underline{15}$

