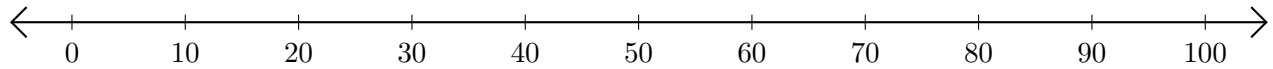


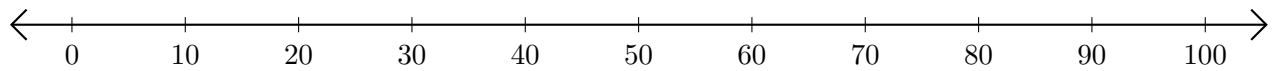
# Sumar y Restar en Rectas Numéricas (A)

Use las rectas numéricas para calcular cada suma o diferencia.

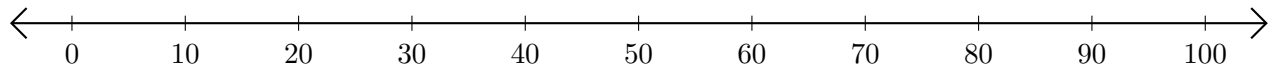
1.  $20 + 10 = \underline{\quad}$



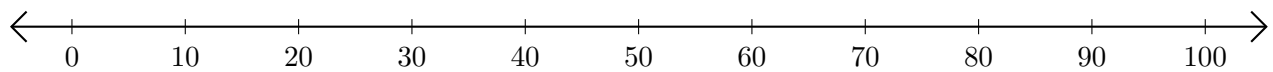
2.  $90 - 50 = \underline{\quad}$



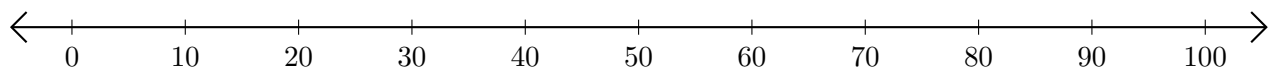
3.  $60 + 10 = \underline{\quad}$



4.  $80 - 10 = \underline{\quad}$



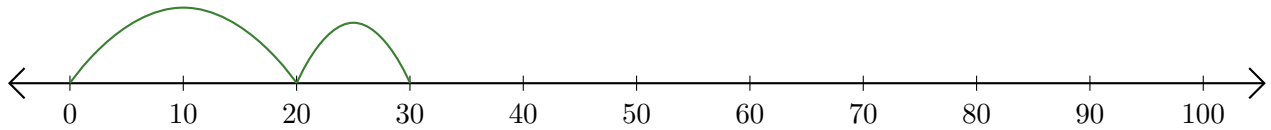
5.  $90 + 10 = \underline{\quad}$



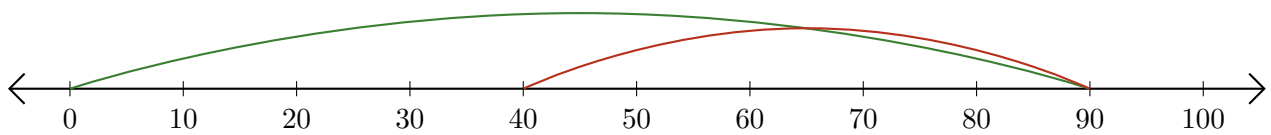
# Sumar y Restar en Rectas Numéricas (A) Respuestas

Use las rectas numéricas para calcular cada suma o diferencia.

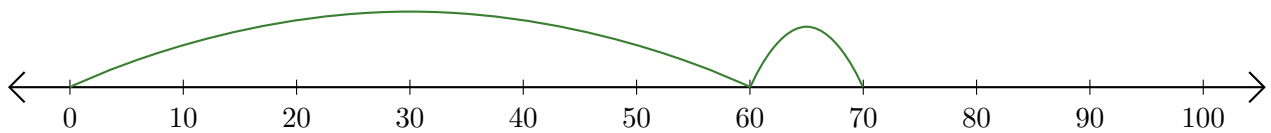
1.  $20 + 10 = \underline{30}$



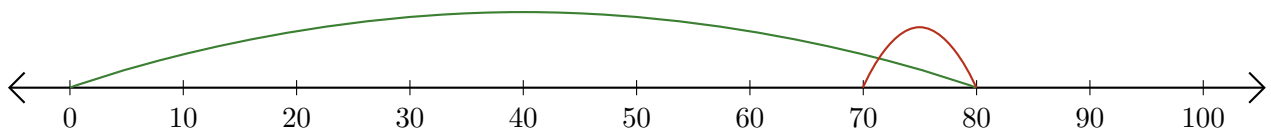
2.  $90 - 50 = \underline{40}$



3.  $60 + 10 = \underline{70}$



4.  $80 - 10 = \underline{70}$



5.  $90 + 10 = \underline{100}$

