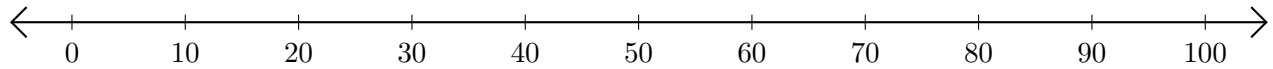


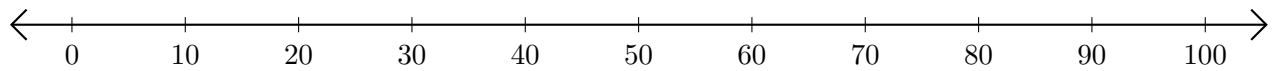
# Sumar y Restar en Rectas Numéricas (D)

Use las rectas numéricas para calcular cada suma o diferencia.

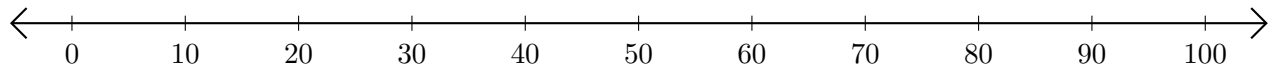
1.  $80 + 20 = \underline{\quad}$



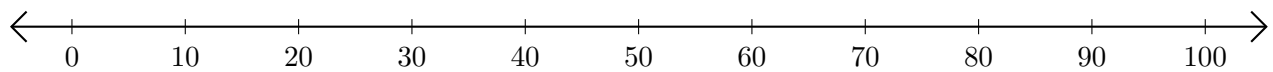
2.  $100 - 40 = \underline{\quad}$



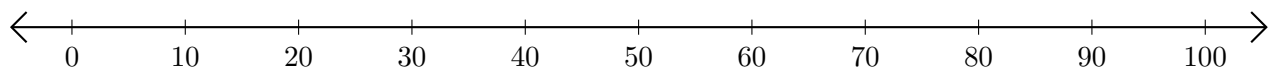
3.  $10 + 20 = \underline{\quad}$



4.  $60 - 20 = \underline{\quad}$



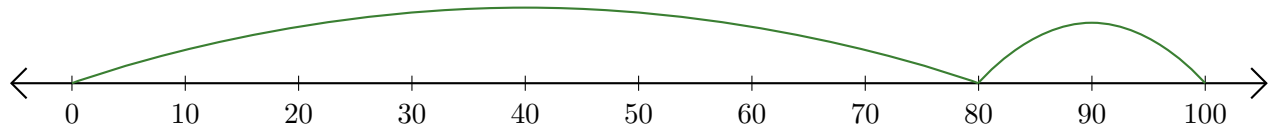
5.  $100 - 50 = \underline{\quad}$



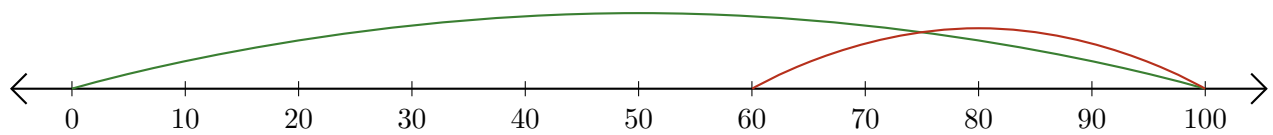
# Sumar y Restar en Rectas Numéricas (D) Respuestas

Use las rectas numéricas para calcular cada suma o diferencia.

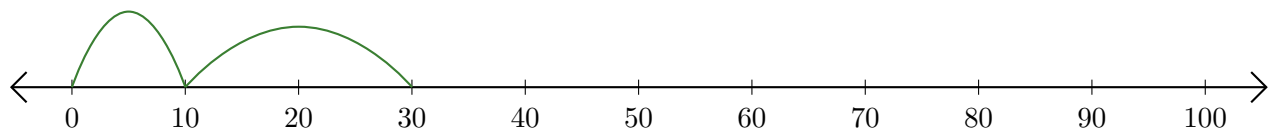
1.  $80 + 20 = \underline{100}$



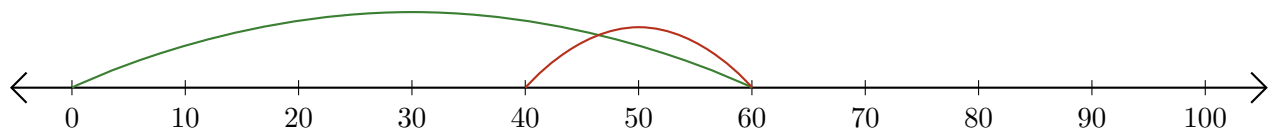
2.  $100 - 40 = \underline{60}$



3.  $10 + 20 = \underline{30}$



4.  $60 - 20 = \underline{40}$



5.  $100 - 50 = \underline{50}$

