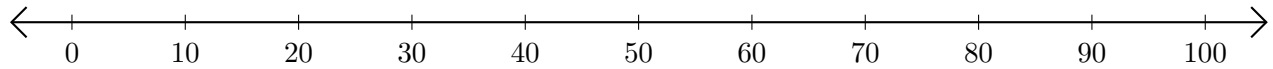


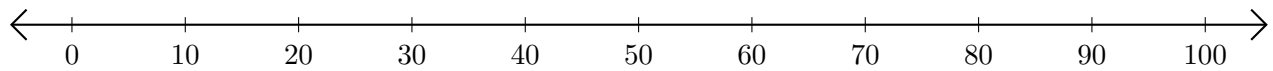
# Sumar y Restar en Rectas Numéricas (I)

Use las rectas numéricas para calcular cada suma o diferencia.

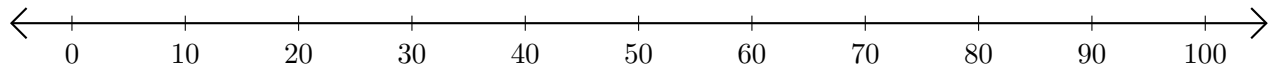
1.  $50 + 50 = \underline{\quad}$



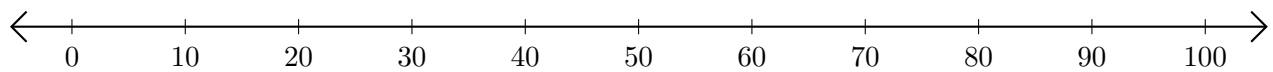
2.  $100 - 10 = \underline{\quad}$



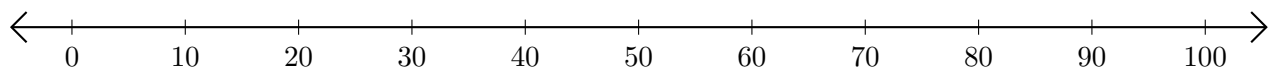
3.  $20 + 50 = \underline{\quad}$



4.  $80 - 40 = \underline{\quad}$



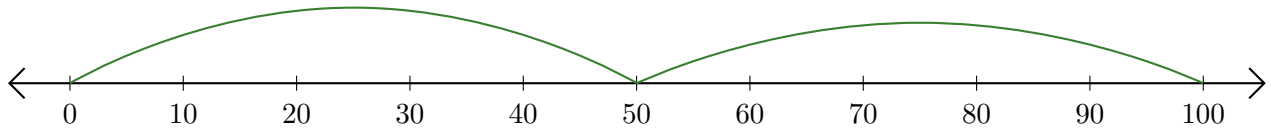
5.  $50 - 30 = \underline{\quad}$



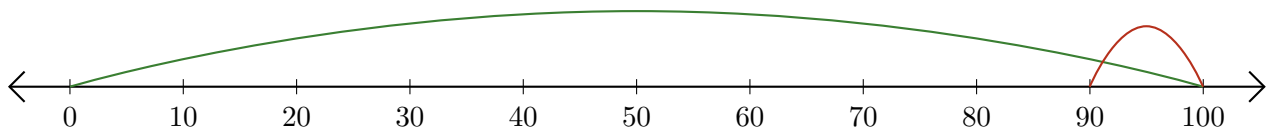
# Sumar y Restar en Rectas Numéricas (I) Respuestas

Use las rectas numéricas para calcular cada suma o diferencia.

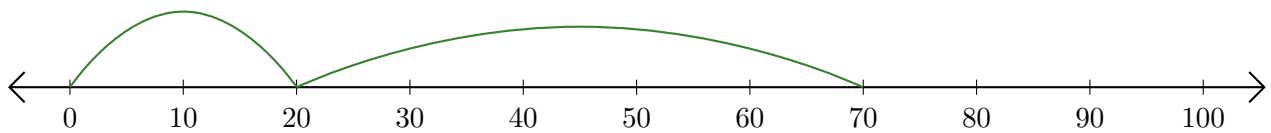
1.  $50 + 50 = \underline{100}$



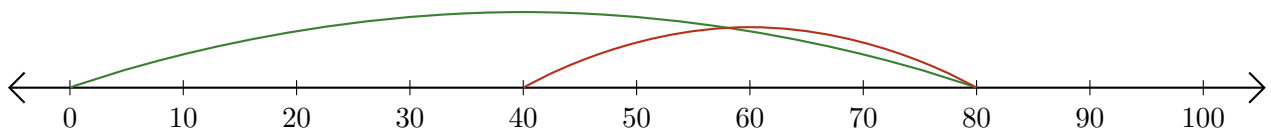
2.  $100 - 10 = \underline{90}$



3.  $20 + 50 = \underline{70}$



4.  $80 - 40 = \underline{40}$



5.  $50 - 30 = \underline{20}$

