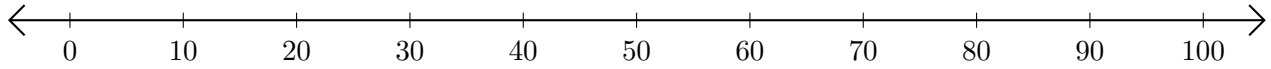


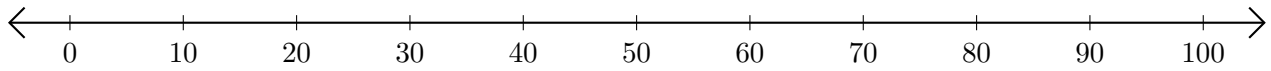
# Sumar y Restar en Rectas Numéricas (J)

Use las rectas numéricas para calcular cada suma o diferencia.

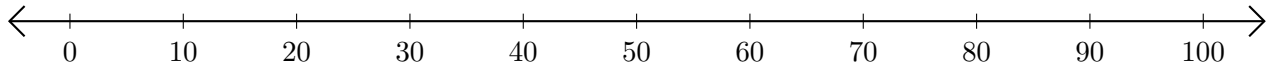
1.  $60 + 20 = \underline{\quad}$



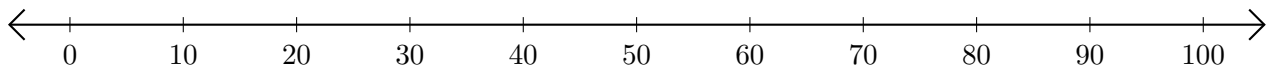
2.  $70 - 30 = \underline{\quad}$



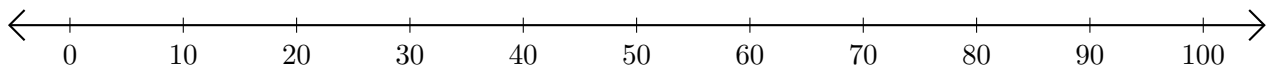
3.  $40 + 40 = \underline{\quad}$



4.  $50 - 20 = \underline{\quad}$



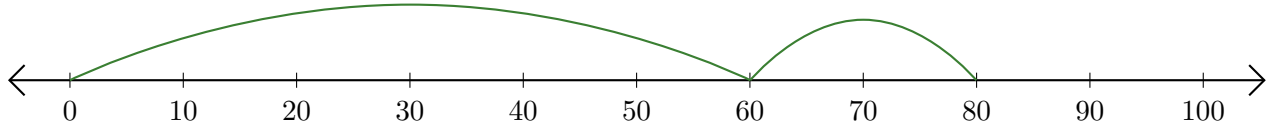
5.  $100 - 90 = \underline{\quad}$



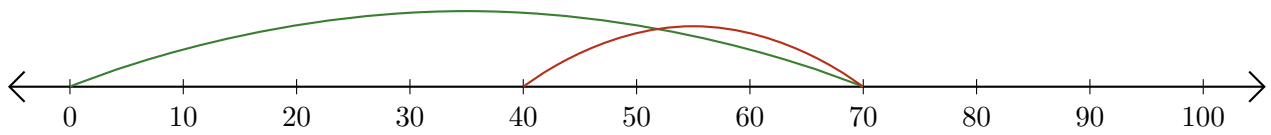
# Sumar y Restar en Rectas Numéricas (J) Respuestas

Use las rectas numéricas para calcular cada suma o diferencia.

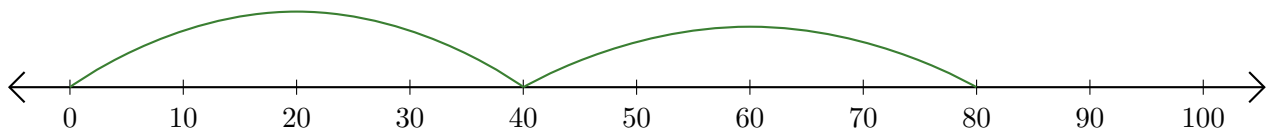
1.  $60 + 20 = \underline{80}$



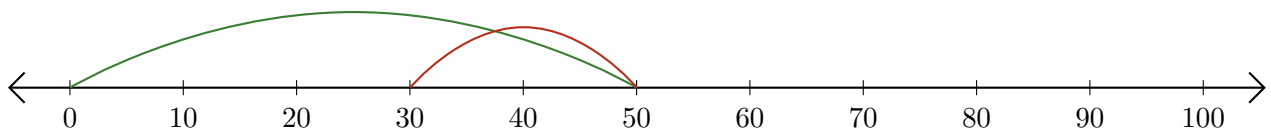
2.  $70 - 30 = \underline{40}$



3.  $40 + 40 = \underline{80}$



4.  $50 - 20 = \underline{30}$



5.  $100 - 90 = \underline{10}$

