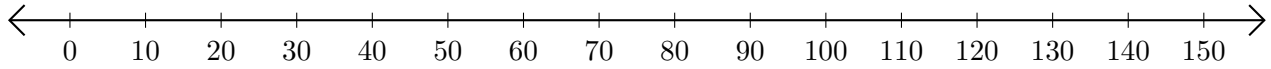


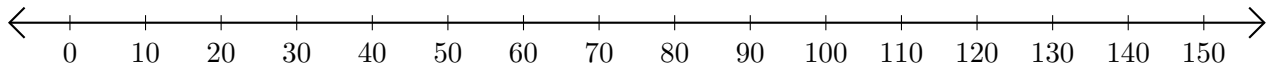
Sumar y Restar en Rectas Numéricas (C)

Use las rectas numéricas para calcular cada suma o diferencia.

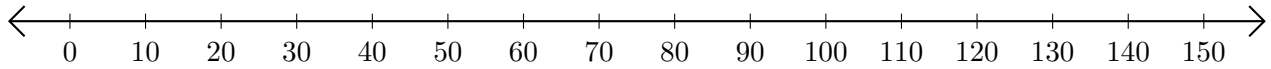
1. $10 + 90 = \underline{\quad}$



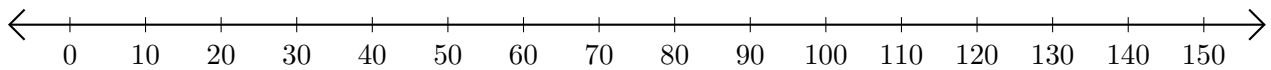
2. $100 - 90 = \underline{\quad}$



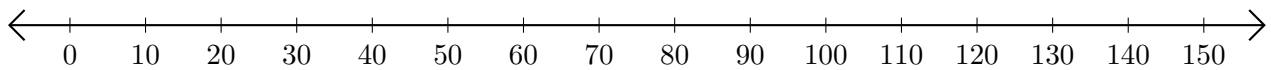
3. $120 + 30 = \underline{\quad}$



4. $150 - 140 = \underline{\quad}$



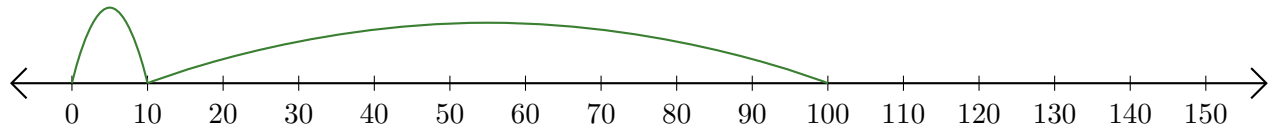
5. $100 + 50 = \underline{\quad}$



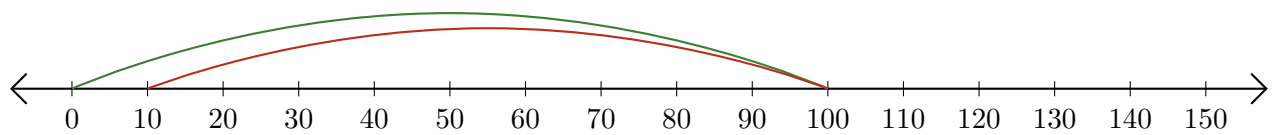
Sumar y Restar en Rectas Numéricas (C) Respuestas

Use las rectas numéricas para calcular cada suma o diferencia.

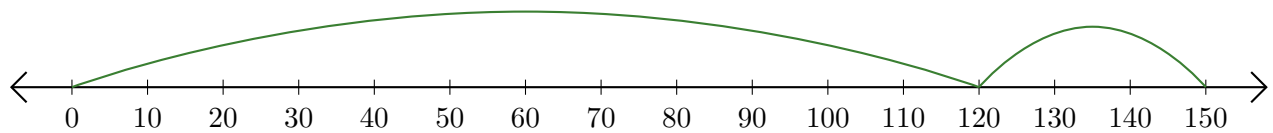
1. $10 + 90 = \underline{100}$



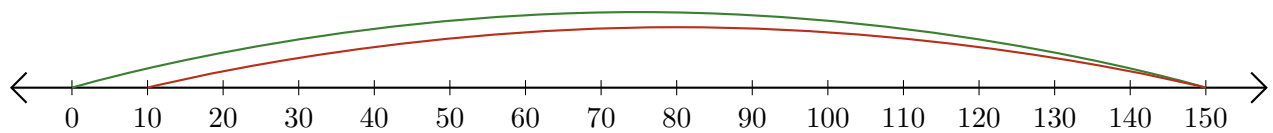
2. $100 - 90 = \underline{10}$



3. $120 + 30 = \underline{150}$



4. $150 - 140 = \underline{10}$



5. $100 + 50 = \underline{150}$

