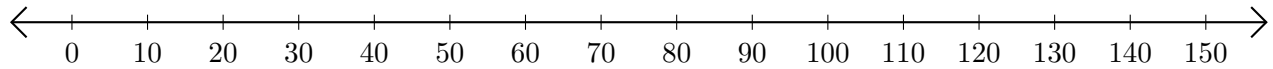


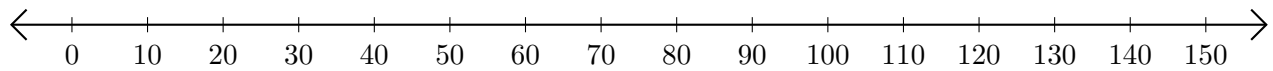
Sumar y Restar en Rectas Numéricas (E)

Use las rectas numéricas para calcular cada suma o diferencia.

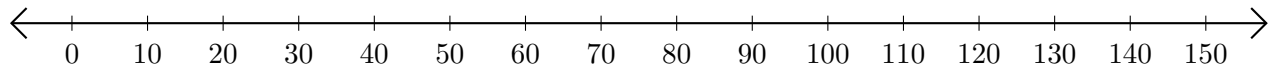
1. $10 + 100 = \underline{\quad}$



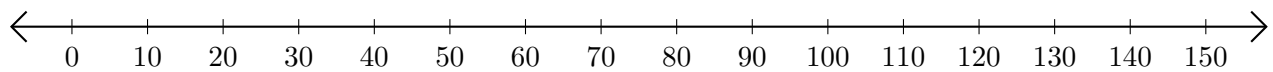
2. $130 - 50 = \underline{\quad}$



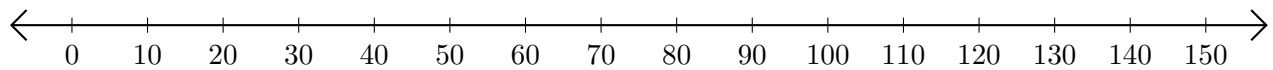
3. $140 + 10 = \underline{\quad}$



4. $100 - 90 = \underline{\quad}$



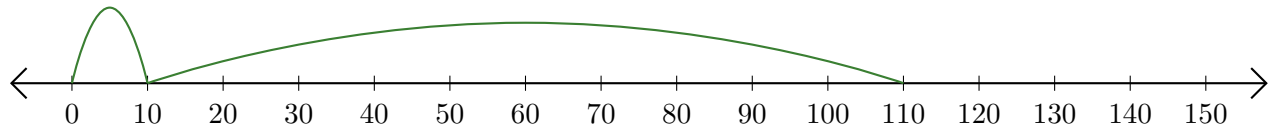
5. $100 + 30 = \underline{\quad}$



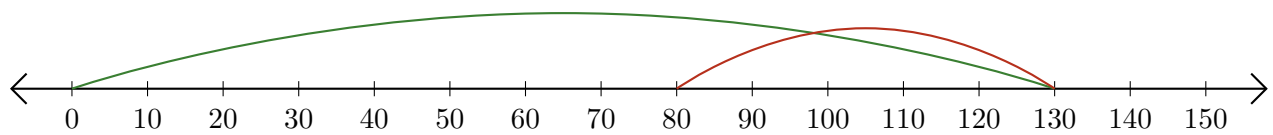
Sumar y Restar en Rectas Numéricas (E) Respuestas

Use las rectas numéricas para calcular cada suma o diferencia.

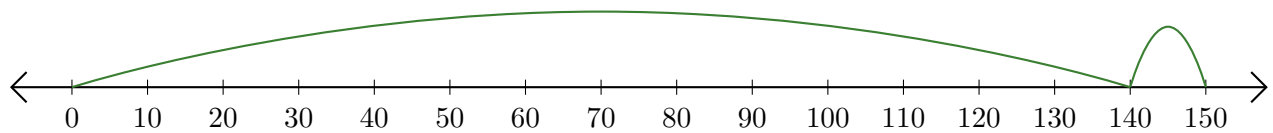
1. $10 + 100 = \underline{110}$



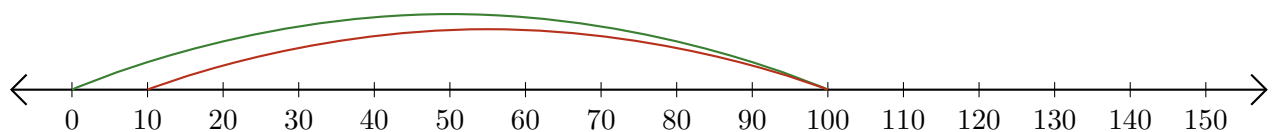
2. $130 - 50 = \underline{80}$



3. $140 + 10 = \underline{150}$



4. $100 - 90 = \underline{10}$



5. $100 + 30 = \underline{130}$

