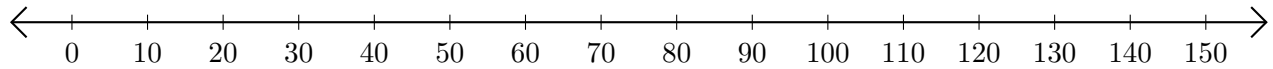


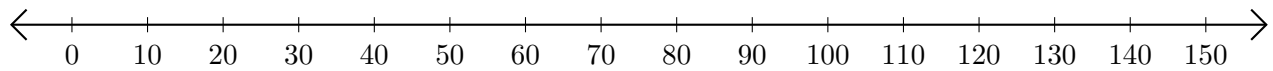
# Sumar y Restar en Rectas Numéricas (G)

Use las rectas numéricas para calcular cada suma o diferencia.

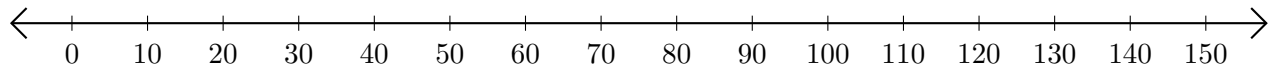
1.  $20 + 130 = \underline{\quad}$



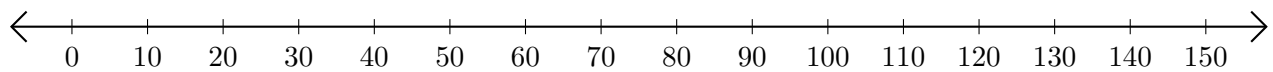
2.  $80 - 70 = \underline{\quad}$



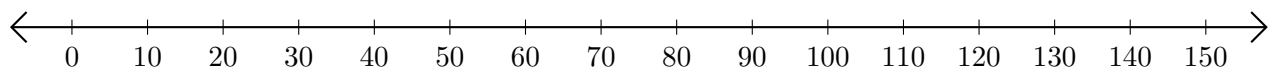
3.  $130 + 20 = \underline{\quad}$



4.  $110 - 10 = \underline{\quad}$



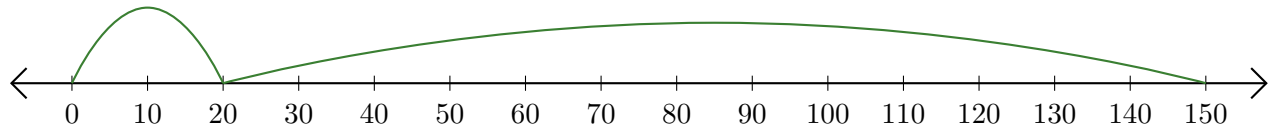
5.  $150 - 80 = \underline{\quad}$



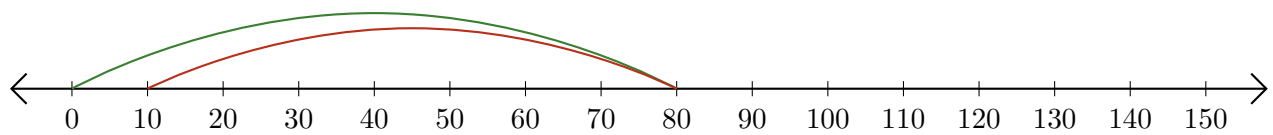
# Sumar y Restar en Rectas Numéricas (G) Respuestas

Use las rectas numéricas para calcular cada suma o diferencia.

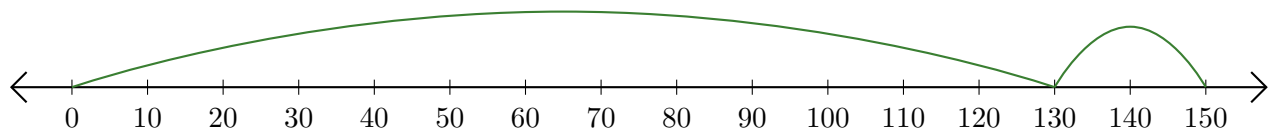
1.  $20 + 130 = \underline{150}$



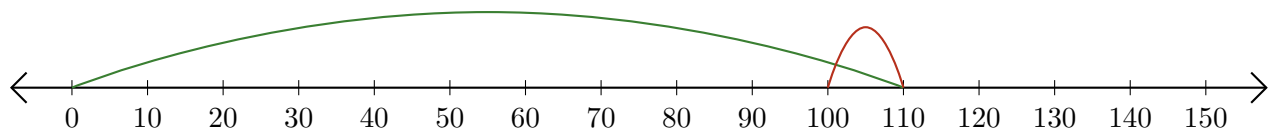
2.  $80 - 70 = \underline{10}$



3.  $130 + 20 = \underline{150}$



4.  $110 - 10 = \underline{100}$



5.  $150 - 80 = \underline{70}$

