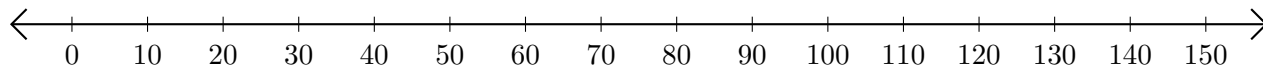


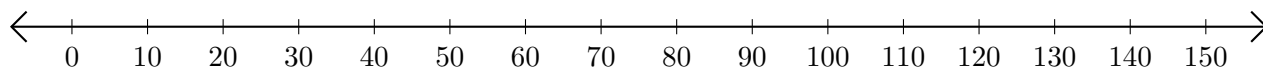
# Sumar y Restar en Rectas Numéricas (I)

Use las rectas numéricas para calcular cada suma o diferencia.

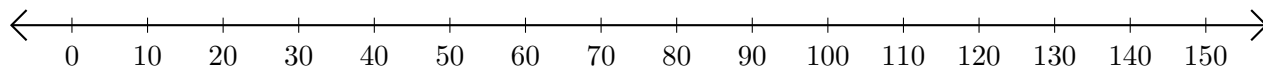
1.  $10 + 20 = \underline{\quad}$



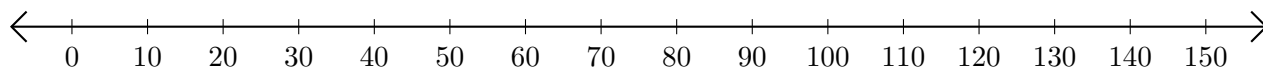
2.  $130 - 100 = \underline{\quad}$



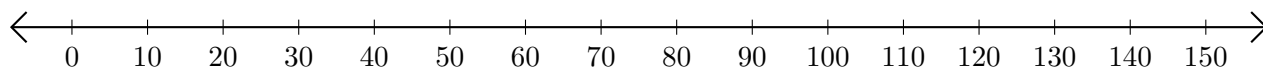
3.  $30 + 20 = \underline{\quad}$



4.  $30 - 20 = \underline{\quad}$



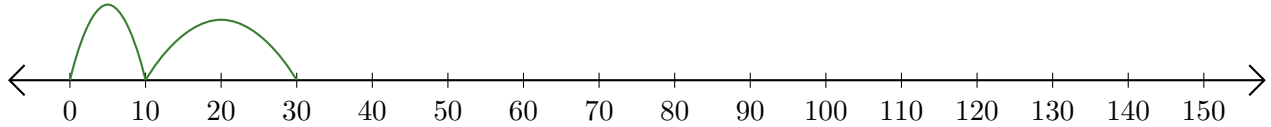
5.  $90 + 10 = \underline{\quad}$



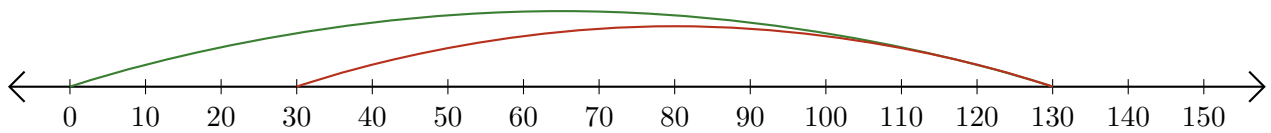
# Sumar y Restar en Rectas Numéricas (I) Respuestas

Use las rectas numéricas para calcular cada suma o diferencia.

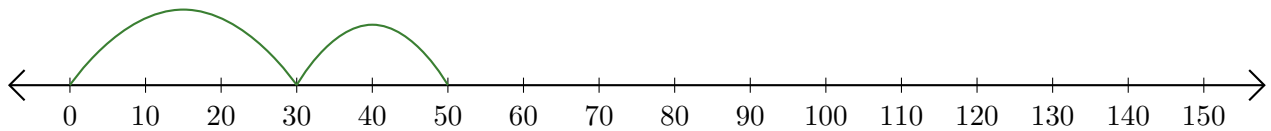
1.  $10 + 20 = \underline{30}$



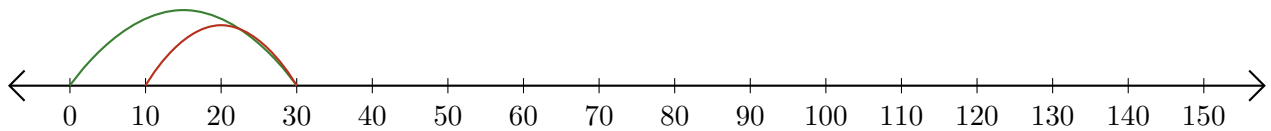
2.  $130 - 100 = \underline{30}$



3.  $30 + 20 = \underline{50}$



4.  $30 - 20 = \underline{10}$



5.  $90 + 10 = \underline{100}$

