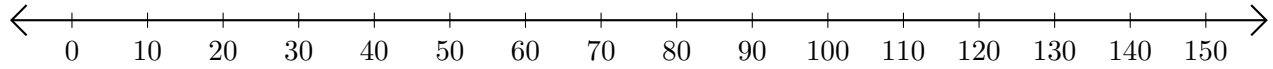


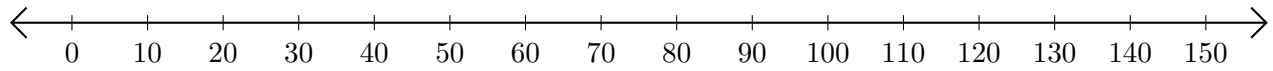
Sumar y Restar en Rectas Numéricas (J)

Use las rectas numéricas para calcular cada suma o diferencia.

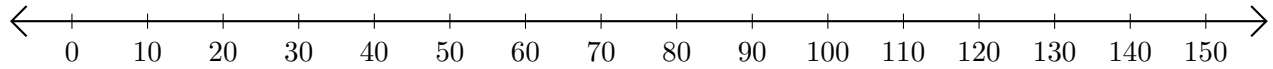
1. $70 + 80 = \underline{\hspace{2cm}}$



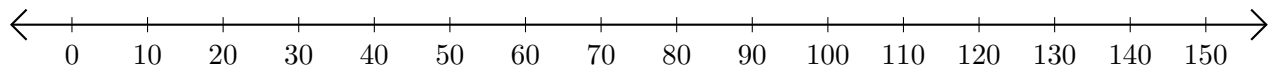
2. $120 - 60 = \underline{\hspace{2cm}}$



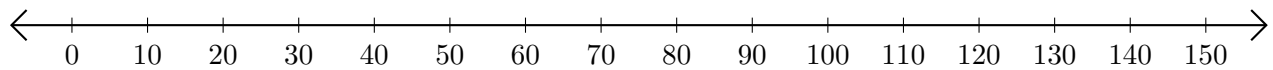
3. $40 + 60 = \underline{\hspace{2cm}}$



4. $90 - 30 = \underline{\hspace{2cm}}$



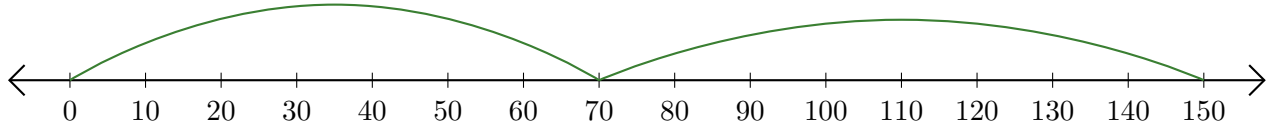
5. $120 + 30 = \underline{\hspace{2cm}}$



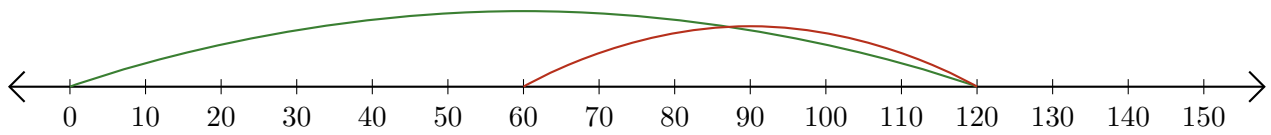
Sumar y Restar en Rectas Numéricas (J) Respuestas

Use las rectas numéricas para calcular cada suma o diferencia.

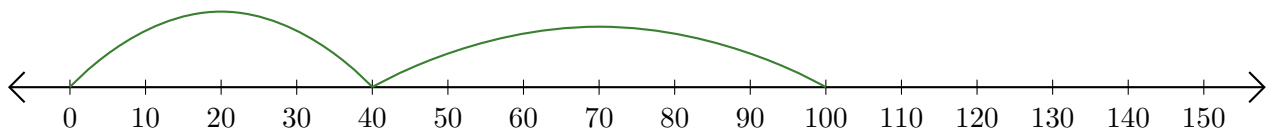
1. $70 + 80 = \underline{150}$



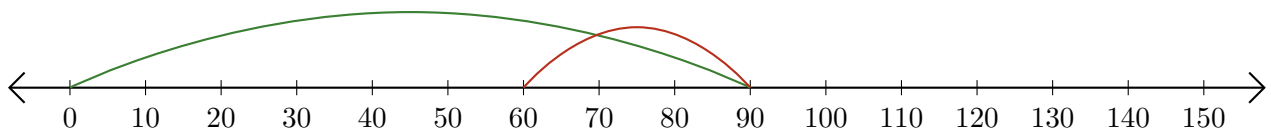
2. $120 - 60 = \underline{60}$



3. $40 + 60 = \underline{100}$



4. $90 - 30 = \underline{60}$



5. $120 + 30 = \underline{150}$

