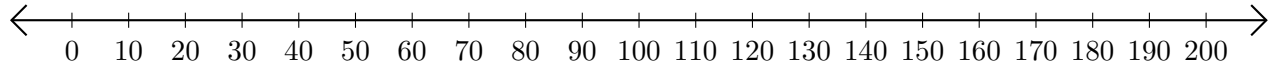


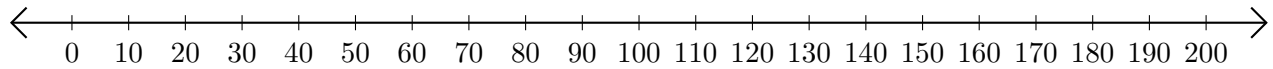
## Sumar y Restar en Rectas Numéricas (B)

Use las rectas numéricas para calcular cada suma o diferencia.

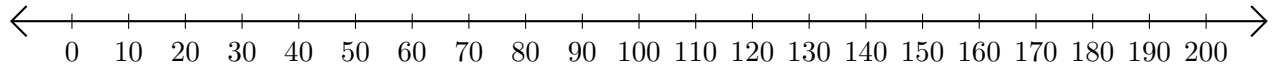
1.  $180 + 20 = \underline{\hspace{2cm}}$



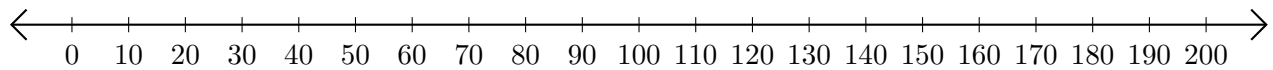
2.  $200 - 190 = \underline{\hspace{2cm}}$



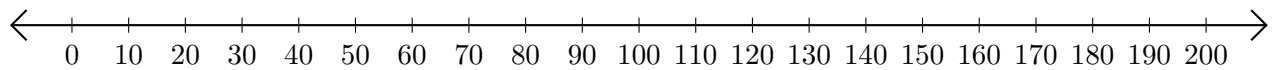
3.  $30 + 40 = \underline{\hspace{2cm}}$



4.  $120 - 90 = \underline{\hspace{2cm}}$



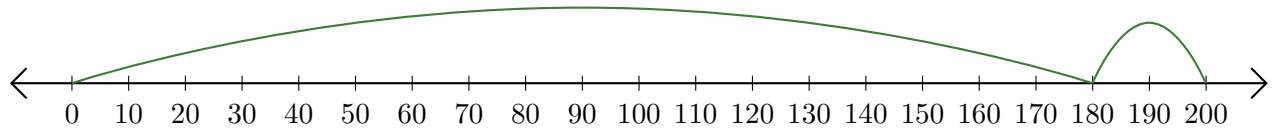
5.  $20 + 70 = \underline{\hspace{2cm}}$



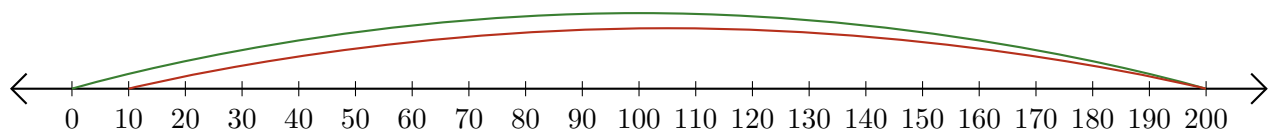
# Sumar y Restar en Rectas Numéricas (B) Respuestas

Use las rectas numéricas para calcular cada suma o diferencia.


1.  $180 + 20 = \underline{200}$



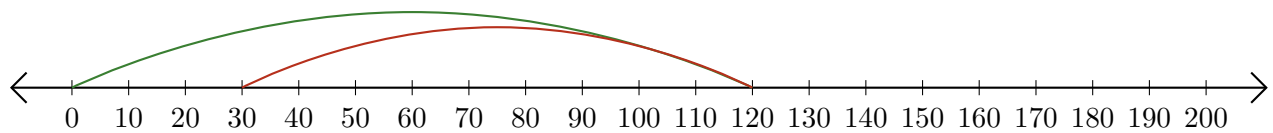
2.  $200 - 190 = \underline{10}$



3.  $30 + 40 = \underline{70}$



4.  $120 - 90 = \underline{30}$



5.  $20 + 70 = \underline{90}$

