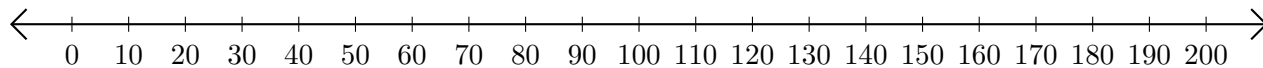


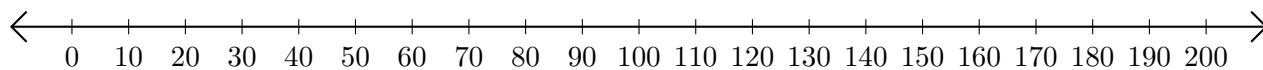
Sumar y Restar en Rectas Numéricas (C)

Use las rectas numéricas para calcular cada suma o diferencia.

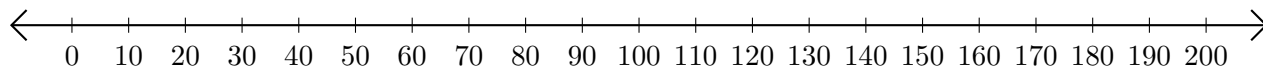
1. $10 + 20 = \underline{\quad}$



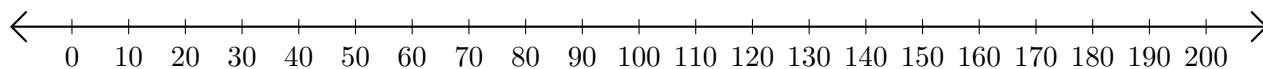
2. $190 - 170 = \underline{\quad}$



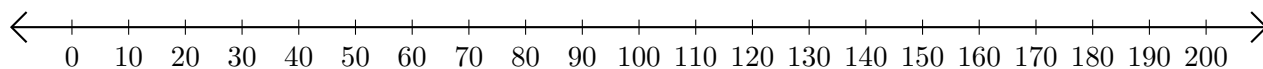
3. $100 + 60 = \underline{\quad}$



4. $160 - 110 = \underline{\quad}$




5. $130 - 90 = \underline{\quad}$



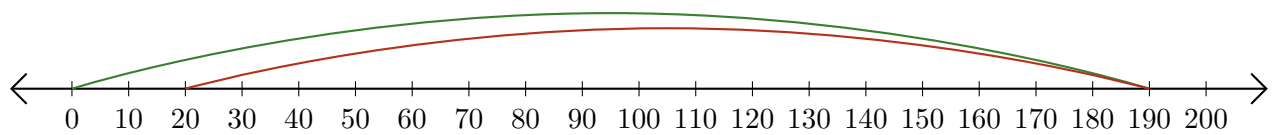
Sumar y Restar en Rectas Numéricas (C) Respuestas

Use las rectas numéricas para calcular cada suma o diferencia.

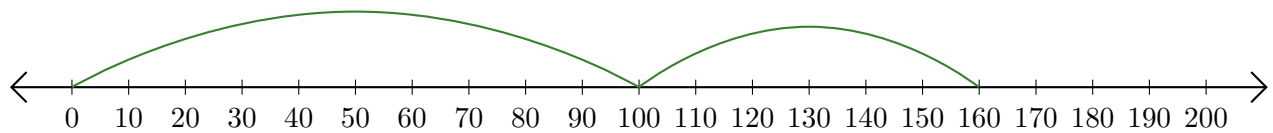
1. $10 + 20 = \underline{30}$



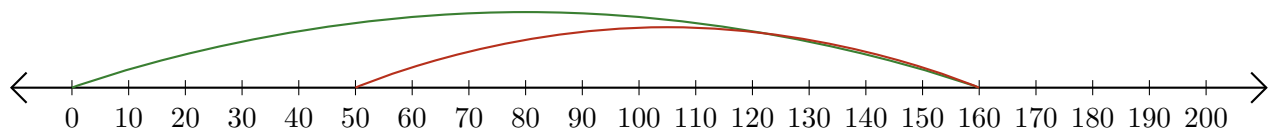
2. $190 - 170 = \underline{20}$



3. $100 + 60 = \underline{160}$



4. $160 - 110 = \underline{50}$



5. $130 - 90 = \underline{40}$

