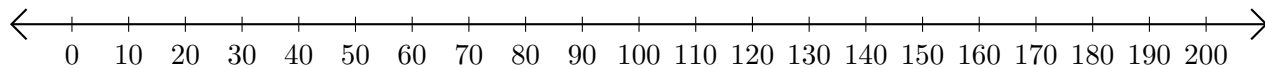


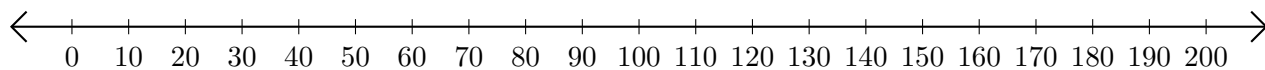
Sumar y Restar en Rectas Numéricas (D)

Use las rectas numéricas para calcular cada suma o diferencia.

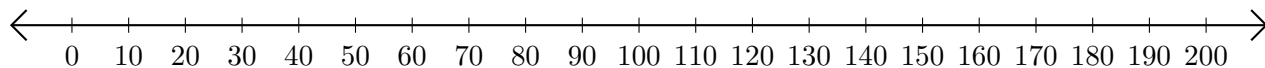
1. $50 + 100 = \underline{\hspace{2cm}}$



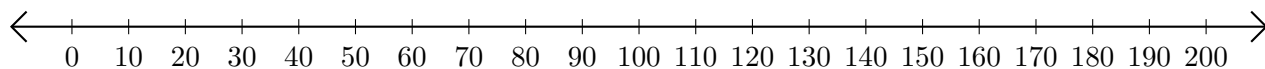
2. $190 - 90 = \underline{\hspace{2cm}}$



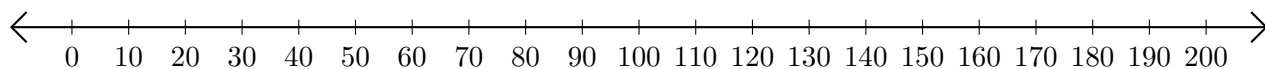
3. $20 + 180 = \underline{\hspace{2cm}}$



4. $170 - 150 = \underline{\hspace{2cm}}$



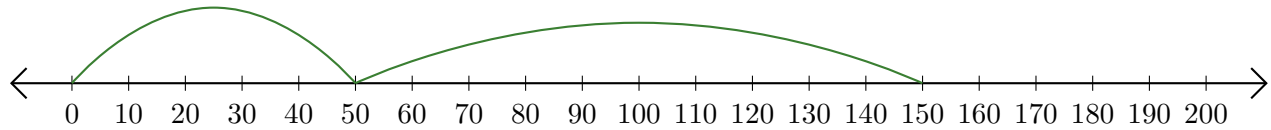
5. $10 + 90 = \underline{\hspace{2cm}}$



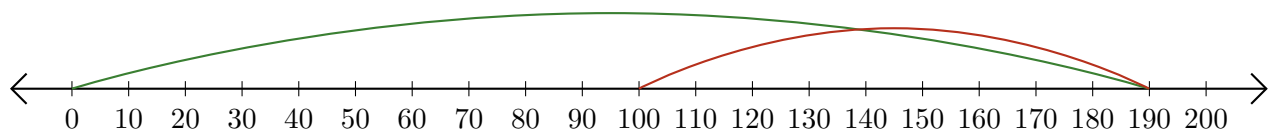
Sumar y Restar en Rectas Numéricas (D) Respuestas

Use las rectas numéricas para calcular cada suma o diferencia.

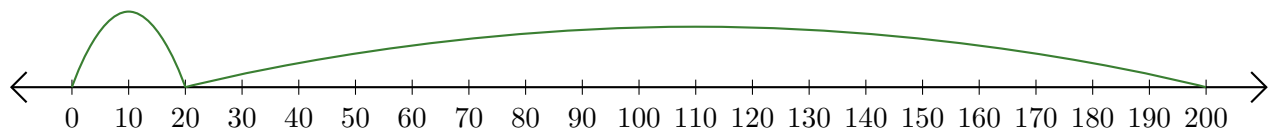
1. $50 + 100 = \underline{150}$



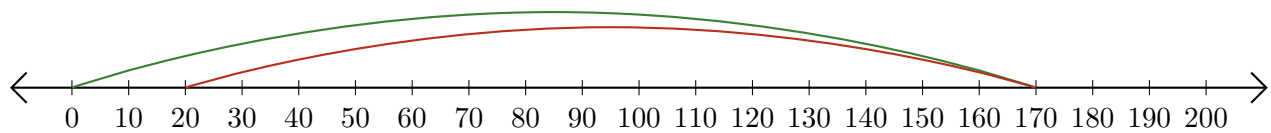
2. $190 - 90 = \underline{100}$



3. $20 + 180 = \underline{200}$



4. $170 - 150 = \underline{20}$



5. $10 + 90 = \underline{100}$

