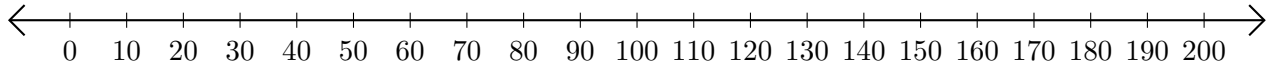


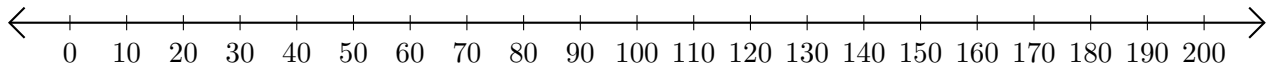
Sumar y Restar en Rectas Numéricas (F)

Use las rectas numéricas para calcular cada suma o diferencia.

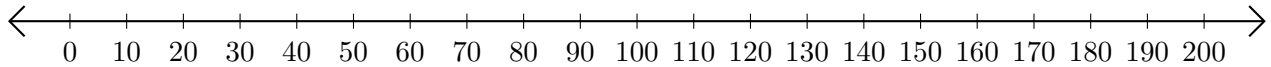
1. $170 + 30 = \underline{\hspace{2cm}}$



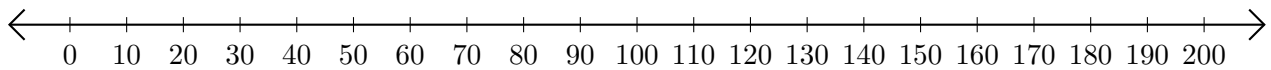
2. $150 - 60 = \underline{\hspace{2cm}}$



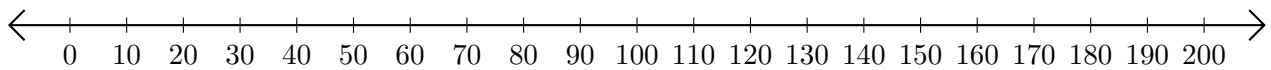
3. $20 + 80 = \underline{\hspace{2cm}}$



4. $150 - 140 = \underline{\hspace{2cm}}$



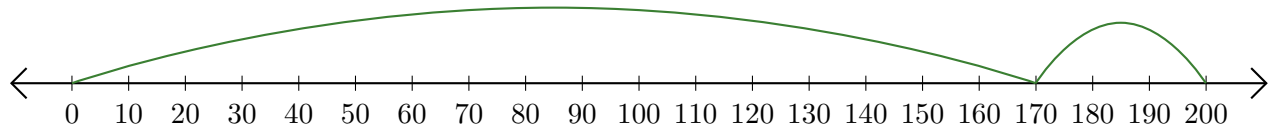
5. $90 + 60 = \underline{\hspace{2cm}}$



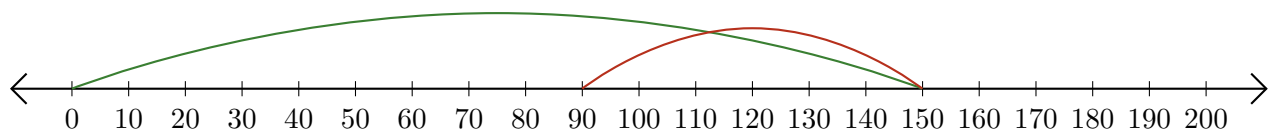
Sumar y Restar en Rectas Numéricas (F) Respuestas

Use las rectas numéricas para calcular cada suma o diferencia.

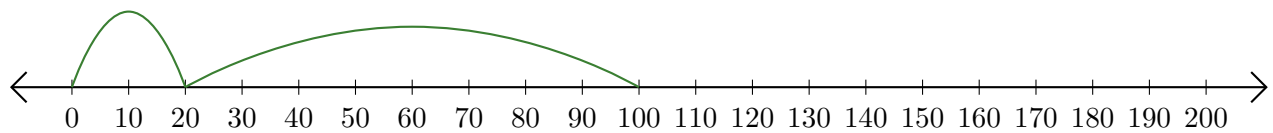
1. $170 + 30 = \underline{200}$



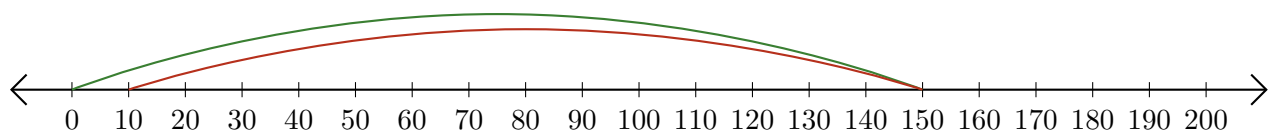
2. $150 - 60 = \underline{90}$



3. $20 + 80 = \underline{100}$



4. $150 - 140 = \underline{10}$



5. $90 + 60 = \underline{150}$

