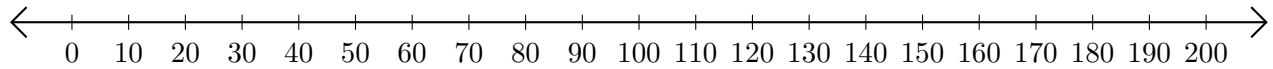


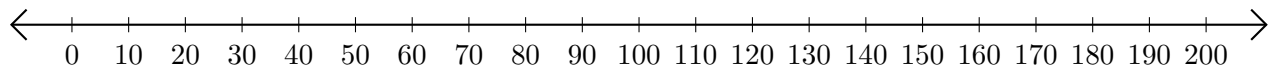
Sumar y Restar en Rectas Numéricas (G)

Use las rectas numéricas para calcular cada suma o diferencia.

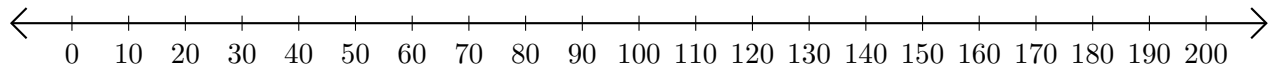
1. $160 + 40 = \underline{\hspace{2cm}}$



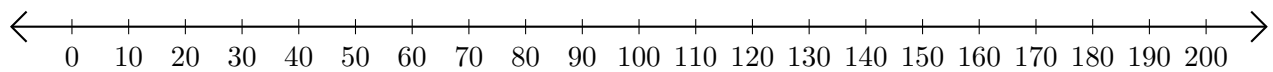
2. $140 - 90 = \underline{\hspace{2cm}}$



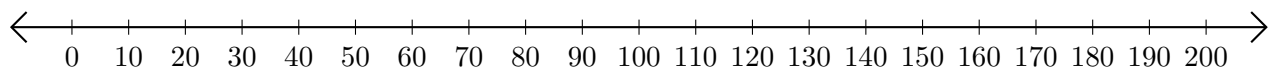
3. $170 + 30 = \underline{\hspace{2cm}}$



4. $160 - 40 = \underline{\hspace{2cm}}$



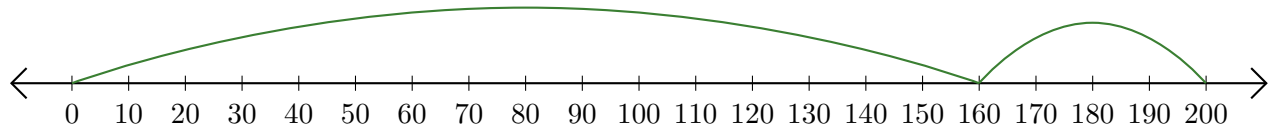
5. $150 + 50 = \underline{\hspace{2cm}}$



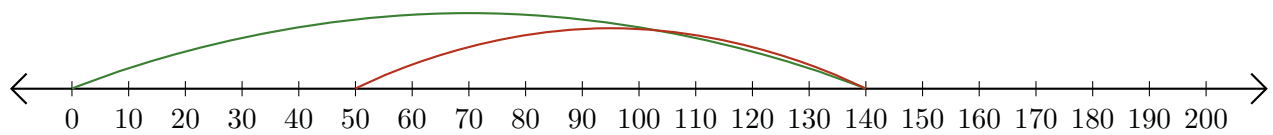
Sumar y Restar en Rectas Numéricas (G) Respuestas

Use las rectas numéricas para calcular cada suma o diferencia.

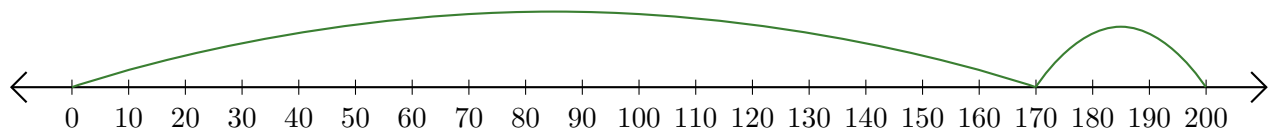
1. $160 + 40 = \underline{200}$



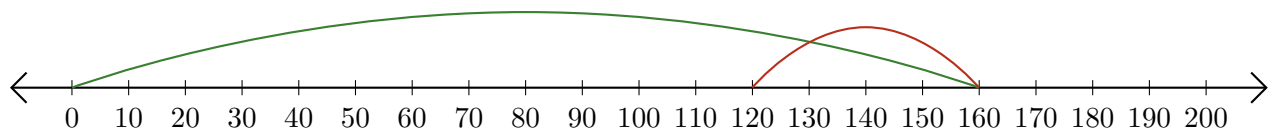
2. $140 - 90 = \underline{50}$



3. $170 + 30 = \underline{200}$



4. $160 - 40 = \underline{120}$



5. $150 + 50 = \underline{200}$

