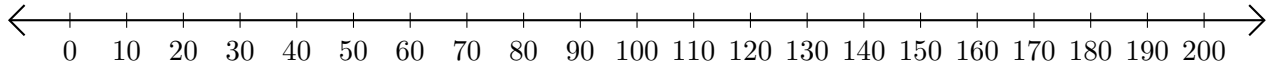


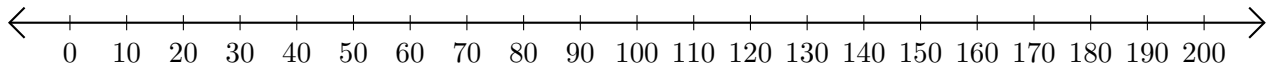
# Sumar y Restar en Rectas Numéricas (I)

Use las rectas numéricas para calcular cada suma o diferencia.

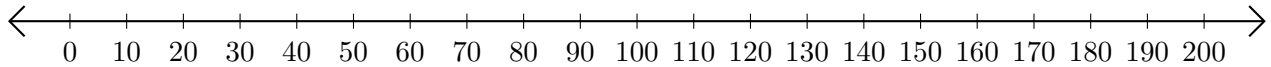
1.  $190 + 10 = \underline{\quad}$



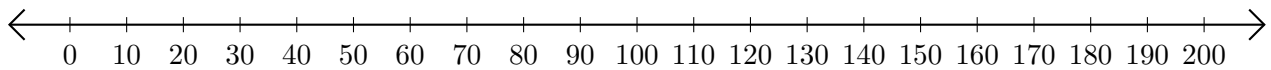
2.  $200 - 180 = \underline{\quad}$



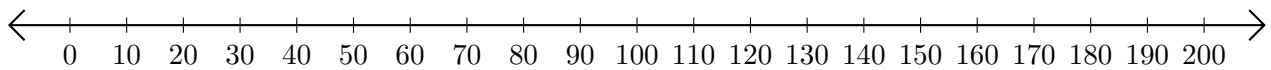
3.  $20 + 70 = \underline{\quad}$



4.  $160 - 50 = \underline{\quad}$



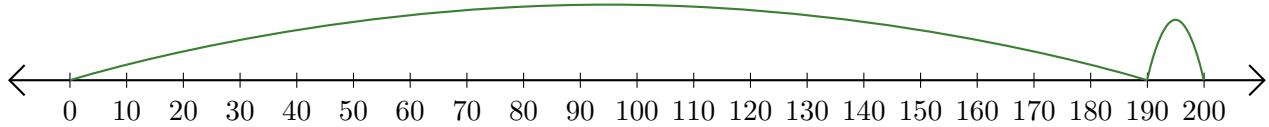
5.  $170 - 40 = \underline{\quad}$



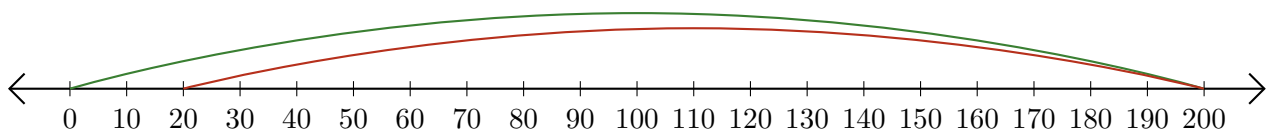
# Sumar y Restar en Rectas Numéricas (I) Respuestas

Use las rectas numéricas para calcular cada suma o diferencia.

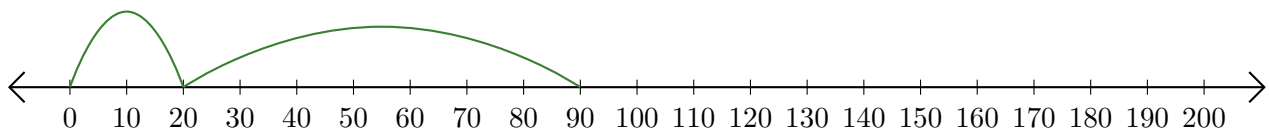
1.  $190 + 10 = \underline{200}$



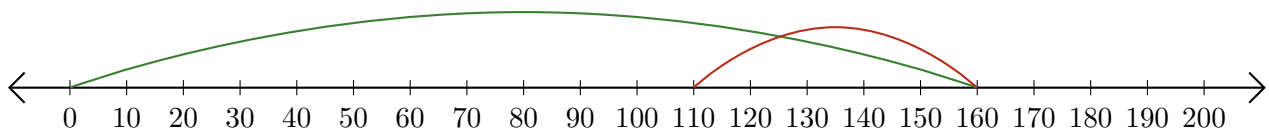
2.  $200 - 180 = \underline{20}$



3.  $20 + 70 = \underline{90}$



4.  $160 - 50 = \underline{110}$



5.  $170 - 40 = \underline{130}$

