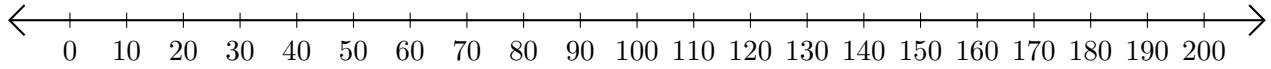


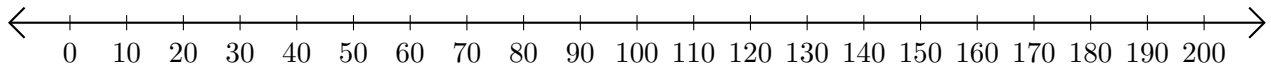
# Sumar y Restar en Rectas Numéricas (J)

Use las rectas numéricas para calcular cada suma o diferencia.

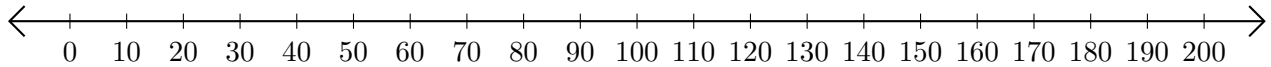
1.  $150 + 10 = \underline{\hspace{2cm}}$



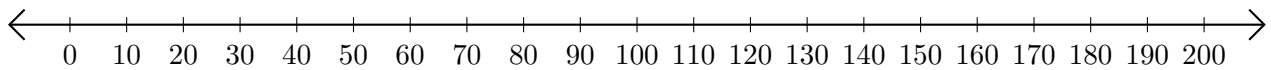
2.  $130 - 80 = \underline{\hspace{2cm}}$



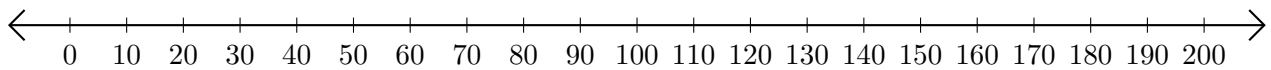
3.  $70 + 20 = \underline{\hspace{2cm}}$



4.  $60 - 50 = \underline{\hspace{2cm}}$



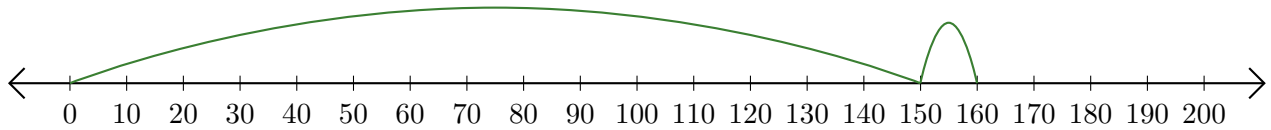
5.  $160 - 140 = \underline{\hspace{2cm}}$



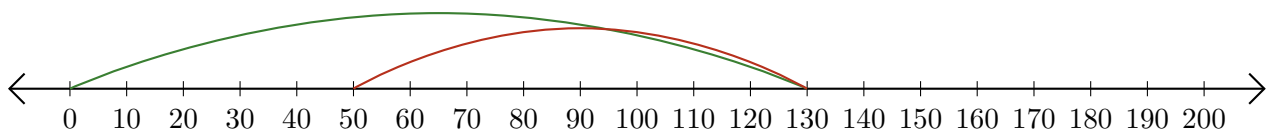
# Sumar y Restar en Rectas Numéricas (J) Respuestas

Use las rectas numéricas para calcular cada suma o diferencia.

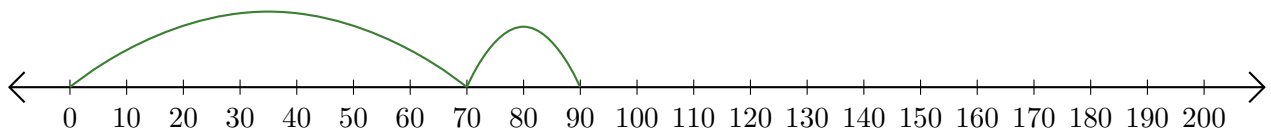
1.  $150 + 10 = \underline{160}$




2.  $130 - 80 = \underline{50}$



3.  $70 + 20 = \underline{90}$



4.  $60 - 50 = \underline{10}$



5.  $160 - 140 = \underline{20}$

