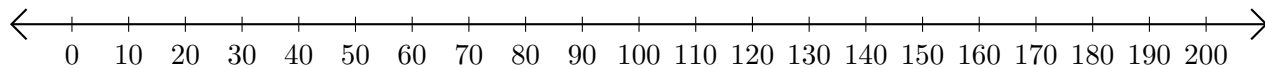


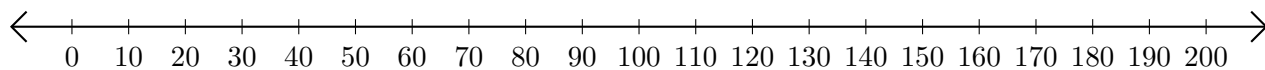
# Sumar y Restar en Rectas Numéricas (A)

Use las rectas numéricas para calcular cada suma o diferencia.

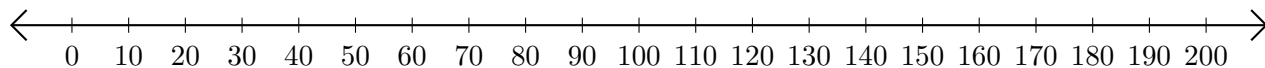
1.  $120 + 40 = \underline{\quad}$



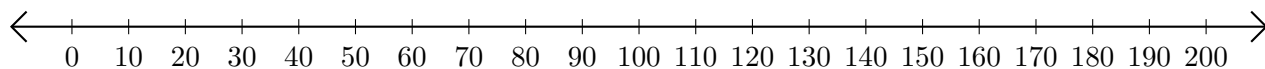
2.  $190 - 150 = \underline{\quad}$



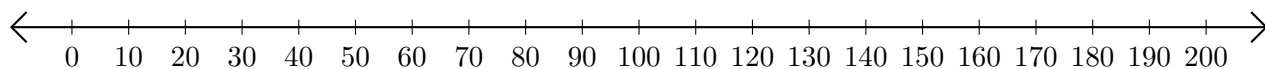
3.  $20 + 140 = \underline{\quad}$



4.  $150 - 70 = \underline{\quad}$



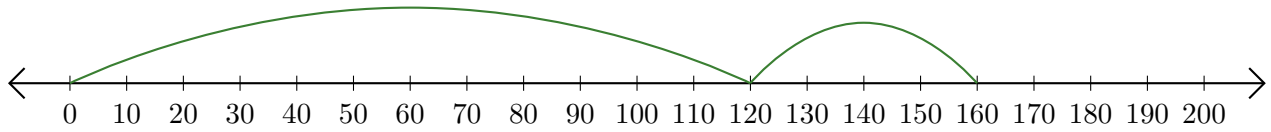
5.  $50 - 40 = \underline{\quad}$



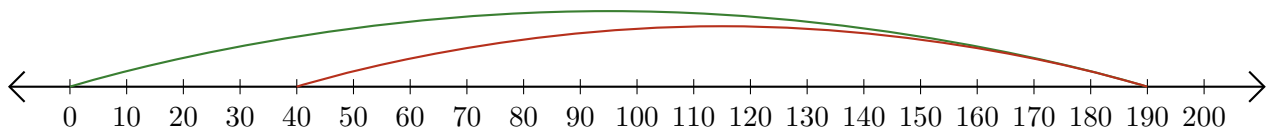
# Sumar y Restar en Rectas Numéricas (A) Respuestas

Use las rectas numéricas para calcular cada suma o diferencia.

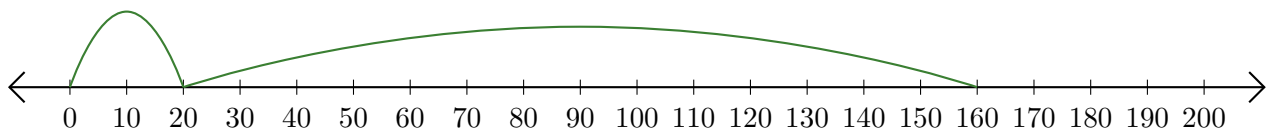
1.  $120 + 40 = \underline{160}$



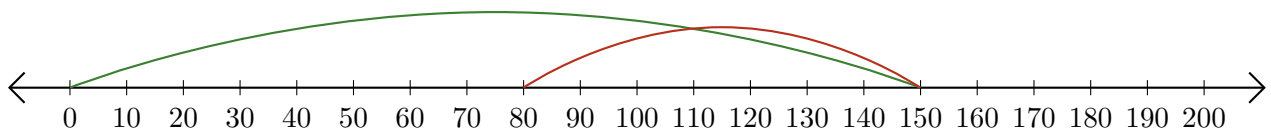
2.  $190 - 150 = \underline{40}$




3.  $20 + 140 = \underline{160}$



4.  $150 - 70 = \underline{80}$



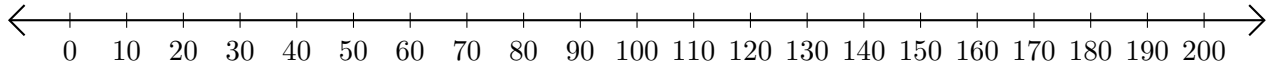
5.  $50 - 40 = \underline{10}$



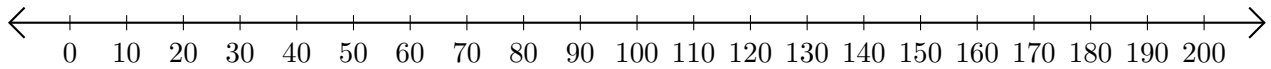
# Sumar y Restar en Rectas Numéricas (B)

Use las rectas numéricas para calcular cada suma o diferencia.

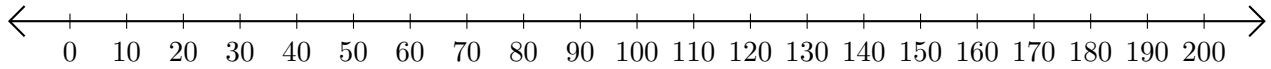
1.  $180 + 20 = \underline{\quad}$



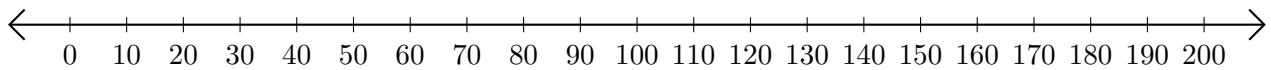
2.  $200 - 190 = \underline{\quad}$



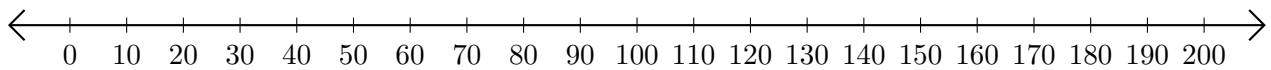
3.  $30 + 40 = \underline{\quad}$



4.  $120 - 90 = \underline{\quad}$



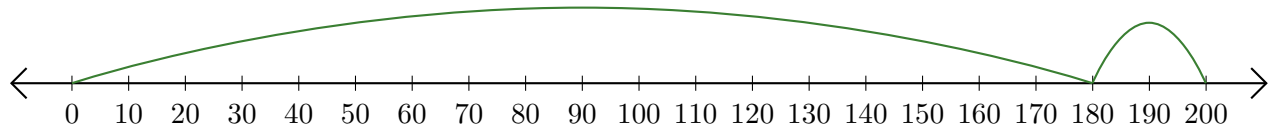
5.  $20 + 70 = \underline{\quad}$



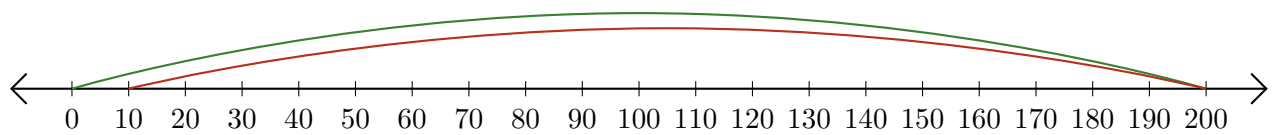
# Sumar y Restar en Rectas Numéricas (B) Respuestas

Use las rectas numéricas para calcular cada suma o diferencia.


1.  $180 + 20 = \underline{200}$



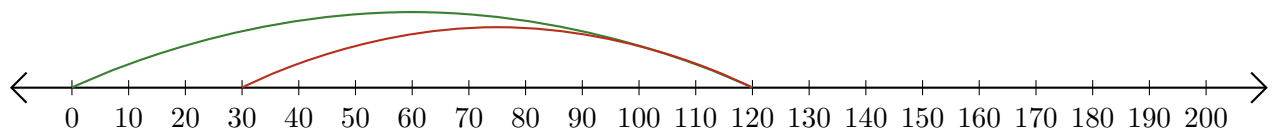
2.  $200 - 190 = \underline{10}$



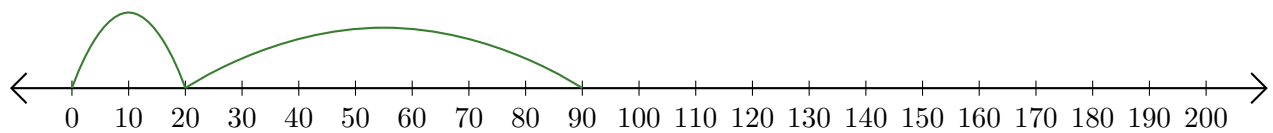
3.  $30 + 40 = \underline{70}$



4.  $120 - 90 = \underline{30}$



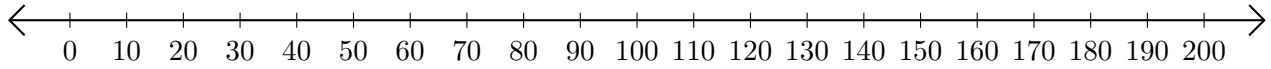
5.  $20 + 70 = \underline{90}$



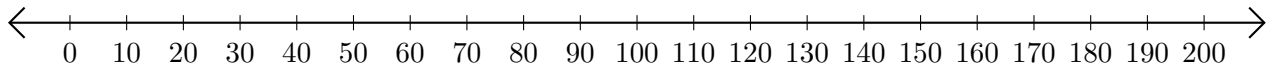
# Sumar y Restar en Rectas Numéricas (C)

Use las rectas numéricas para calcular cada suma o diferencia.

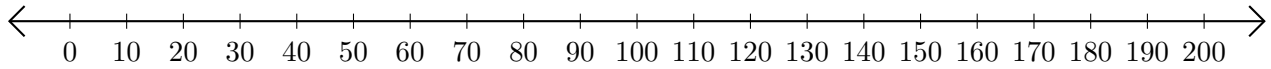
1.  $10 + 20 = \underline{\quad}$



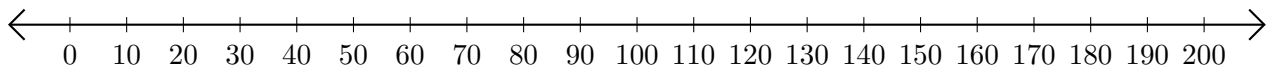
2.  $190 - 170 = \underline{\quad}$



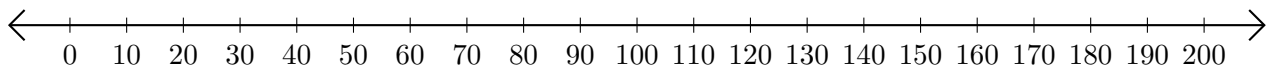
3.  $100 + 60 = \underline{\quad}$



4.  $160 - 110 = \underline{\quad}$




5.  $130 - 90 = \underline{\quad}$



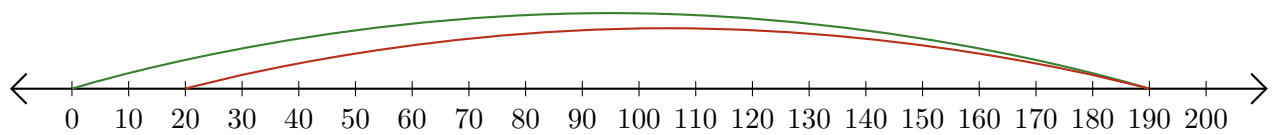
# Sumar y Restar en Rectas Numéricas (C) Respuestas

Use las rectas numéricas para calcular cada suma o diferencia.

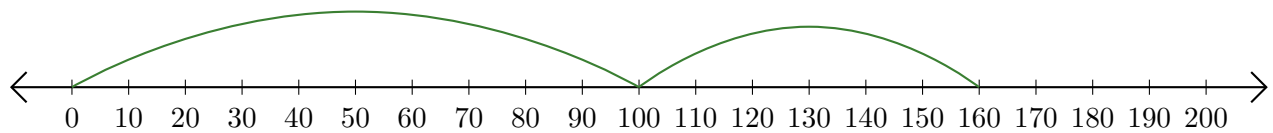
1.  $10 + 20 = \underline{30}$



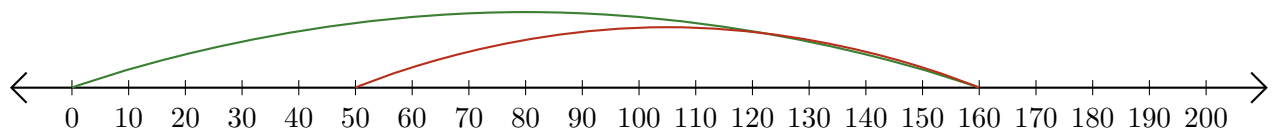
2.  $190 - 170 = \underline{20}$



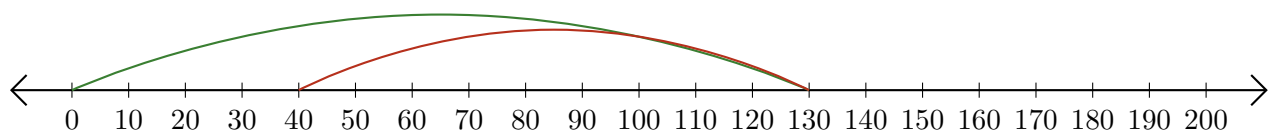
3.  $100 + 60 = \underline{160}$



4.  $160 - 110 = \underline{50}$



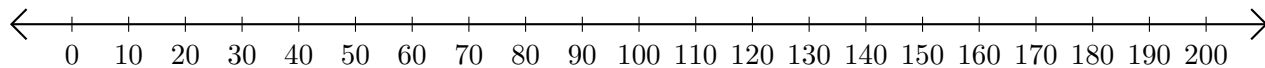
5.  $130 - 90 = \underline{40}$



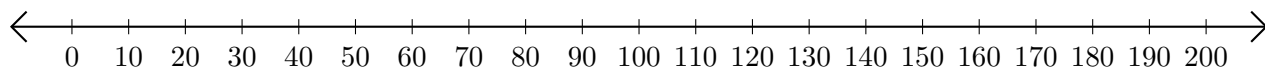
## Sumar y Restar en Rectas Numéricas (D)

Use las rectas numéricas para calcular cada suma o diferencia.

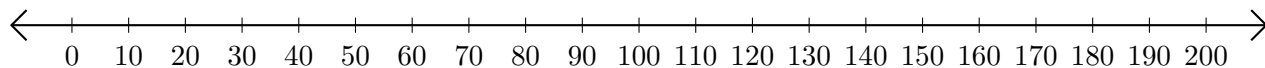
1.  $50 + 100 = \underline{\hspace{2cm}}$



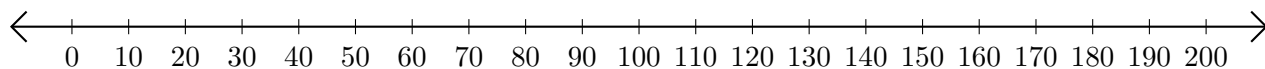
2.  $190 - 90 = \underline{\hspace{2cm}}$



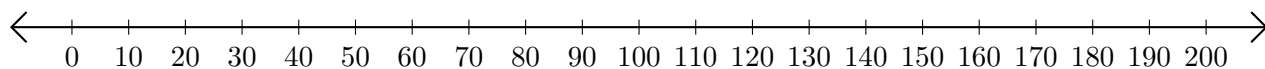
3.  $20 + 180 = \underline{\hspace{2cm}}$



4.  $170 - 150 = \underline{\hspace{2cm}}$



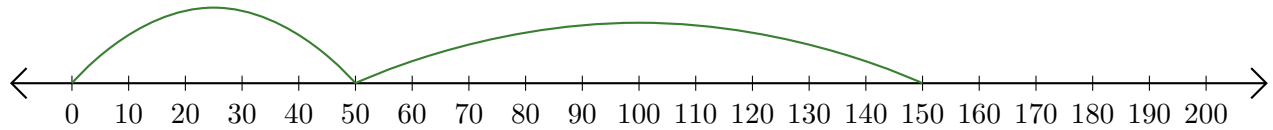
5.  $10 + 90 = \underline{\hspace{2cm}}$



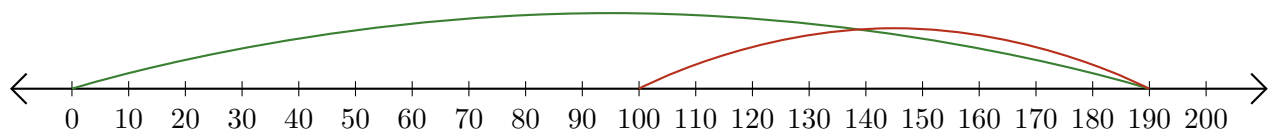
# Sumar y Restar en Rectas Numéricas (D) Respuestas

Use las rectas numéricas para calcular cada suma o diferencia.

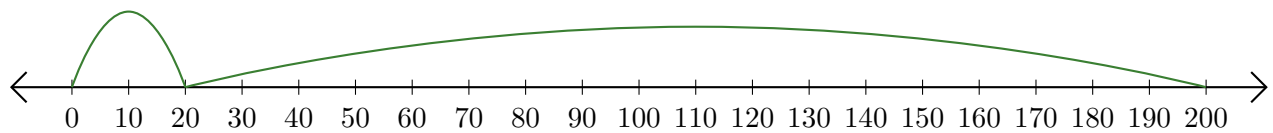
1.  $50 + 100 = \underline{150}$



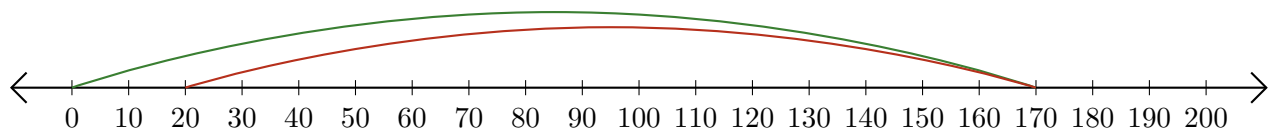
2.  $190 - 90 = \underline{100}$



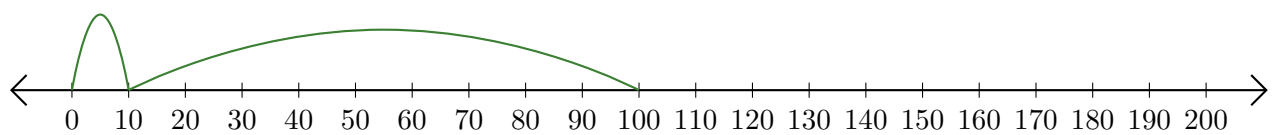
3.  $20 + 180 = \underline{200}$



4.  $170 - 150 = \underline{20}$



5.  $10 + 90 = \underline{100}$

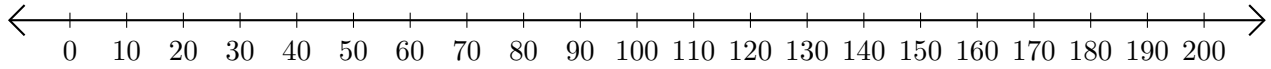




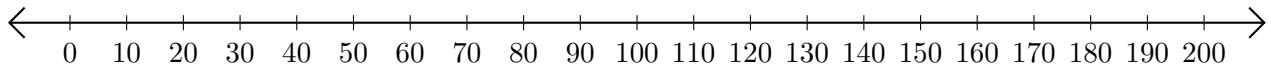
# Sumar y Restar en Rectas Numéricas (E)

Use las rectas numéricas para calcular cada suma o diferencia.

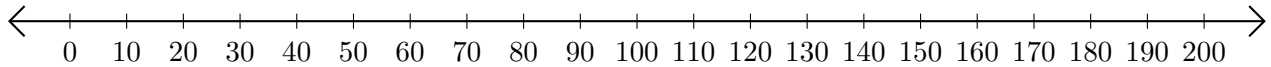
1.  $80 + 50 = \underline{\quad}$



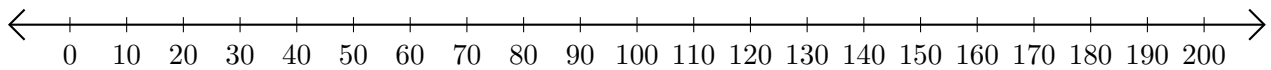
2.  $200 - 190 = \underline{\quad}$



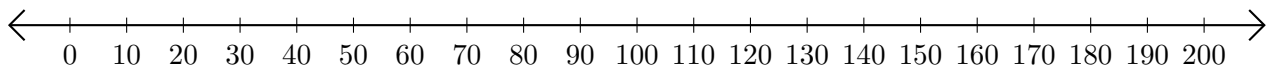
3.  $40 + 90 = \underline{\quad}$



4.  $130 - 100 = \underline{\quad}$



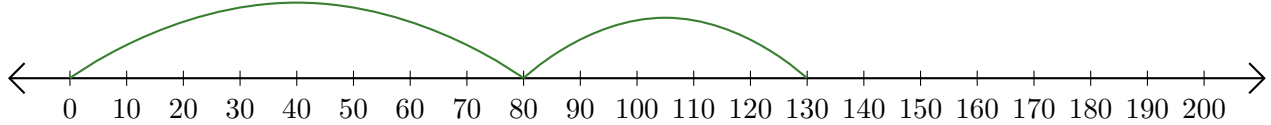
5.  $200 - 50 = \underline{\quad}$



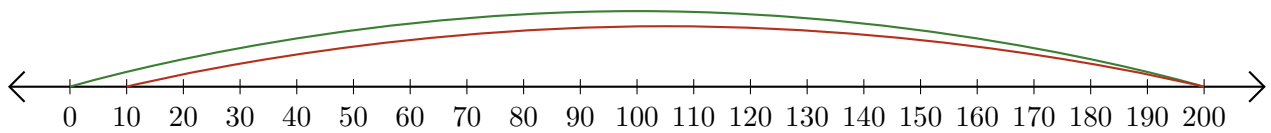
# Sumar y Restar en Rectas Numéricas (E) Respuestas

Use las rectas numéricas para calcular cada suma o diferencia.

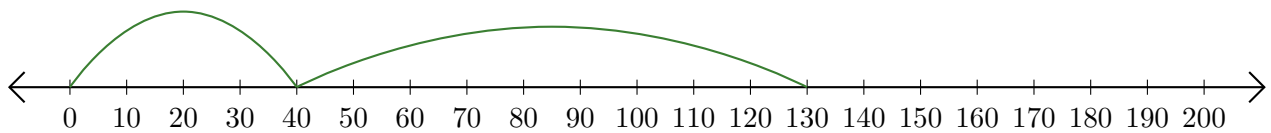
1.  $80 + 50 = \underline{130}$



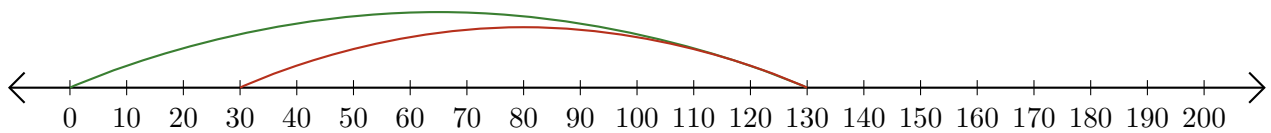
2.  $200 - 190 = \underline{10}$



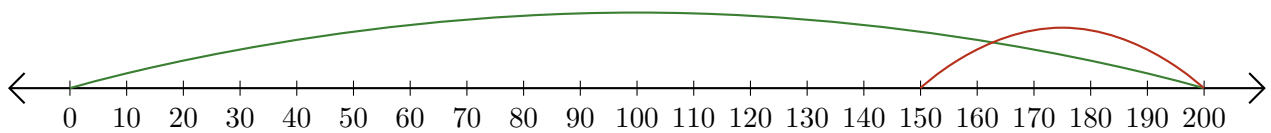
3.  $40 + 90 = \underline{130}$



4.  $130 - 100 = \underline{30}$



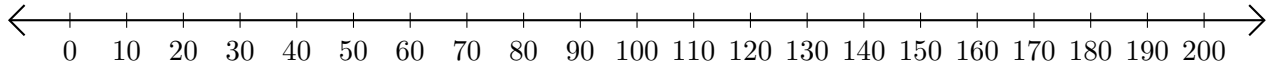
5.  $200 - 50 = \underline{150}$



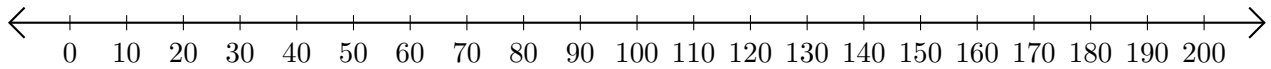
# Sumar y Restar en Rectas Numéricas (F)

Use las rectas numéricas para calcular cada suma o diferencia.

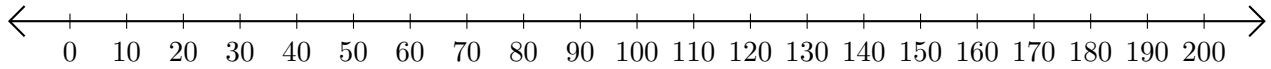
1.  $170 + 30 = \underline{\hspace{2cm}}$



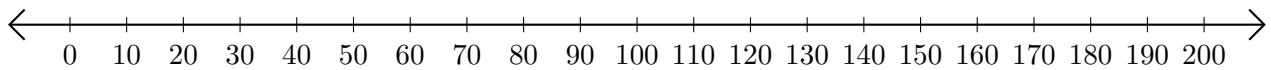
2.  $150 - 60 = \underline{\hspace{2cm}}$



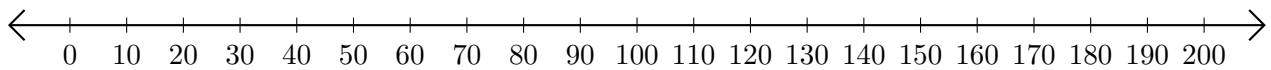
3.  $20 + 80 = \underline{\hspace{2cm}}$



4.  $150 - 140 = \underline{\hspace{2cm}}$



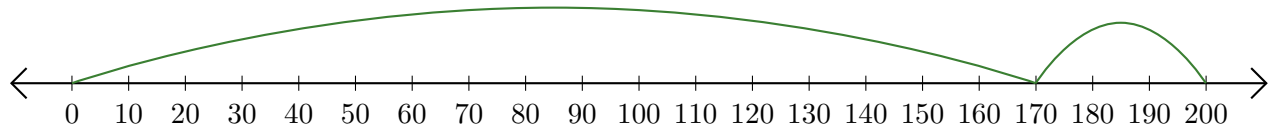
5.  $90 + 60 = \underline{\hspace{2cm}}$



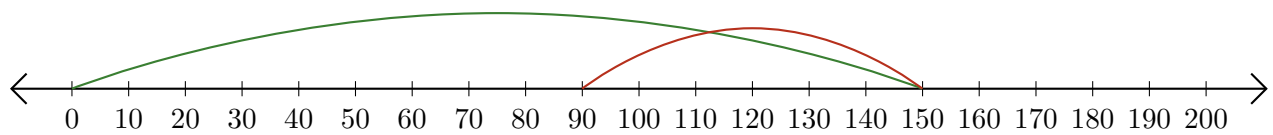
# Sumar y Restar en Rectas Numéricas (F) Respuestas

Use las rectas numéricas para calcular cada suma o diferencia.

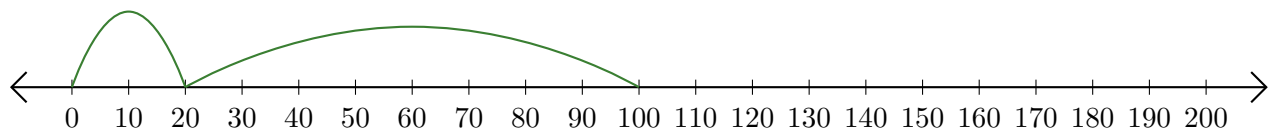
1.  $170 + 30 = \underline{200}$



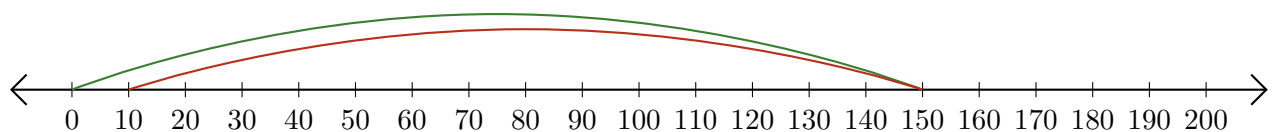
2.  $150 - 60 = \underline{90}$



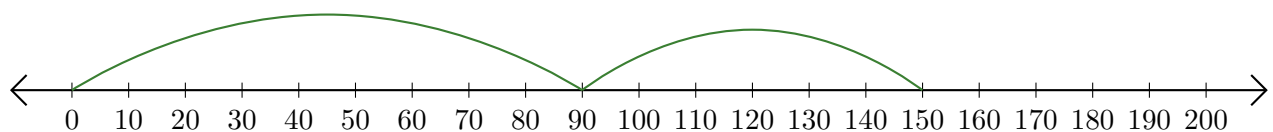
3.  $20 + 80 = \underline{100}$



4.  $150 - 140 = \underline{10}$



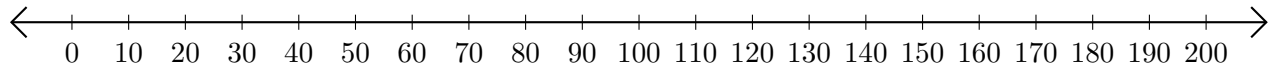
5.  $90 + 60 = \underline{150}$



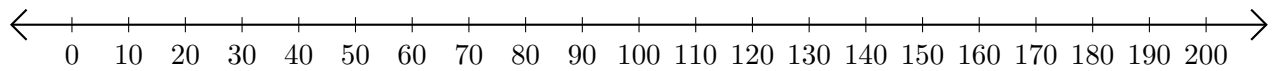
# Sumar y Restar en Rectas Numéricas (G)

Use las rectas numéricas para calcular cada suma o diferencia.

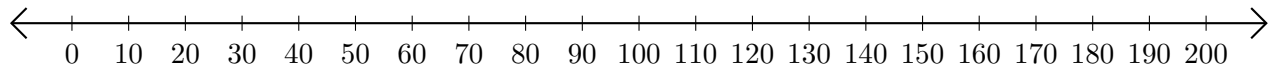
1.  $160 + 40 = \underline{\hspace{2cm}}$



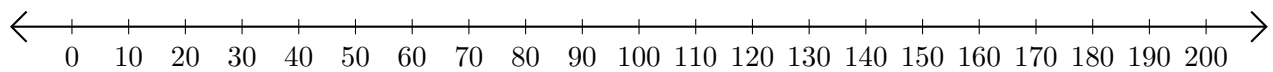
2.  $140 - 90 = \underline{\hspace{2cm}}$



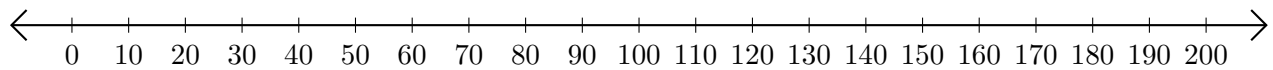
3.  $170 + 30 = \underline{\hspace{2cm}}$



4.  $160 - 40 = \underline{\hspace{2cm}}$



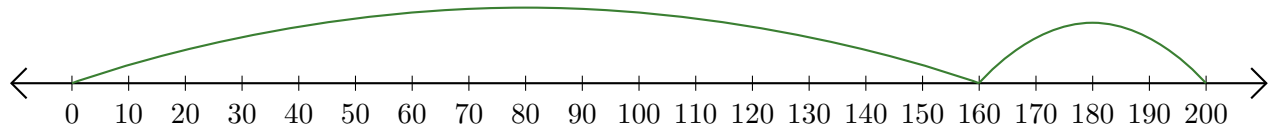
5.  $150 + 50 = \underline{\hspace{2cm}}$



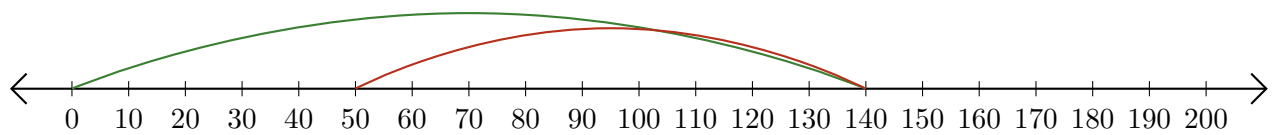
# Sumar y Restar en Rectas Numéricas (G) Respuestas

Use las rectas numéricas para calcular cada suma o diferencia.

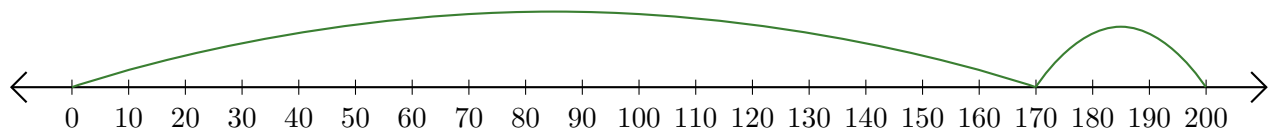
1.  $160 + 40 = \underline{200}$



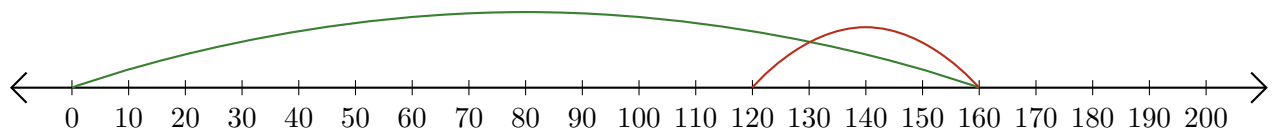
2.  $140 - 90 = \underline{50}$



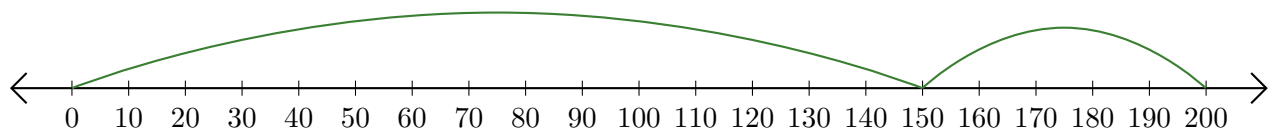
3.  $170 + 30 = \underline{200}$



4.  $160 - 40 = \underline{120}$



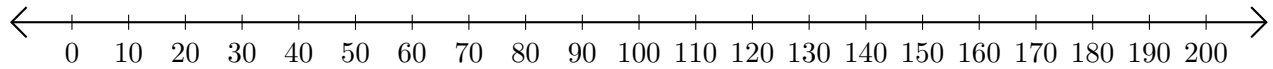
5.  $150 + 50 = \underline{200}$



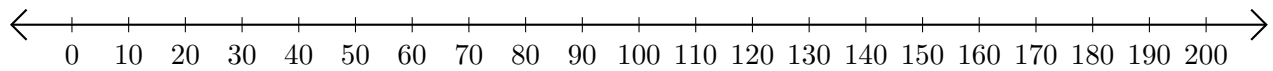
# Sumar y Restar en Rectas Numéricas (H)

Use las rectas numéricas para calcular cada suma o diferencia.

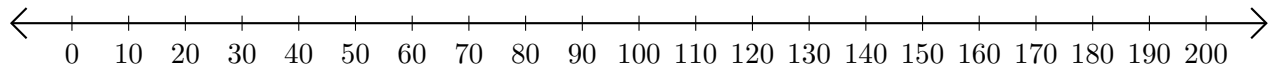
1.  $60 + 100 = \underline{\hspace{2cm}}$



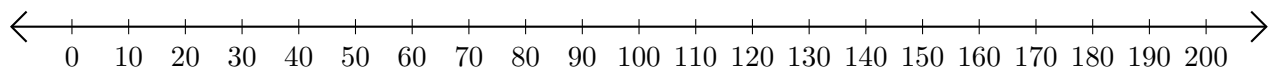
2.  $200 - 150 = \underline{\hspace{2cm}}$



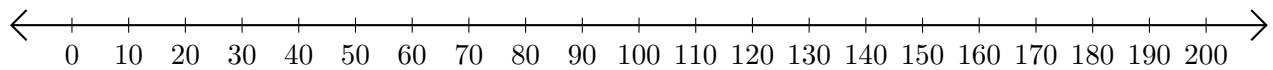
3.  $20 + 40 = \underline{\hspace{2cm}}$



4.  $180 - 90 = \underline{\hspace{2cm}}$



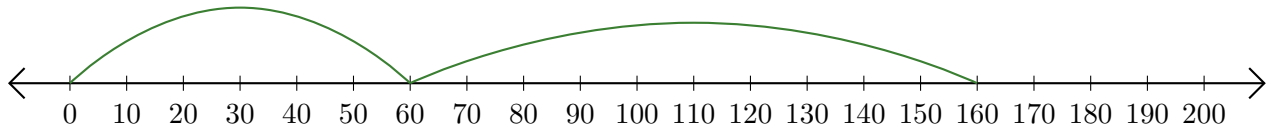
5.  $150 - 140 = \underline{\hspace{2cm}}$



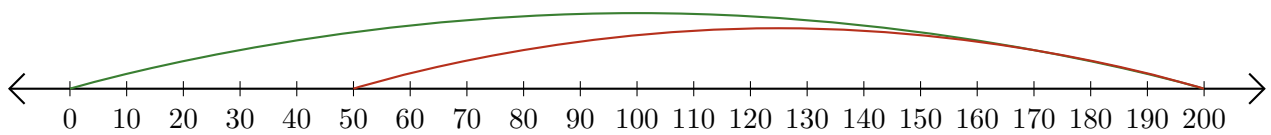
# Sumar y Restar en Rectas Numéricas (H) Respuestas

Use las rectas numéricas para calcular cada suma o diferencia.


1.  $60 + 100 = \underline{160}$



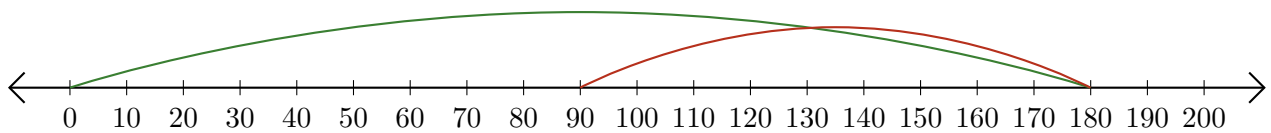
2.  $200 - 150 = \underline{50}$



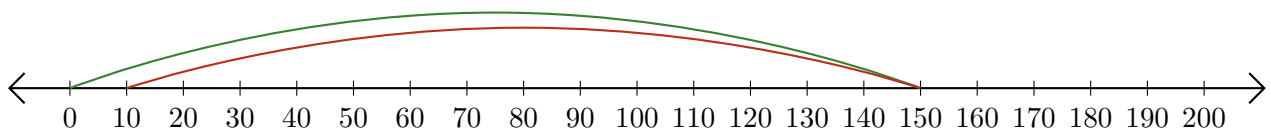
3.  $20 + 40 = \underline{60}$



4.  $180 - 90 = \underline{90}$



5.  $150 - 140 = \underline{10}$

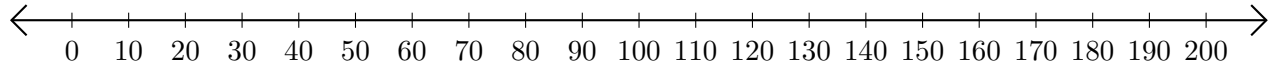




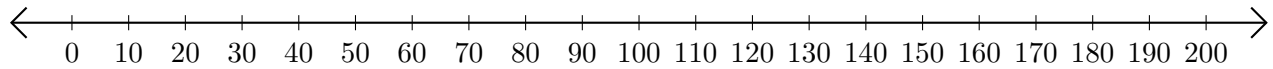
# Sumar y Restar en Rectas Numéricas (I)

Use las rectas numéricas para calcular cada suma o diferencia.

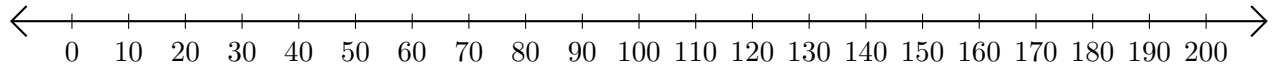
1.  $190 + 10 = \underline{\quad}$



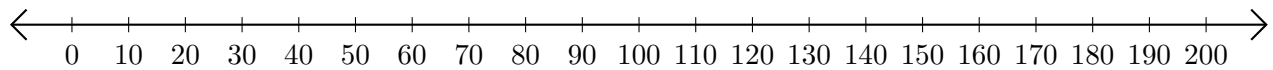
2.  $200 - 180 = \underline{\quad}$



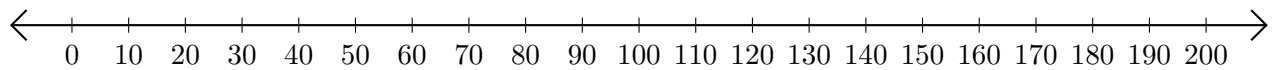
3.  $20 + 70 = \underline{\quad}$



4.  $160 - 50 = \underline{\quad}$



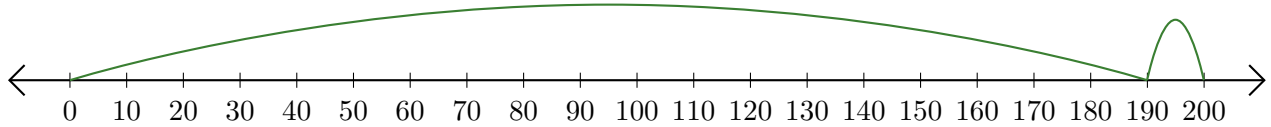
5.  $170 - 40 = \underline{\quad}$



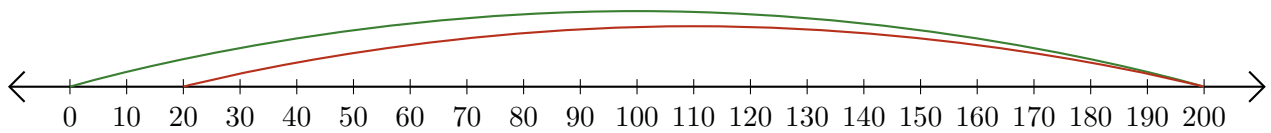
# Sumar y Restar en Rectas Numéricas (I) Respuestas

Use las rectas numéricas para calcular cada suma o diferencia.

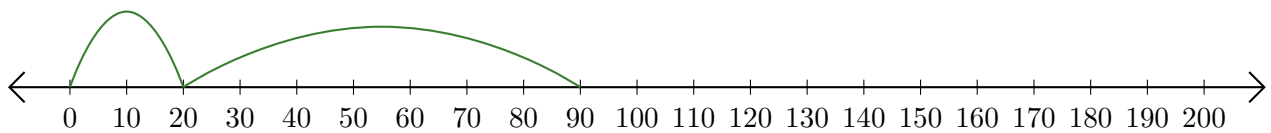
1.  $190 + 10 = \underline{200}$



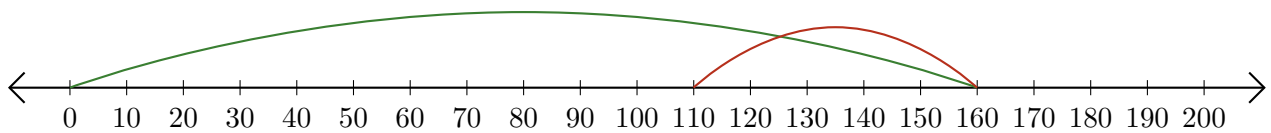
2.  $200 - 180 = \underline{20}$



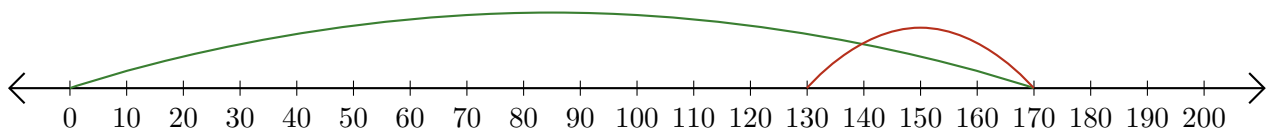
3.  $20 + 70 = \underline{90}$



4.  $160 - 50 = \underline{110}$



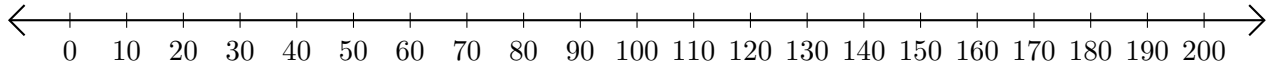
5.  $170 - 40 = \underline{130}$



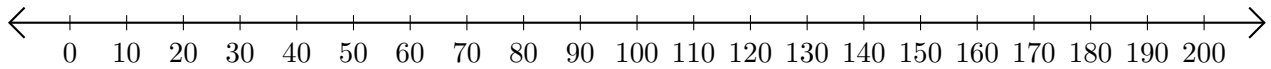
# Sumar y Restar en Rectas Numéricas (J)

Use las rectas numéricas para calcular cada suma o diferencia.

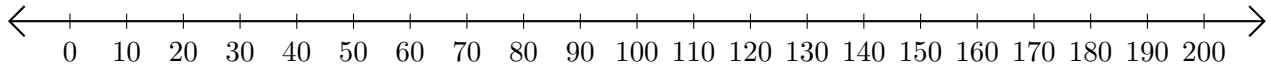
1.  $150 + 10 = \underline{\hspace{2cm}}$



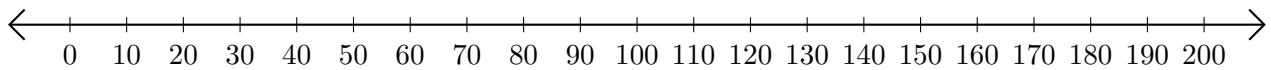
2.  $130 - 80 = \underline{\hspace{2cm}}$



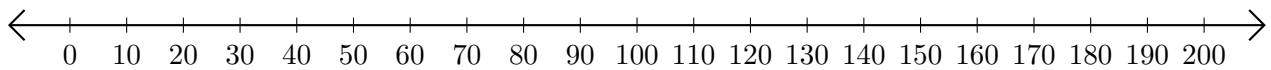
3.  $70 + 20 = \underline{\hspace{2cm}}$



4.  $60 - 50 = \underline{\hspace{2cm}}$



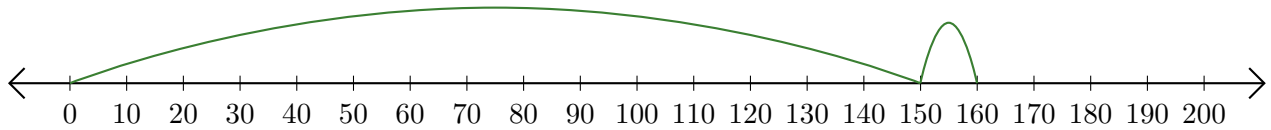
5.  $160 - 140 = \underline{\hspace{2cm}}$



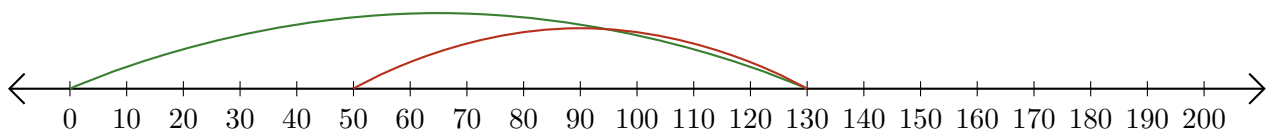
# Sumar y Restar en Rectas Numéricas (J) Respuestas

Use las rectas numéricas para calcular cada suma o diferencia.

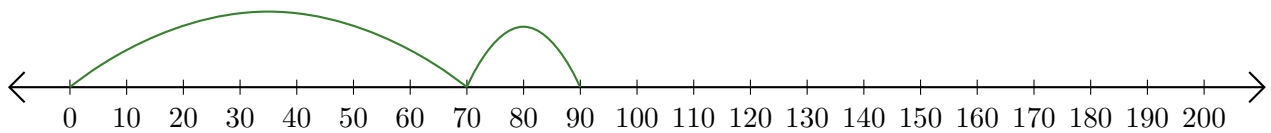
1.  $150 + 10 = \underline{160}$




2.  $130 - 80 = \underline{50}$



3.  $70 + 20 = \underline{90}$



4.  $60 - 50 = \underline{10}$



5.  $160 - 140 = \underline{20}$

