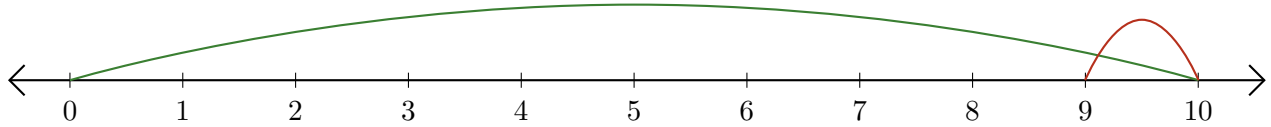


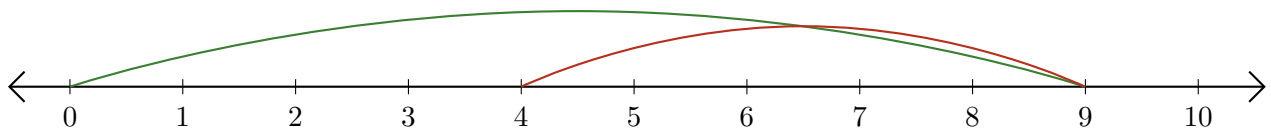
Leer Rectas Numéricas (C)

Escriba la pregunta que representa cada recta numérica.

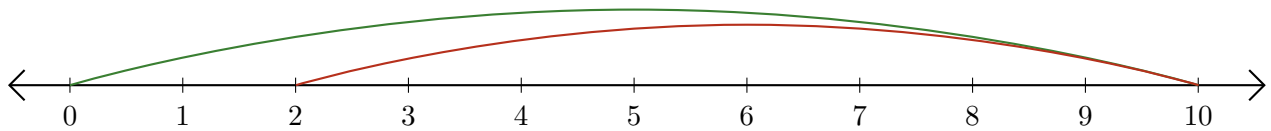
1. $\underline{\quad} - \underline{\quad} = \underline{\quad}$



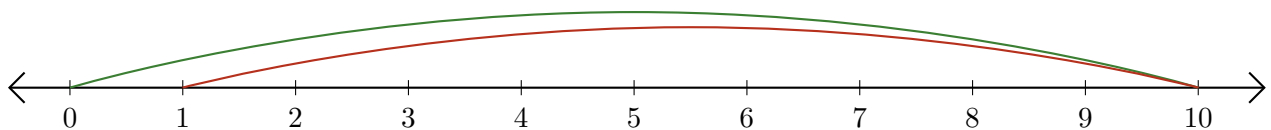
2. $\underline{\quad} - \underline{\quad} = \underline{\quad}$



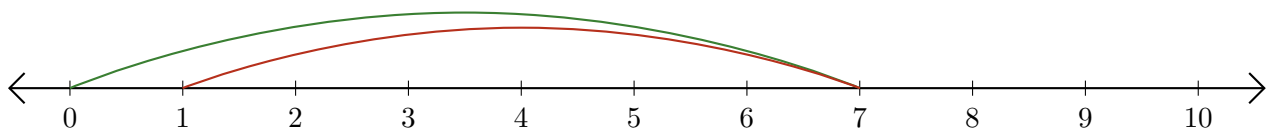
3. $\underline{\quad} - \underline{\quad} = \underline{\quad}$



4. $\underline{\quad} - \underline{\quad} = \underline{\quad}$



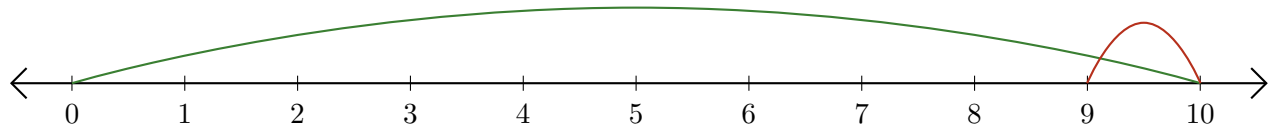
5. $\underline{\quad} - \underline{\quad} = \underline{\quad}$



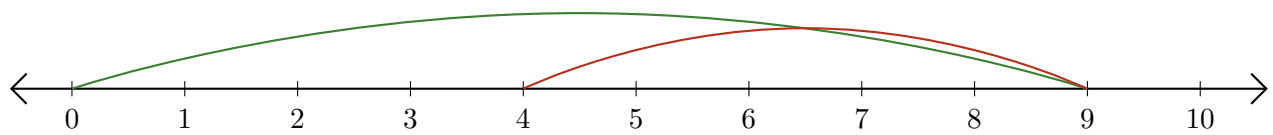
Leer Rectas Numéricas (C) Respuestas

Escriba la pregunta que representa cada recta numérica.

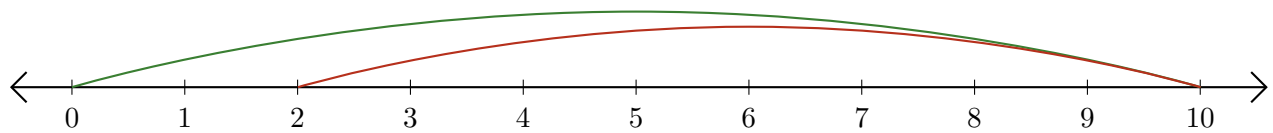
1. $\underline{10} - \underline{1} = \underline{9}$



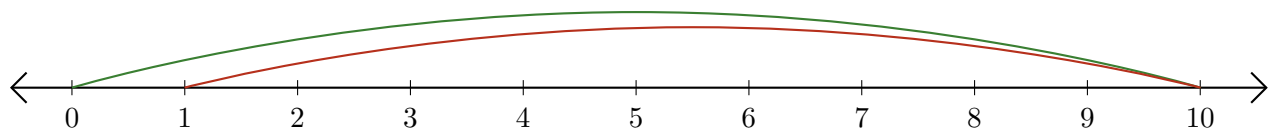
2. $\underline{9} - \underline{5} = \underline{4}$



3. $\underline{10} - \underline{8} = \underline{2}$



4. $\underline{10} - \underline{9} = \underline{1}$



5. $\underline{7} - \underline{6} = \underline{1}$

