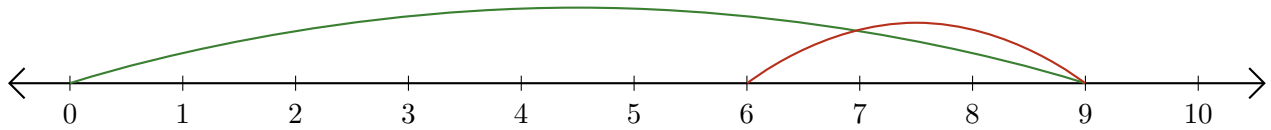


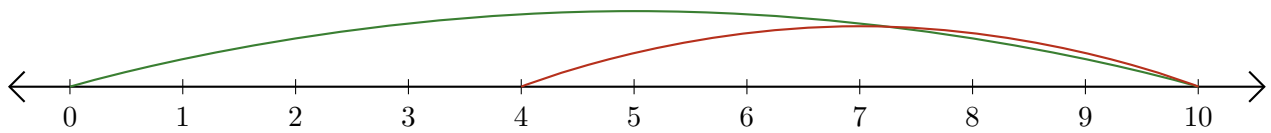
# Leer Rectas Numéricas (D)

Escriba la pregunta que representa cada recta numérica.

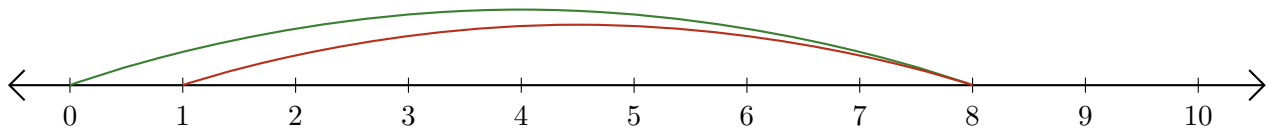
1.  $\underline{\quad} - \underline{\quad} = \underline{\quad}$



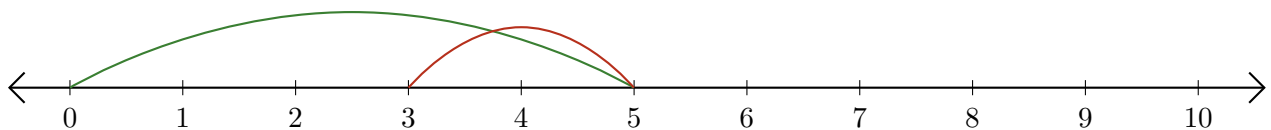
2.  $\underline{\quad} - \underline{\quad} = \underline{\quad}$



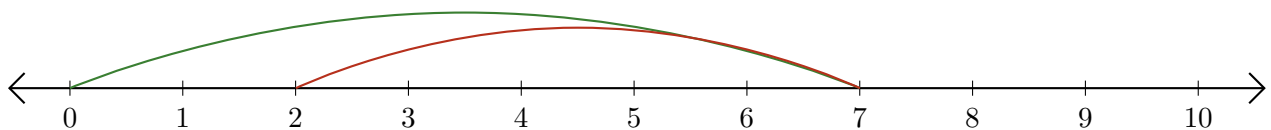
3.  $\underline{\quad} - \underline{\quad} = \underline{\quad}$



4.  $\underline{\quad} - \underline{\quad} = \underline{\quad}$



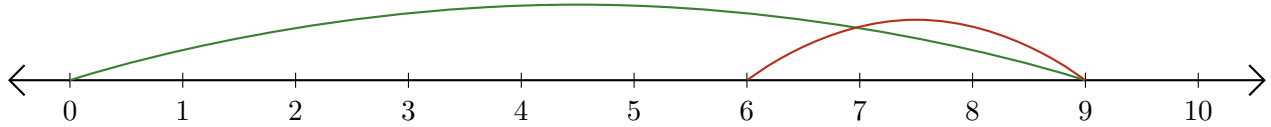
5.  $\underline{\quad} - \underline{\quad} = \underline{\quad}$



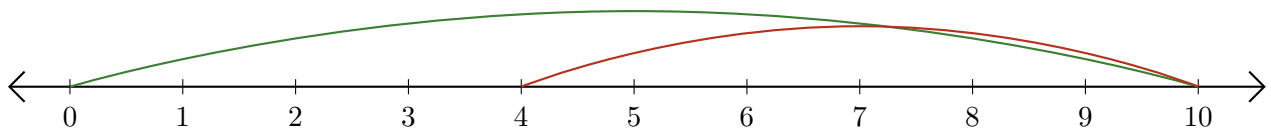
# Leer Rectas Numéricas (D) Respuestas

Escriba la pregunta que representa cada recta numérica.

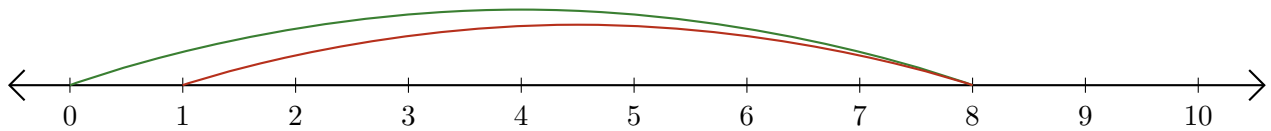
1.  $\underline{9} - \underline{3} = \underline{6}$



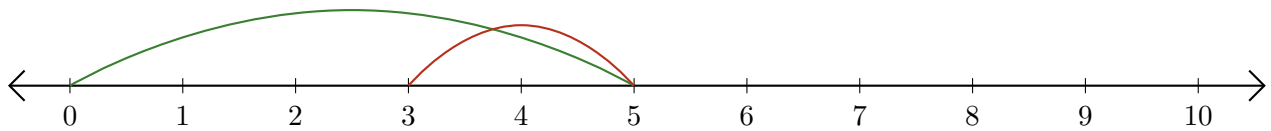
2.  $\underline{10} - \underline{6} = \underline{4}$



3.  $\underline{8} - \underline{7} = \underline{1}$



4.  $\underline{5} - \underline{2} = \underline{3}$



5.  $\underline{7} - \underline{5} = \underline{2}$

