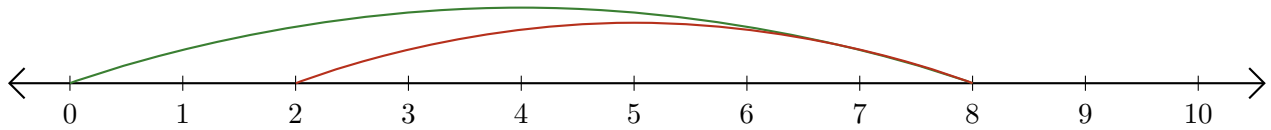


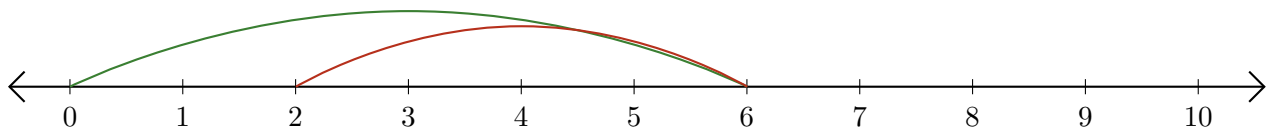
# Leer Rectas Numéricas (J)

Escriba la pregunta que representa cada recta numérica.

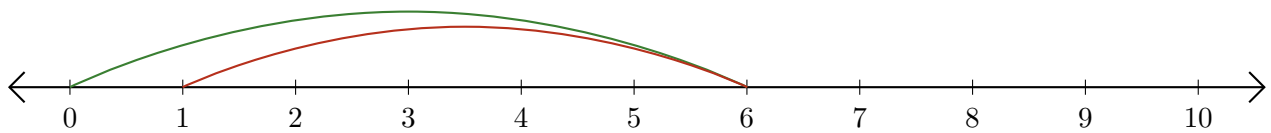
1.  $\underline{\quad} - \underline{\quad} = \underline{\quad}$



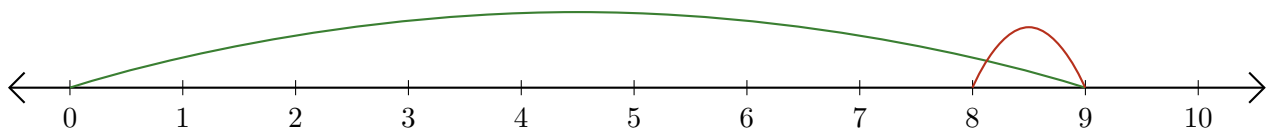
2.  $\underline{\quad} - \underline{\quad} = \underline{\quad}$



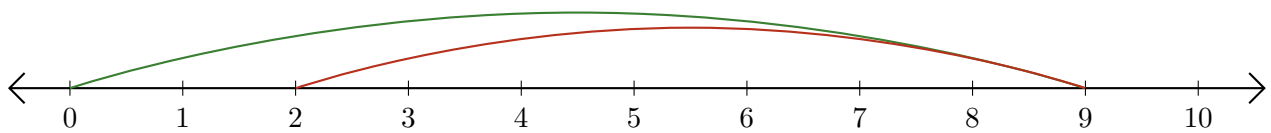
3.  $\underline{\quad} - \underline{\quad} = \underline{\quad}$



4.  $\underline{\quad} - \underline{\quad} = \underline{\quad}$



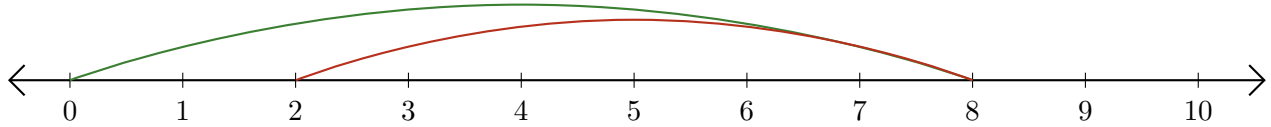
5.  $\underline{\quad} - \underline{\quad} = \underline{\quad}$



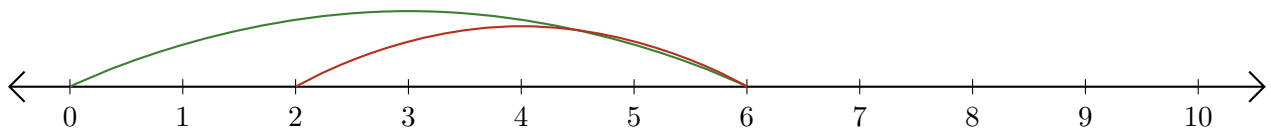
# Leer Rectas Numéricas (J) Respuestas

Escriba la pregunta que representa cada recta numérica.

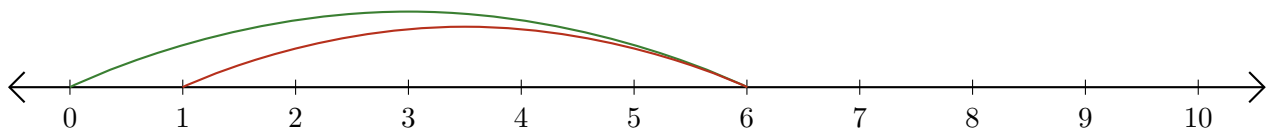
1.  $\underline{8} - \underline{6} = \underline{2}$



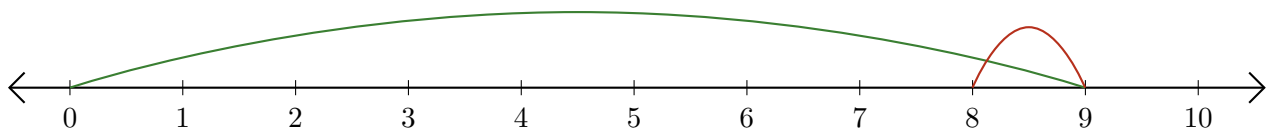
2.  $\underline{6} - \underline{4} = \underline{2}$



3.  $\underline{6} - \underline{5} = \underline{1}$



4.  $\underline{9} - \underline{1} = \underline{8}$



5.  $\underline{9} - \underline{7} = \underline{2}$

