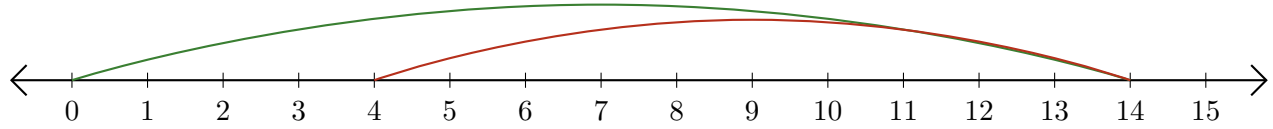


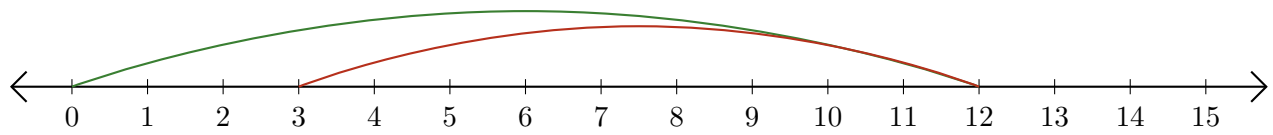
Leer Rectas Numéricas (B)

Escriba la pregunta que representa cada recta numérica.

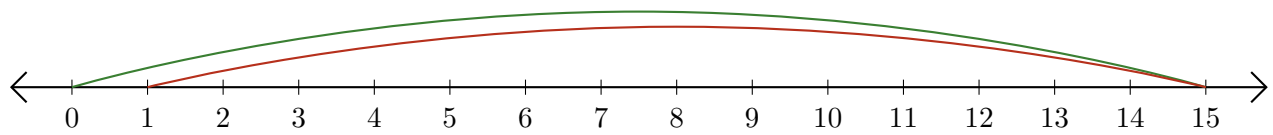
1. $\underline{\quad} - \underline{\quad} = \underline{\quad}$



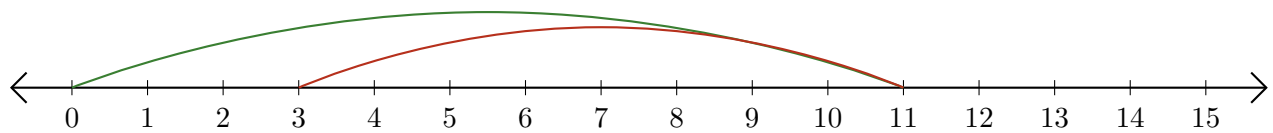
2. $\underline{\quad} - \underline{\quad} = \underline{\quad}$



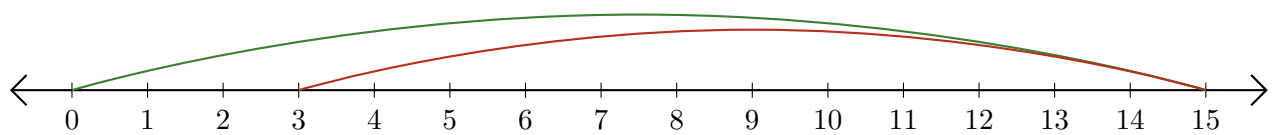
3. $\underline{\quad} - \underline{\quad} = \underline{\quad}$



4. $\underline{\quad} - \underline{\quad} = \underline{\quad}$



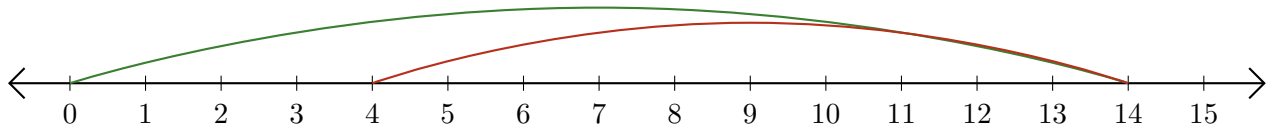
5. $\underline{\quad} - \underline{\quad} = \underline{\quad}$



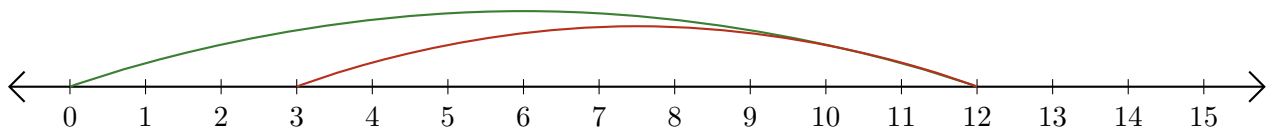
Leer Rectas Numéricas (B) Respuestas

Escriba la pregunta que representa cada recta numérica.

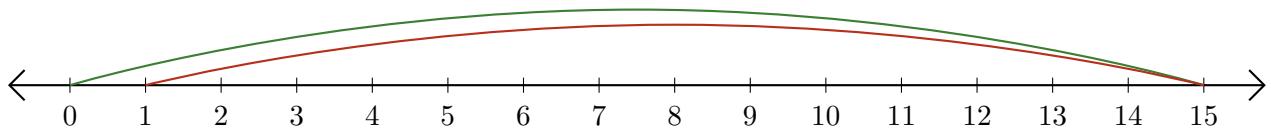
1. $\underline{14} - \underline{10} = \underline{4}$



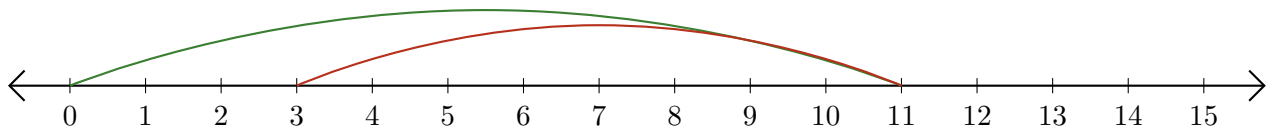
2. $\underline{12} - \underline{9} = \underline{3}$



3. $\underline{15} - \underline{14} = \underline{1}$



4. $\underline{11} - \underline{8} = \underline{3}$



5. $\underline{15} - \underline{12} = \underline{3}$

