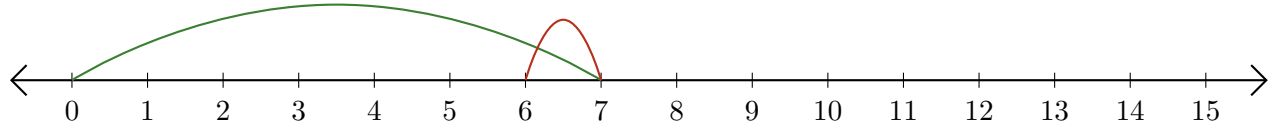


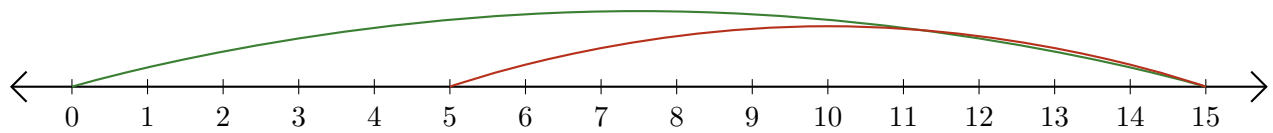
Leer Rectas Numéricas (H)

Escriba la pregunta que representa cada recta numérica.

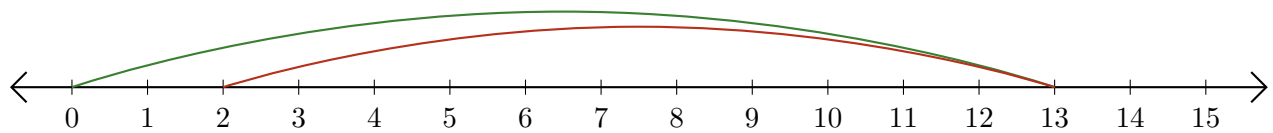
1. $\underline{\quad} - \underline{\quad} = \underline{\quad}$



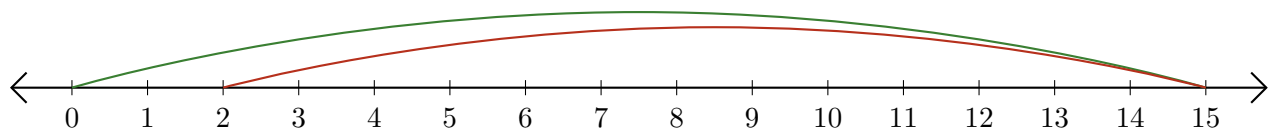
2. $\underline{\quad} - \underline{\quad} = \underline{\quad}$



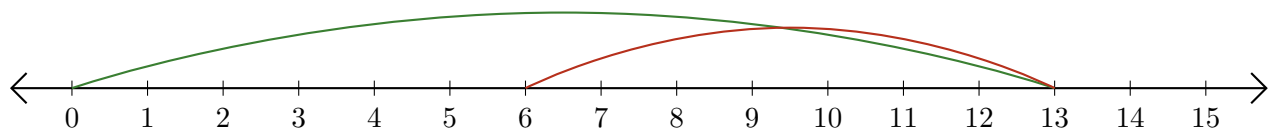
3. $\underline{\quad} - \underline{\quad} = \underline{\quad}$



4. $\underline{\quad} - \underline{\quad} = \underline{\quad}$



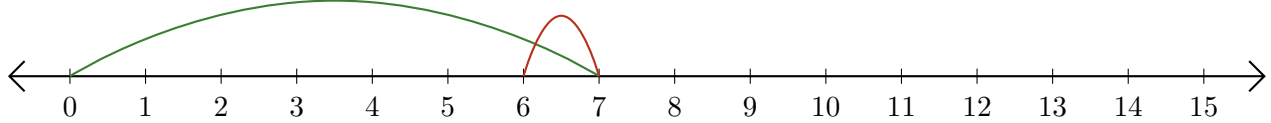
5. $\underline{\quad} - \underline{\quad} = \underline{\quad}$



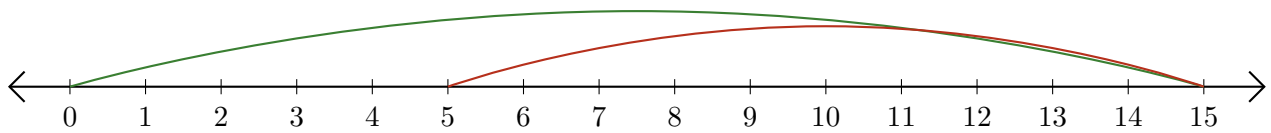
Leer Rectas Numéricas (H) Respuestas

Escriba la pregunta que representa cada recta numérica.

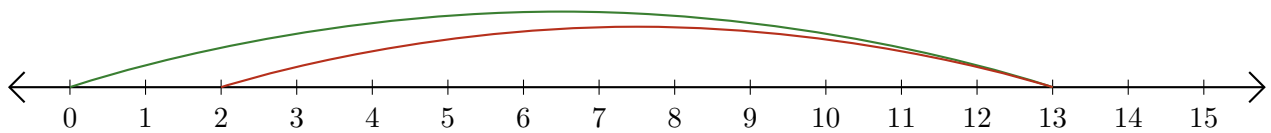
1. $\underline{7} - \underline{1} = \underline{6}$



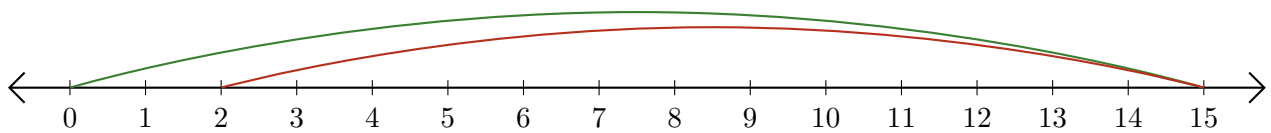
2. $\underline{15} - \underline{10} = \underline{5}$



3. $\underline{13} - \underline{11} = \underline{2}$



4. $\underline{15} - \underline{13} = \underline{2}$



5. $\underline{13} - \underline{7} = \underline{6}$

