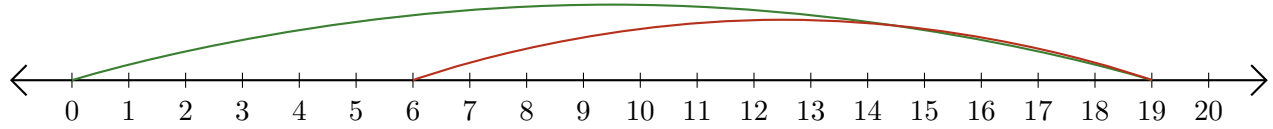


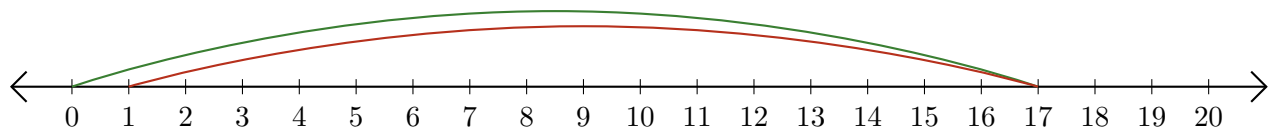
# Leer Rectas Numéricas (C)

Escriba la pregunta que representa cada recta numérica.

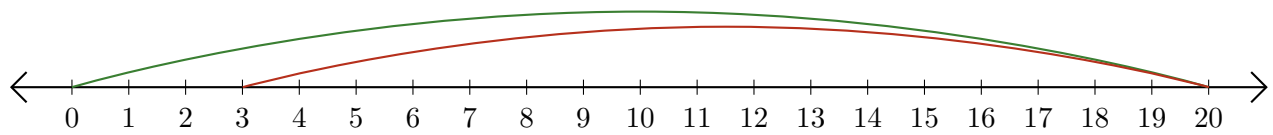
1.  $\underline{\quad} - \underline{\quad} = \underline{\quad}$



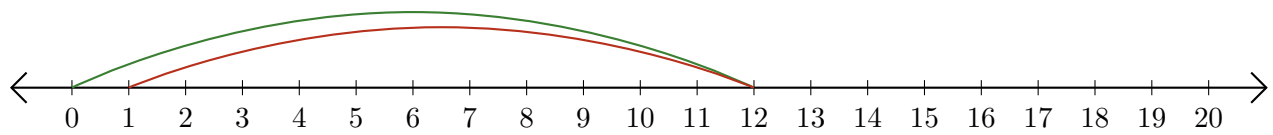
2.  $\underline{\quad} - \underline{\quad} = \underline{\quad}$



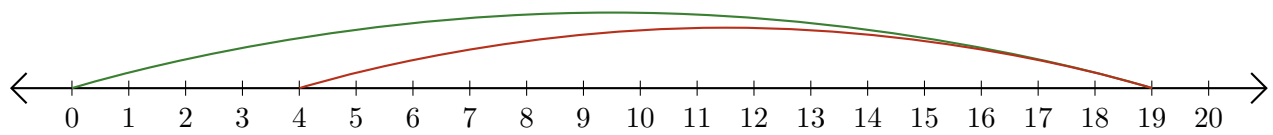
3.  $\underline{\quad} - \underline{\quad} = \underline{\quad}$



4.  $\underline{\quad} - \underline{\quad} = \underline{\quad}$



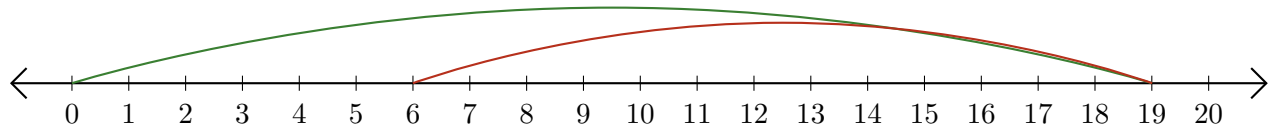
5.  $\underline{\quad} - \underline{\quad} = \underline{\quad}$



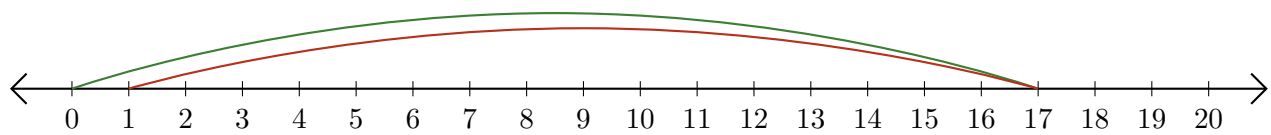
# Leer Rectas Numéricas (C) Respuestas

Escriba la pregunta que representa cada recta numérica.

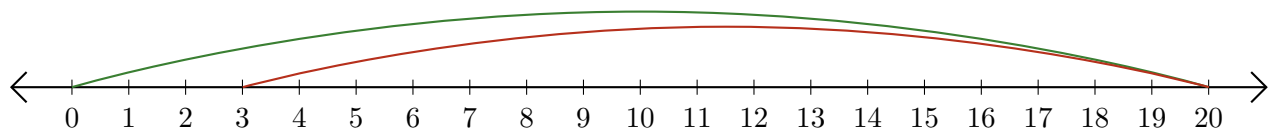
1.  $\underline{19} - \underline{13} = \underline{6}$



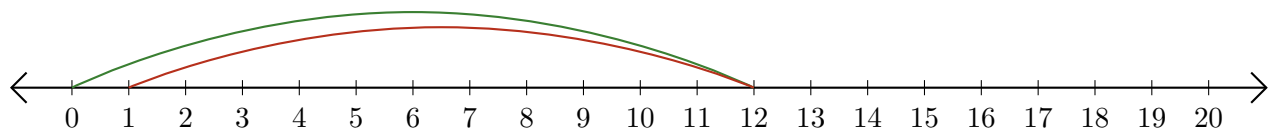
2.  $\underline{17} - \underline{16} = \underline{1}$



3.  $\underline{20} - \underline{17} = \underline{3}$



4.  $\underline{12} - \underline{11} = \underline{1}$



5.  $\underline{19} - \underline{15} = \underline{4}$

