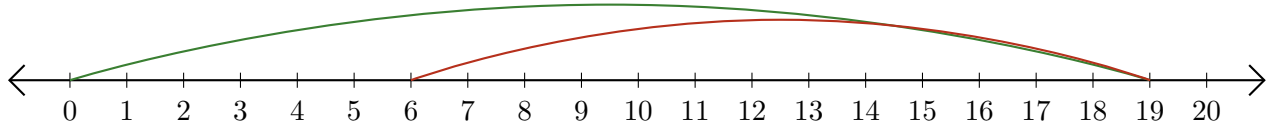


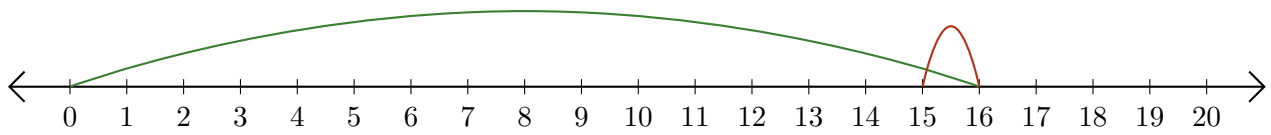
# Leer Rectas Numéricas (H)

Escriba la pregunta que representa cada recta numérica.

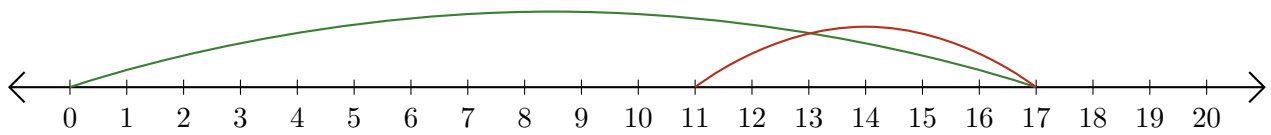
1.  $\underline{\quad} - \underline{\quad} = \underline{\quad}$



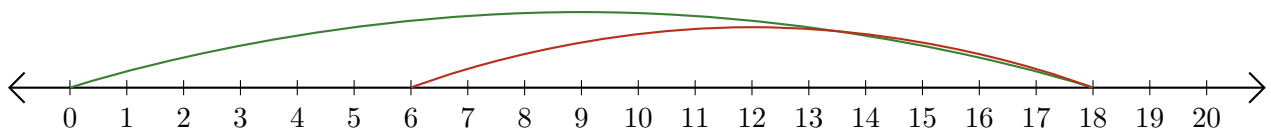
2.  $\underline{\quad} - \underline{\quad} = \underline{\quad}$



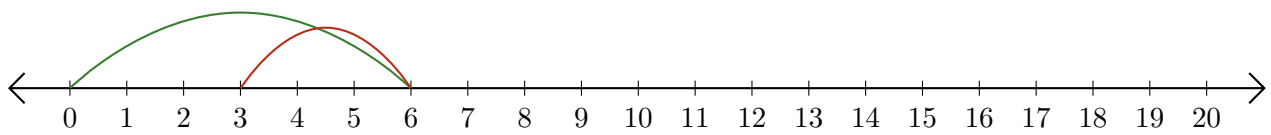
3.  $\underline{\quad} - \underline{\quad} = \underline{\quad}$



4.  $\underline{\quad} - \underline{\quad} = \underline{\quad}$



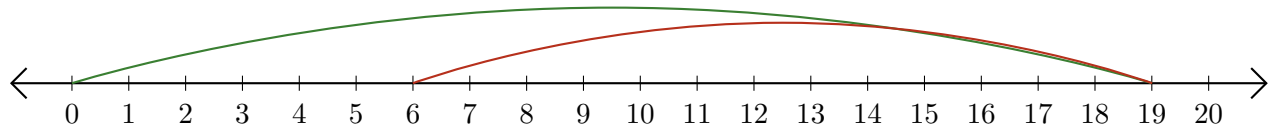
5.  $\underline{\quad} - \underline{\quad} = \underline{\quad}$



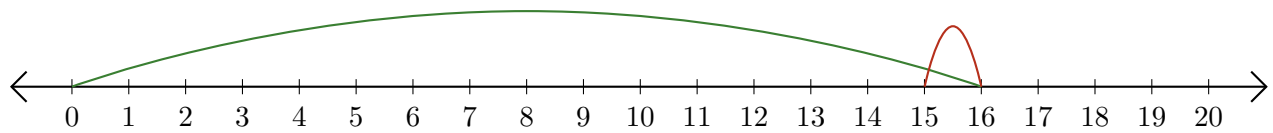
# Leer Rectas Numéricas (H) Respuestas

Escriba la pregunta que representa cada recta numérica.

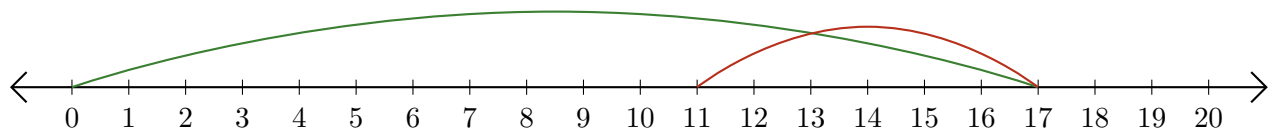
1.  $\underline{19} - \underline{13} = \underline{6}$



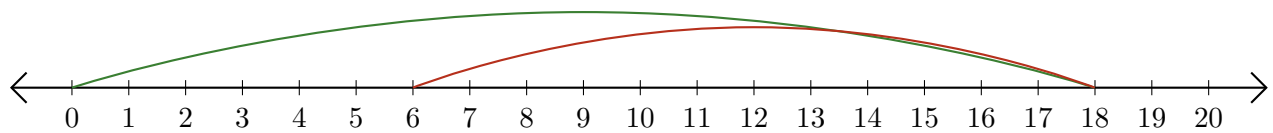
2.  $\underline{16} - \underline{1} = \underline{15}$



3.  $\underline{17} - \underline{6} = \underline{11}$



4.  $\underline{18} - \underline{12} = \underline{6}$



5.  $\underline{6} - \underline{3} = \underline{3}$

