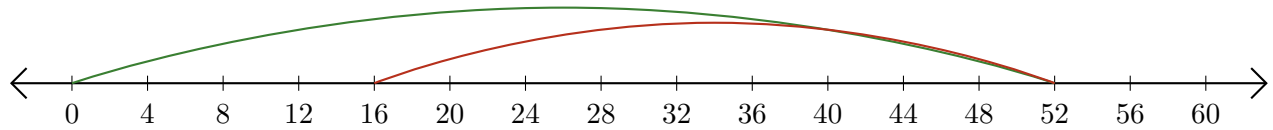


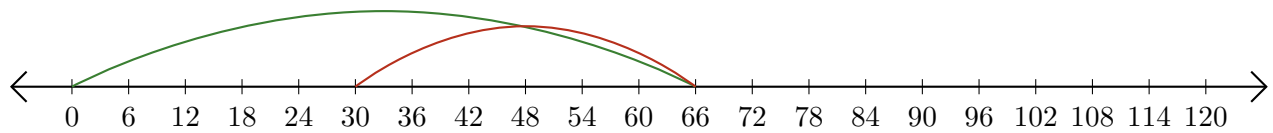
Leer Rectas Numéricas (A)

Escriba la pregunta que representa cada recta numérica.

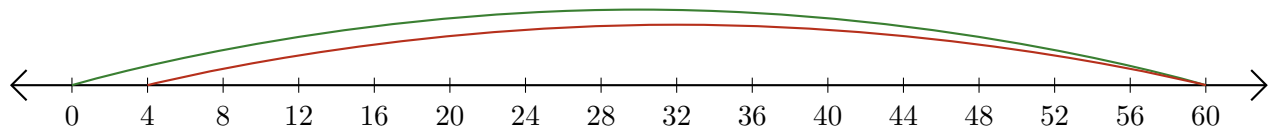
1. $\underline{\quad} - \underline{\quad} = \underline{\quad}$



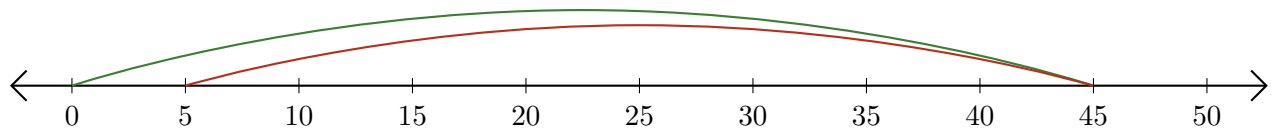
2. $\underline{\quad} - \underline{\quad} = \underline{\quad}$



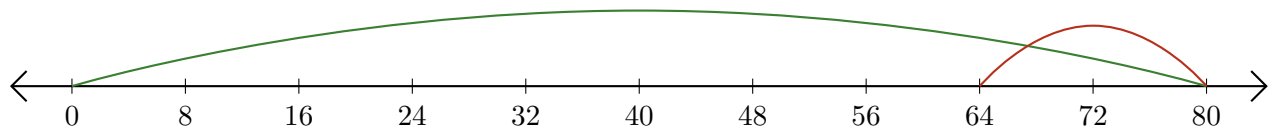
3. $\underline{\quad} - \underline{\quad} = \underline{\quad}$



4. $\underline{\quad} - \underline{\quad} = \underline{\quad}$



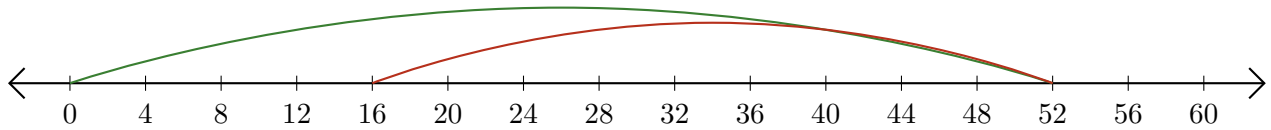
5. $\underline{\quad} - \underline{\quad} = \underline{\quad}$



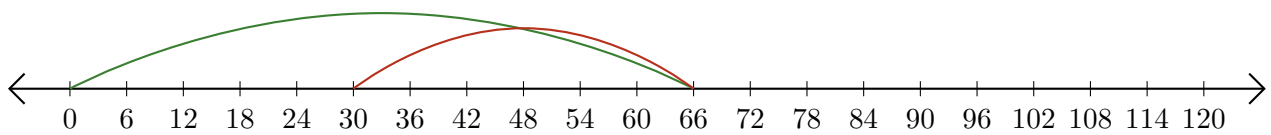
Leer Rectas Numéricas (A) Respuestas

Escriba la pregunta que representa cada recta numérica.

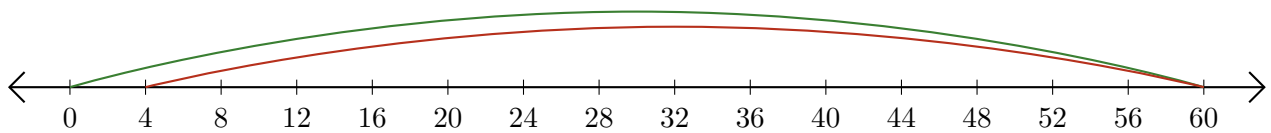
1. $\underline{52} - \underline{36} = \underline{16}$



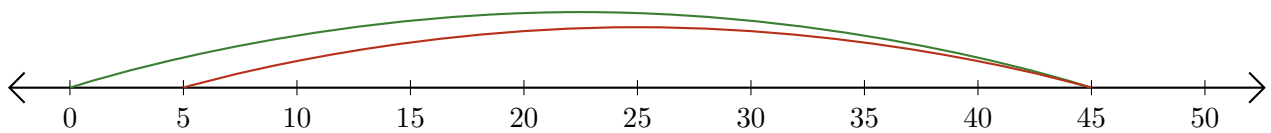
2. $\underline{66} - \underline{36} = \underline{30}$



3. $\underline{60} - \underline{56} = \underline{4}$



4. $\underline{45} - \underline{40} = \underline{5}$



5. $\underline{80} - \underline{16} = \underline{64}$

